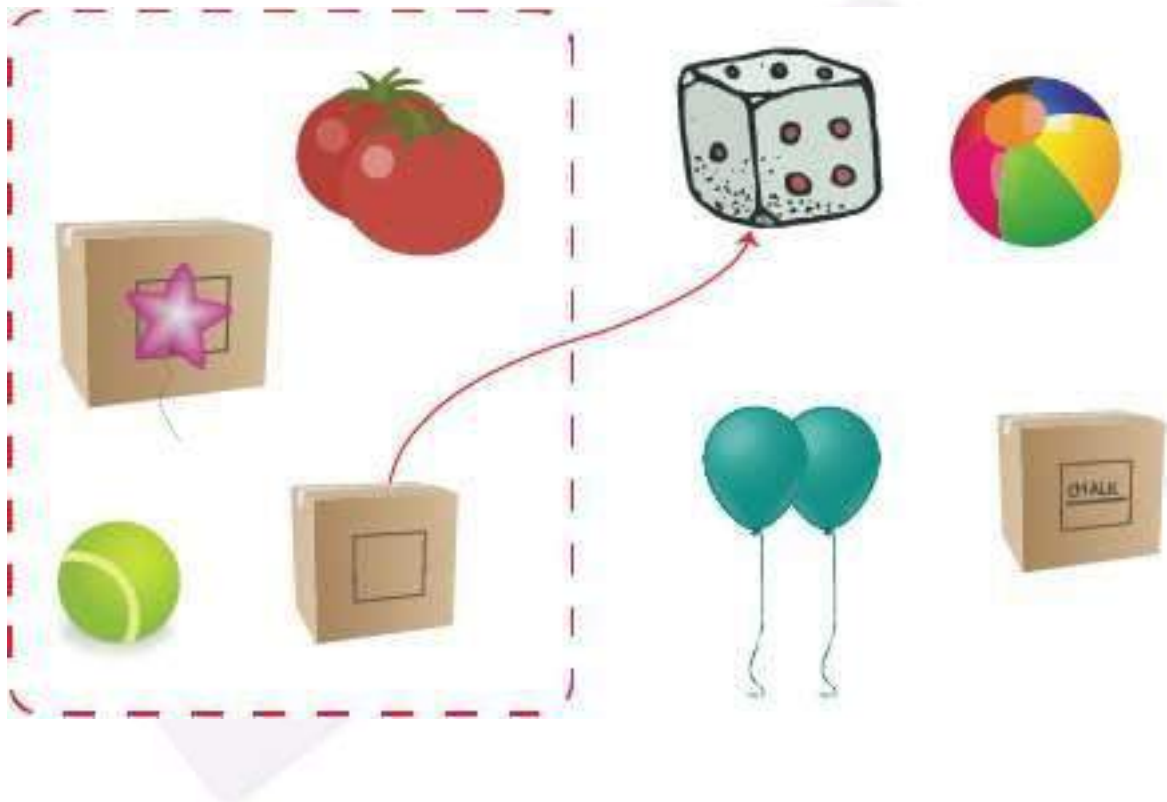



Section A:

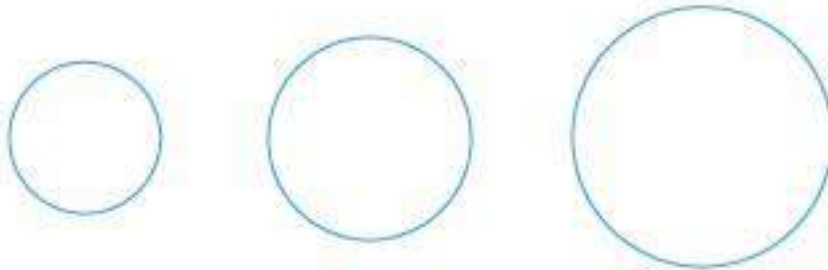
1: Match the similar shapes by drawing a line.



2: Tick the round object.



3: Colour the smallest shape (as shown for first question).



4. Fill in the missing numbers



5. What time is it?



6. In the following images which is the longest pencil?



7. Solve $? + 2 = 7$

$$+ \quad 2 \quad = \quad 7$$

8. Find the Missing Number



9. How many letters are there in the word 'PENCIL'?

P E N C I L


10. Name your friend who has a 4 letter Name



11. In the word 'PRIYA' how many times is the letter "A" repeated

P R I Y A

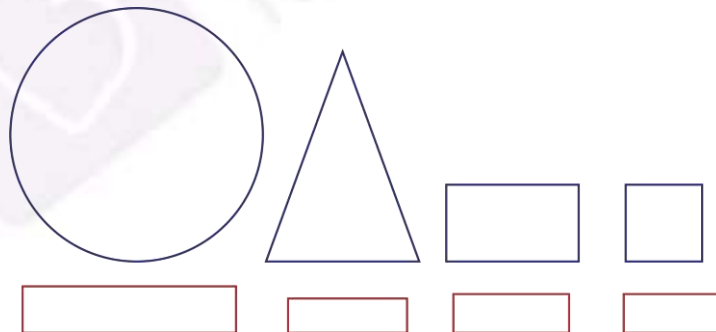
12. What is the next number in the following sequence of numbers?



13. Build the sequence



14. Identify the shape of the objects below



15. Circle the biggest cylinder.



16. Which number is bigger?



17. Draw a circle around any 7 stars?






18. Circle the smallest number from the following?



Section B:

1. Match the following.



$4 + 5$		$5 + 2$
$1 + 6$		$7 + 5$
$2 + 2$		$9 + 8$
		$3 + 1$

Arrows indicate a match between $2 + 2$ and the group of 4 apples, and between $3 + 1$ and the group of 4 apples.

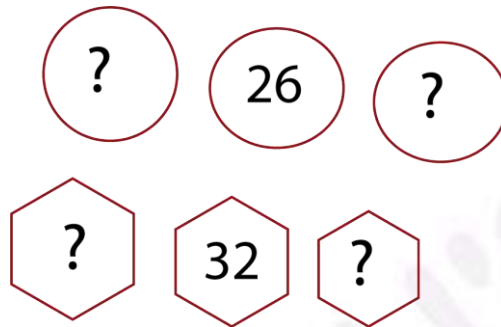
2. Match the following.

$4 - 3$	5
$9 - 5$	1
$11 - 6$	4

3. Identify the group with more tomatoes.

	
---	--

4. Write the numbers before and after 26 and 32



5. Pooja has 8 apples and Goutham has 10 apples. How many apples do they have altogether?

6. Add the Numbers.

$$18 + 12 = ?$$

7. Identify the pattern and fill in the blanks.

