

15 Money



Raju has the following coins and currency notes. Say what value they are of.

Coins

50 Paise 1 rupee 2 rupees 5 rupees

Currency Notes

5 rupees 10 rupees

20 rupees 50 rupees



Get your pupils to observe the pictures of coins and currency notes. Let them understand the value of each coin and note.

(a) Put '✓' in the box under the one-rupee coin.

(b) Put '✓' in the box under the five-rupee coin.

(c) Put '✓' in the box under the five-rupee note.



Get your pupil to understand the instructions and solve the exercises themselves.

(d) Put '✓' in the box under the ten-rupee note.

(e) Write what the following coins are.

rupees rupee rupees

(f) Write what the following notes are.

rupees rupees

rupees











Get your pupil to understand the instructions and solve the exercises themselves.

(g) Observe and say.



Get your pupil to understand the instructions and solve the exercises themselves.

(h) Match the notes on the left, with the change that is equal to on the right.

Get your pupils to observe the value of the notes on the left. Ask them to observe the total value of the coins on the right. Let them match the amounts of equal value.

© SCERT
not to be republished