


17 Money



1. Look at the currency notes and coins. Identify each one. Say how much each one is.



Get your pupils to observe the notes and coins. Let them identify them. Let them say how much is each of them.

2. Look at the coins shown below. Say in how many other ways we can give change.



Get your pupils to observe the above coins. Let them discuss in how many ways we can give change for coins of bigger value.

3. Look at the coins and notes shown below. Say in how many other ways we can give change.



Get your pupils to observe the above notes and coins. Let them discuss in how many ways we can give change for notes of bigger value.



Exercise

1. Look at the coins in each row. Write their value together.

(a)  +  = Rs.




(b)  +  = Rs.


(c)  +  = Rs.


(d)  +  = Rs.


2. Look at the price of each item. Write in circles the value of coins equal to the price of the item. Look at the example.

Example:

 =  + 
Rs. 6

(a)  = + +
Rs. 8

(b)  = + +
Rs. 9

(c)  = +
Rs. 10



Get your pupils to understand the instruction for each problem. Let them solve the problems by themselves.