

पाठ 3

शून्य की समझ


गुब्बारे कितने?



2



1



0











| | | | | | |
|---|---|---|---|---|---|
| ○ | ○ | ○ | ○ | ○ | ○ |
| ○ | ○ | ○ | ○ | ○ | ○ |









| | | | | | | | | |
|---|---|---|---|---|---|---|---|---|
| ○ | ○ | ○ | ○ | ○ | ○ | ○ | ○ | ○ |
| | | | | | | | | |
| | | | | | | | | |
| | | | | | | | | |
| | | | | | | | | |
| | | | | | | | | |




बच्चे कितने ?

| | |
|---|--|
|  |  |
|  |  |
|  |  |
|  |  |

बन्दर कितने?

| | |
|---|--|
|  |  |
|  |  |
|  |  |
|  |  |

लिखिए

| | | | | | | | | |
|---|--|----|----|----|----|----|----|----|
|  | | 10 | 10 | 10 | 10 | 10 | 10 | 10 |
| | | | | | | | | |
| 10 | | | | | | | | |
| 10 | | | | | | | | |
| 10 | | | | | | | | |
| 10 | | | | | | | | |
| 10 | | | | | | | | |
| 10 | | | | | | | | |
| 10 | | | | | | | | |
| 10 | | | | | | | | |
| 10 | | | | | | | | |

