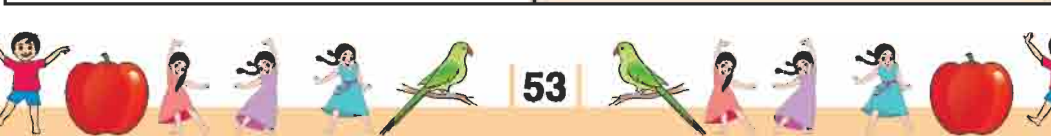
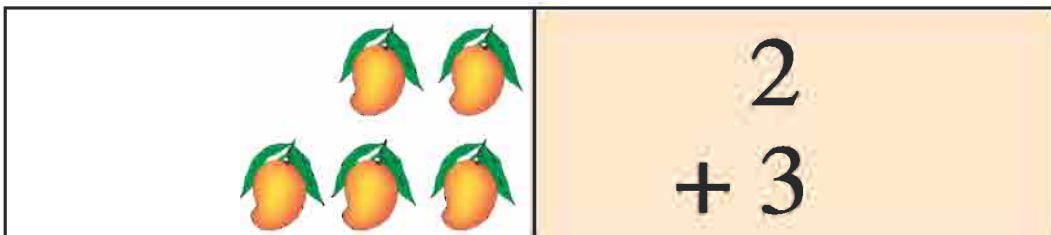
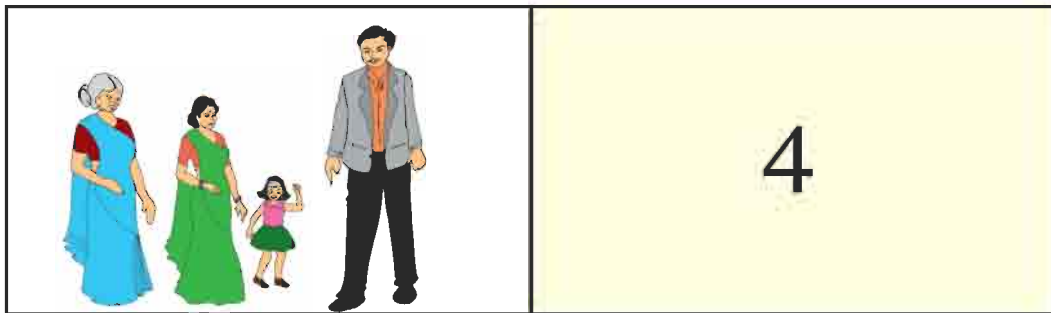



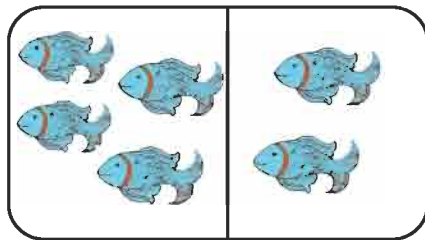


पाठ 5
जोड़ना







$$\boxed{4} + \boxed{2} = \boxed{6}$$



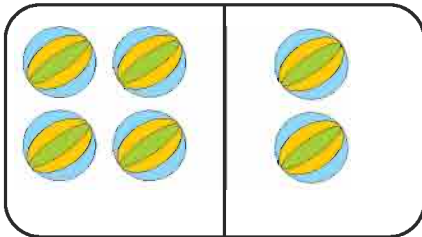
$$\boxed{} + \boxed{} = \boxed{}$$



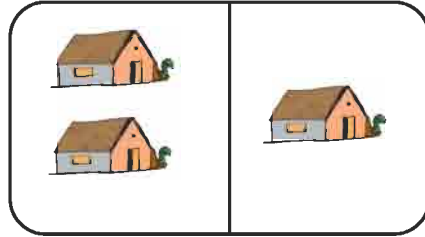
$$\boxed{} + \boxed{} = \boxed{}$$



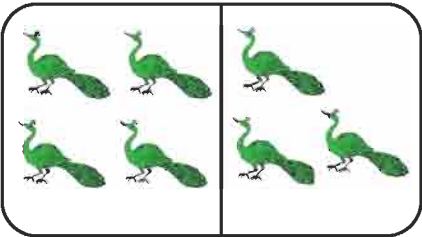
$$\boxed{} + \boxed{} = \boxed{}$$



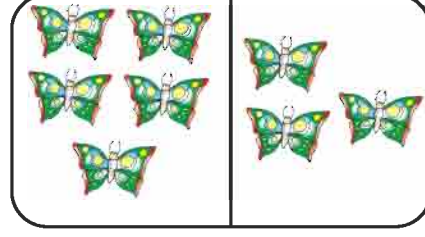
$$\boxed{} + \boxed{} = \boxed{}$$



$$\boxed{} + \boxed{} = \boxed{}$$




$$\boxed{} + \boxed{} = \boxed{}$$

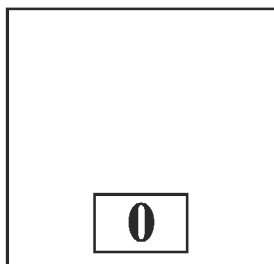


$$\boxed{} + \boxed{} = \boxed{}$$

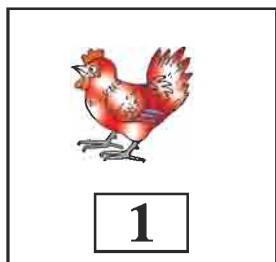
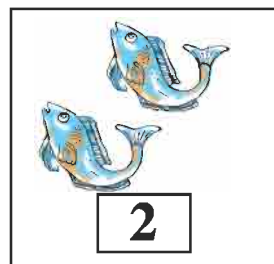
शून्य का जोड़



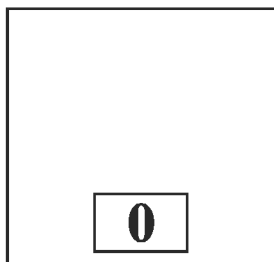
+





=



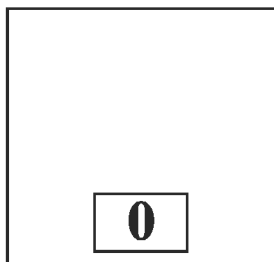
+




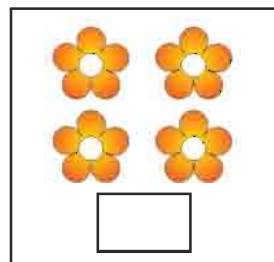
=




+



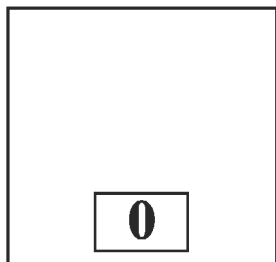

=




+




=



+



=





चित्र में देखकर बताएँ

- कितनी मछली हैं?
- कितने बतख हैं?
- कितनी तितलियाँ हैं?
- कितने फूल हैं?
- पेड़ में कितने आम लगे हैं?
- कितने हिरण हैं?
- कितने मकान है?
- मछली और बतख मिलकर कितने?



जोड़िए

	$\begin{array}{r} 3 \\ + 4 \\ \hline 7 \end{array}$	(6)	$\begin{array}{r} 7 \\ + 8 \\ \hline \end{array}$
(1)	$\begin{array}{r} 2 \\ + 3 \\ \hline \end{array}$	(7)	$\begin{array}{r} 6 \\ + 7 \\ \hline \end{array}$
(2)	$\begin{array}{r} 4 \\ + 5 \\ \hline \end{array}$	(8)	$\begin{array}{r} 8 \\ + 9 \\ \hline \end{array}$
(3)	$\begin{array}{r} 1 \\ + 7 \\ \hline \end{array}$	(9)	$\begin{array}{r} 7 \\ + 7 \\ \hline \end{array}$
(4)	$\begin{array}{r} 7 \\ + 4 \\ \hline \end{array}$	(10)	$\begin{array}{r} 9 \\ + 8 \\ \hline \end{array}$
(5)	$\begin{array}{r} 4 \\ + 6 \\ \hline \end{array}$	(11)	$\begin{array}{r} 9 \\ + 9 \\ \hline \end{array}$



जोड़िए

$3 + 2 = \square$

$5 + 1 = \square$

$2 + 2 = \square$

$2 + 6 = \square$

$3 + 2 = \square$

$4 + 1 = \square$

$3 + 3 = \square$

$6 + 1 = \square$

$5 + 2 = \square$

$3 + 2 = \square$

$4 + 4 = \square$

$5 + 4 = \square$

$5 + 5 = \square$

$7 + 3 = \square$

$6 + 6 = \square$

$9 + 1 = \square$

$7 + 7 = \square$

$4 + 2 = \square$

$7 + 5 = \square$

$7 + 1 = \square$

