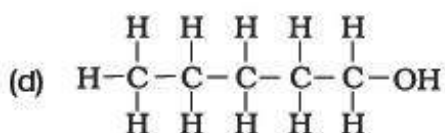
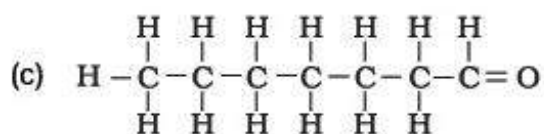
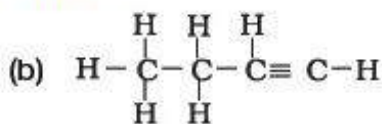
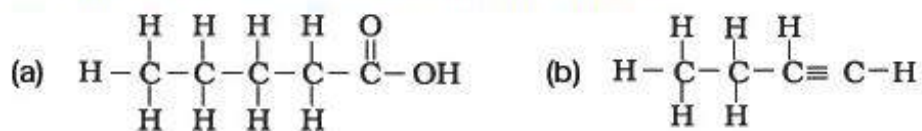


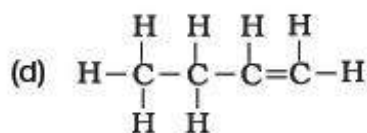
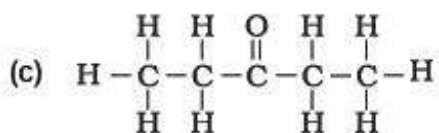
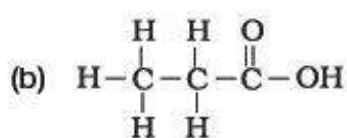
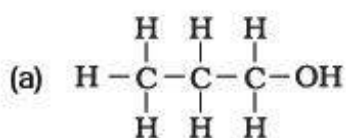
Short Answer Type Questions

1. Draw the electron dot structure of ethyne and also draw its structural formula

2. Write the names of the following compounds



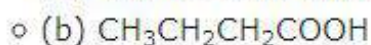
3. Identify and name the functional groups present in the following compounds.



4. A compound X is formed by the reaction of a carboxylic acid $\text{C}_2\text{H}_4\text{O}_2$ and an alcohol in presence of a few drops of H_2SO_4 . The alcohol on oxidation with alkaline KMnO_4 followed by acidification gives the same carboxylic acid as used in this reaction. Give the names and structures of (a) carboxylic acid, (b) alcohol and (c) the compound X. Also write the reaction.

5. Why detergents are better cleansing agents than soaps? Explain.

6. Name the functional groups present in the following compounds



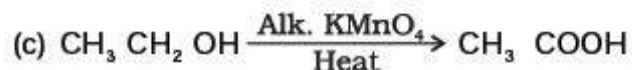
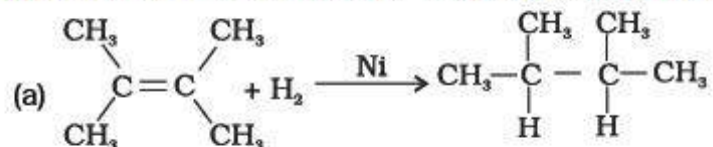
- (c) $\text{CH}_3\text{CH}_2\text{CH}_2\text{CH}_2\text{CHO}$
- (d) $\text{CH}_3\text{CH}_2\text{OH}$

7. How is ethene prepared from ethanol? Give the reaction involved in it.
8. Intake of small quantity of methanol can be lethal. Comment.
9. A gas is evolved when ethanol reacts with sodium. Name the gas evolved and also write the balanced chemical equation of the reaction involved.
10. Ethene is formed when ethanol at 443 K is heated with excess of concentrated sulphuric acid. What is the role of sulphuric acid in this reaction? Write the balanced chemical equation of this reaction.
11. Carbon, Group (14) element in the Periodic Table, is known to form compounds with many elements.
Write an example of a compound formed with
- (a) chlorine (Group 17 of Periodic Table)
 - (b) oxygen (Group 16 of Periodic Table)
12. In electron dot structure, the valence shell electrons are represented by crosses or dots.
- (a) The atomic number of chlorine is 17. Write its electronic configuration
 - (b) Draw the electron dot structure of chlorine molecule.
13. Catenation is the ability of an atom to form bonds with other atoms of the same element. It is exhibited by both carbon and silicon. Compare the ability of catenation of the two elements. Give reasons.
14. Unsaturated hydrocarbons contain multiple bonds between the two C-atoms and show addition reactions. Give the test to distinguish ethane from ethene.
15. Match the reactions given in Column (A) with the names given in column (B).

Column (A)	Column (B)
(a) $\text{CH}_3\text{OH} + \text{CH}_3\text{COOH} \xrightarrow{\text{H}^+} \text{CH}_3\text{COOCH}_3 + \text{H}_2\text{O}$	(i) Addition reaction
(b) $\text{CH}_2 = \text{CH}_2 + \text{H}_2 \xrightarrow{\text{Ni}} \text{CH}_3 - \text{CH}_3$	(ii) Substitution reaction
(c) $\text{CH}_4 + \text{Cl}_2 \xrightarrow{\text{Sunlight}} \text{CH}_3\text{Cl} + \text{HCl}$	(iii) Neutralisation reaction
(d) $\text{CH}_3\text{COOH} + \text{NaOH} \longrightarrow \text{CH}_3\text{COONa} + \text{H}_2\text{O}$	(iv) Esterification reaction

16. Write the structural formulae of all the isomers of hexane.

17. What is the role of metal or reagents written on arrows in the given chemical reactions?



Long Answer Type Questions

- A salt X is formed and a gas is evolved when ethanoic acid reacts with sodium hydrogencarbonate. Name the salt X and the gas evolved. Describe an activity and draw the diagram of the apparatus to prove that the evolved gas is the one which you have named. Also, write chemical equation of the reaction involved.
- What are hydrocarbons? Give examples.
 - Give the structural differences between saturated and unsaturated hydrocarbons with two examples each.
 - What is a functional group? Give examples of four different functional groups.
- Name the reaction which is commonly used in the conversion of vegetable oils to fats.

Explain the reaction involved in detail.

4. (a) Write the formula and draw electron dot structure of carbon tetrachloride.
(b) What is saponification? Write the reaction involved in this process.
5. Esters are sweet-smelling substances and are used in making perfumes. Suggest some activity and the reaction involved for the preparation of an ester with well labeled diagram.
6. A compound C (molecular formula, $C_2H_4O_2$) reacts with Na – metal to form a compound R and evolves a gas which burns with a pop sound. Compound C on treatment with an alcohol A in presence of an acid forms a sweet smelling compound S (molecular formula, $C_3H_6O_2$). On addition of NaOH to C, it also gives R and water. S on treatment with NaOH solution gives back R and A. Identify C, R, A, S and write down the reactions involved.
7. Look at Figure 4.1 and answer the following questions

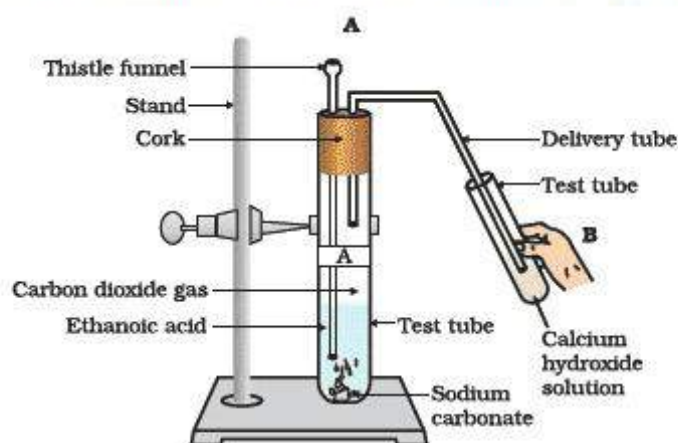


Fig. 4.1

- (a) What change would you observe in the calcium hydroxide solution taken in tube B?
 - (b) Write the reaction involved in test tubes A and B respectively.
 - (c) If ethanol is given instead of ethanoic acid, would you expect the same change?
 - (d) How can a solution of lime water be prepared in the laboratory?
8. How would you bring about the following conversions? Name the process and write the reaction involved. Fig. 4.1
- (a) ethanol to ethene.

- (b) propanol to propanoic acid.

Write the reactions.

9. Draw the possible isomers of the compound with molecular formula C_3H_6O and also give their electron dot structures.
10. Explain the given reactions with the examples
- (a) Hydrogenation reaction
 - (b) Oxidation reaction
 - (c) Substitution reaction
 - (d) Saponification reaction
 - (e) Combustion reaction
11. An organic compound A on heating with concentrated H_2SO_4 forms a compound B which on addition of one mole of hydrogen in presence of Ni forms a compound C. One mole of compound C on combustion forms two moles of CO_2 and 3 moles of H_2O . Identify the compounds A, B and C and write the chemical equations of the reactions involved.