
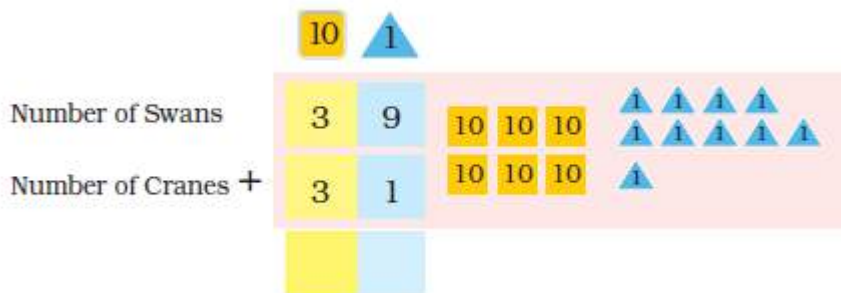


How Many Cranes and Swans?

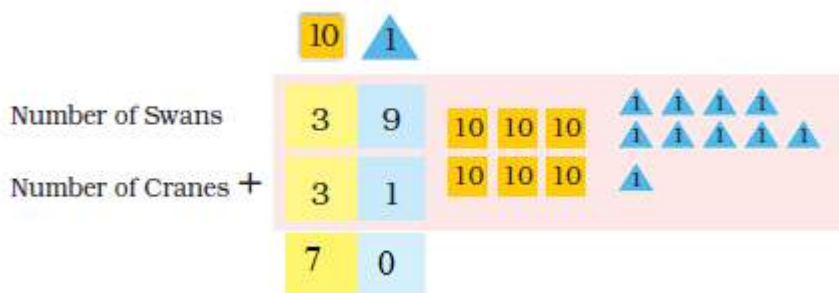


In the same way, we will add the number of swans and cranes.

Question: 1
How many Swans and Cranes are there in all?



Answer:

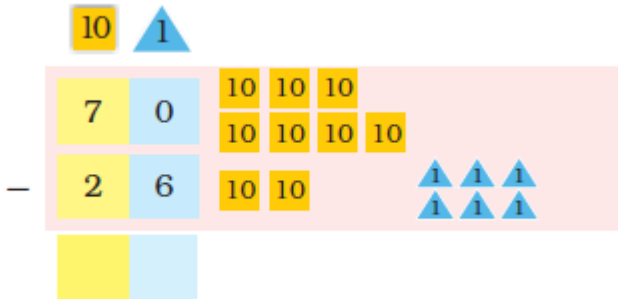


The total number of swans and cranes is 70.

One morning, Suraj saw that out of 70 birds only 26 birds were left. The rest had gone away.

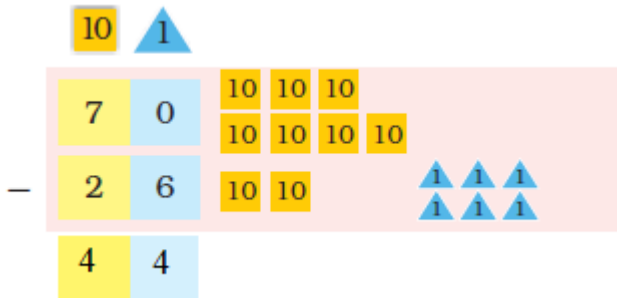
Question: 2

How many birds have gone away?



_____ birds have gone away.

Answer:

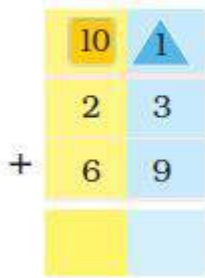


44 birds have gone away.

Practice Time

Question: 3

Rahul scored 23 runs in a cricket match and Dhoni scored 69. How many runs did they make in all?



They made _____ runs in all.

Answer:

$$\begin{array}{r}
 10 \quad 1 \\
 2 \quad 3 \\
 + \quad 6 \quad 9 \\
 9 \quad 2
 \end{array}$$



They made 92 runs in all.

Question: 4

Dema sold 48 shawls in a fair. Next day sold 17 more shawls. How many shawls in all did he sell?

$$\begin{array}{r}
 10 \quad 1 \\
 \square \quad \square \\
 \square \quad \square \\
 \square \quad \square
 \end{array}$$

Dema sold _____ shawls in all.

Answer:

$$\begin{array}{r}
 10 \quad 1 \\
 4 \quad 8 \\
 + \quad 1 \quad 7 \\
 6 \quad 5
 \end{array}$$

Dema sold 67 shawls in all.

Question: 5

Bunnu rabbit can eat 29 carrots in one week. Munnu rabbit can eat 42 carrots in one week. Who eats more in a week, and by how much?

	10	1
<input type="checkbox"/>		



_____ eats _____ more carrots.

Answer:

	10	1
	4	2
<input type="checkbox"/>	2	9
	1	3



Munnu eats 13 more carrots.

Question: 6

Neha is 29 years old. Her mother is 58 years old. How many years older is Neha's mother?

	10	1
<input type="checkbox"/>		

Mother is _____ years older than Neha.

Answer:

	10	1
	5	8
<input type="checkbox"/>	2	9
	2	9

Mother is 29 years older than Neha.

Question: 7

Find the Answer



	2	4		3	2		6	8		1	9
+	1	7	-	2	7	+	1	3	+	3	9

	5	4		7	3		8	0		4	3
+	4	3	-	5	9	-	6	7	-	2	7

	3	9		4	8		9	4		7	6
-	2	5	+	3	8	-	8	7	-	2	8

Answer:




	2	4		3	2		6	8		1	9
+	1	7	-	2	7	+	1	3	+	3	9
	4	1		0	5		8	1		5	8

	5	4		7	3		8	0		4	3
+	4	3	-	5	9	-	6	7	-	2	7
	9	7		1	4		1	3		1	6

	3	9		4	8		9	4		7	6
-	2	5	+	3	8	-	8	7	-	2	8
	1	4		8	6		0	7		4	8

Catch the Right Bus!
Question: 8



$$\begin{array}{r} \text{Card No.} \\ 27 \\ + 22 \\ \hline 49 \end{array}$$

$$\begin{array}{r} \text{Card No.} \\ 48 \\ + 19 \\ \hline \end{array}$$

$$\begin{array}{r} \text{Card No.} \\ 88 \\ - 21 \\ \hline \end{array}$$

$$\begin{array}{r} \text{Card No.} \\ 47 \\ + 28 \\ \hline \end{array}$$


$$\begin{array}{r} \text{Card No.} \\ 93 \\ - 18 \\ \hline \end{array}$$

$$\begin{array}{r} \text{Card No.} \\ 37 \\ + 12 \\ \hline \end{array}$$

$$\begin{array}{r} \text{Card No.} \\ 38 \\ + 37 \\ \hline \end{array}$$

$$\begin{array}{r} \text{Card No.} \\ 25 \\ + 24 \\ \hline \end{array}$$

$$\begin{array}{r} \text{Card No.} \\ 99 \\ - 32 \\ \hline \end{array}$$



$$\begin{array}{r} - \\ \hline 49 \end{array}$$

$$\begin{array}{r} + \\ \hline 75 \end{array}$$

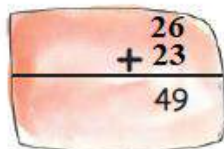
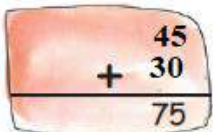
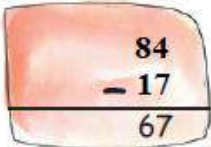
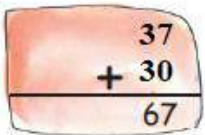
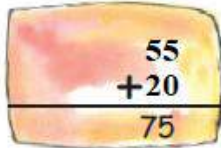

$$\begin{array}{r} + \\ \hline 67 \end{array}$$

$$\begin{array}{r} - \\ \hline 67 \end{array}$$

$$\begin{array}{r} + \\ \hline 75 \end{array}$$

$$\begin{array}{r} + \\ \hline 49 \end{array}$$

Answer:



BYJU'S
The Learning App

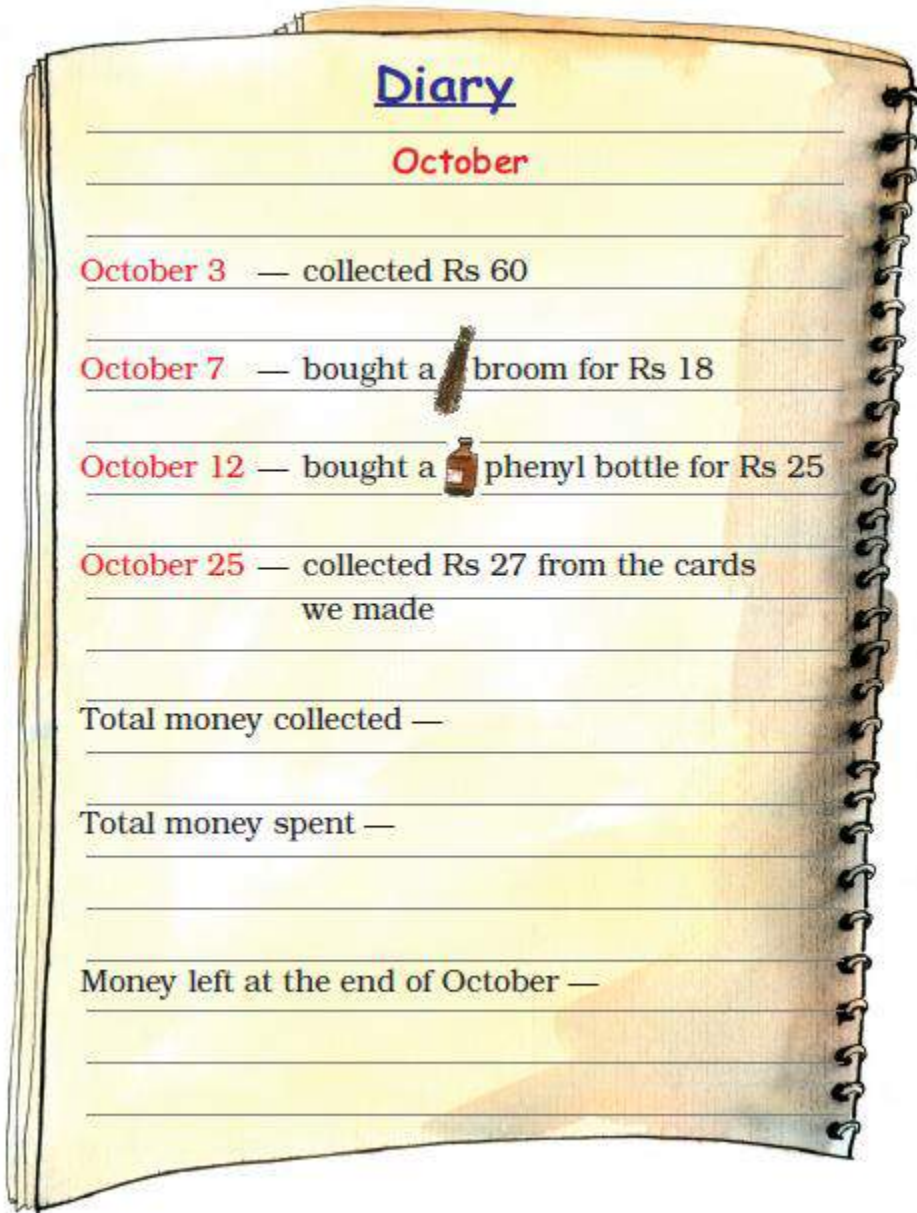
Chakachak Toli



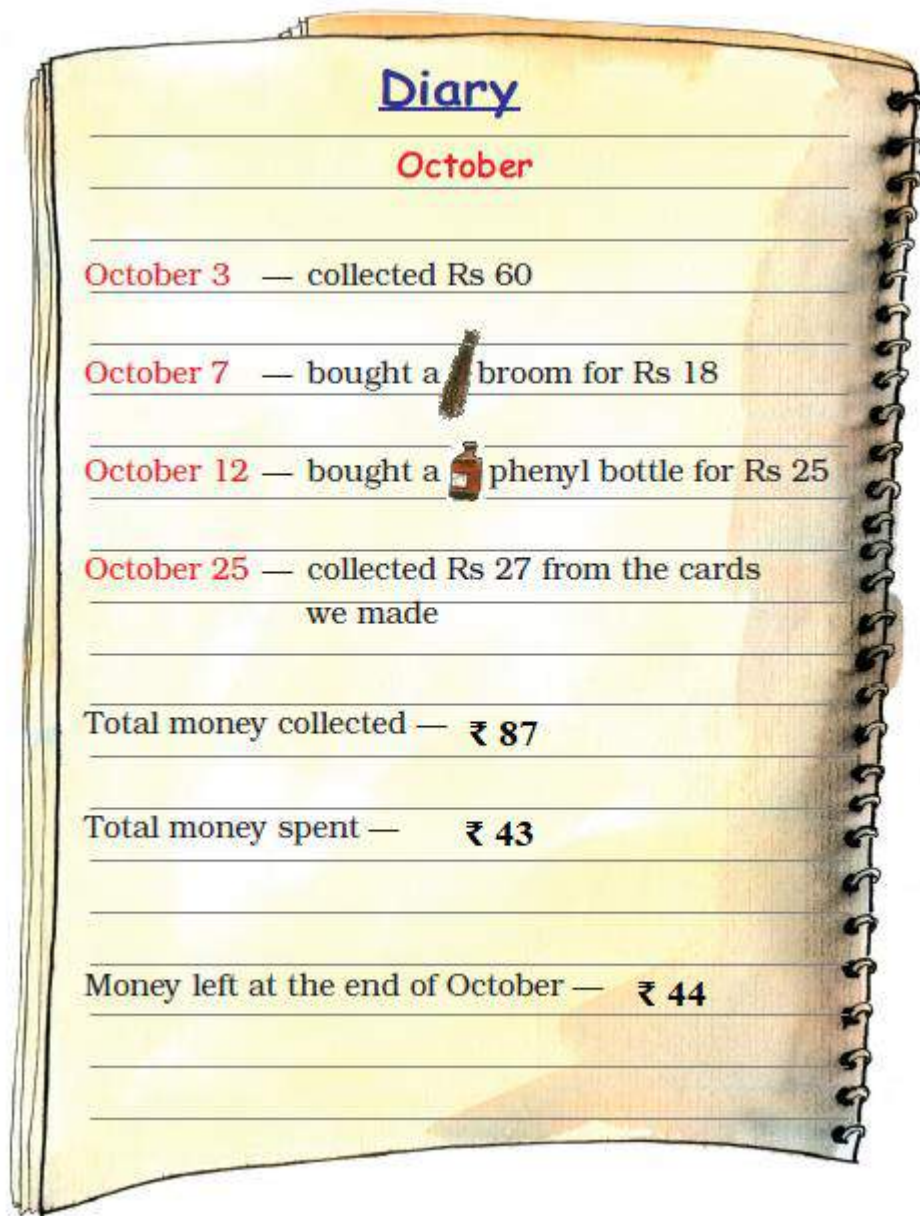
Chakachak in Hindi means clean and shining. Chakachak Toli is the name of a group of children who work to clean their park.

Question: 9

Shreya collects the money and writes it in her diary. Help Shreya to find how much money is left at the end of the month.








Answer:



Question: 10

Children of Chakachak Toli counted the number of trees in the park.

Trees	Number of trees
	90
	75
	82
	68
	94

(a)  trees were more than  trees. How many more? _____

Answer:
8 trees.

(b) Draw the tree which is least in number.


Answer:



(c) Draw the tree which is most in number.

Answer:



(d) Children planted some more  trees to make 100. How many more did they plant? _____

Answer:
25 trees.