

**Question 1:**

Fill in the blanks

**Answer:**

A jump from 2 to 12 is like taking 1 step.

**Question 2:**

How many steps did I go in all?

**Answer:**

21 steps overall.

**FIND MY FOOD****Question 1:**

Fill in the blanks

**Answer:**

- a) 10 less than 34 is **24**.
- b)  $53 - 20 = \mathbf{33}$
- c) 11 more than 31 is **42**.
- d) 11 less than 66 is **55**.
- e)  $62 + 13 = \mathbf{75}$
- f) 23 less than 89 is **66**.
- g) 10 and 40 more is **50**.
- h) 9 added to 28 gives **37**.
- i) The sum of 9 and 44 is **53**.
- j) Reducing 98 by 34 gives **64**.
- k) 4 and 37 more is **41**.
- l) Take 35 away from 83. We get **48**.

**Question 2:**

Fill in the blanks

**Answer:**


- $37 + 9 = \mathbf{46}$
- $65 - 30 = \mathbf{35}$
- $\mathbf{67} = 46 + 21$
- $\mathbf{57} = 87 - 30$
- $66 - \mathbf{55} = 11$
- $45 + \mathbf{54} = 99$
- $\mathbf{49} + 26 = 75$
- $\mathbf{56} - 21 = 35$
- $36 = \mathbf{27} + 9$
- $40 + \mathbf{36} = 76$
- $98 = \mathbf{48} + 50$
- $57 - \mathbf{37} = 20$

**ADDING MADE EASY**

**Question 1:**

See if you can do the same with these sums.

**Answer:**


$$37 + 22 = 30 + 7 + 20 + 2$$


$$= 50 + 7 + 2$$



$$= 50 + 9 = 59$$

$$73 + 24 = 70 + 3 + 20 + 4$$


$$= 90 + 3 + 4$$


$$= 90 + 7 = 97$$


$$56 + 21 = 50 + 6 + 20 + 1$$

$$= 70 + 6 + 1$$

$$= 70 + 7 = 77$$

**LET ME TELL YOU A STORY.....**

**Question 1:**

Fill in the blanks

**Answer:**

$$33 + 42 = 75$$

$$19 + 61 = 80$$

$$90 = 48 + 42$$

$$60 = 33 + 27$$

$$97 = 34 + 63$$

$$117 = 53 + 64$$

$$55 + 25 = 80$$





$$67 + 25 = 92$$

$$72 + 56 = 128$$

**Question 2:**

The old deer said — we were 240 in number, now how many are we in all?

**Answer:**

Number of  and   
Number of  and 

100	10	1	
1	6	2	
+	7	5	
2	3	7	

**Question 3:**

Can you guess now, if the baby lion will go back home? Has the baby lion eaten up any animal?

**Answer:**

No, the baby lion can not go home now. There were 240 animals but now there are only 237 of them. The baby lion has eaten  $240 - 237 = 3$  animals.

**HOW MANY BULBS?**

**Question 1:**

A shopkeeper Rafi had 153 candles. Paras gave him 237 more candles. How many candles does Rafi have now?

**Answer:**

100	10	1	
2	3	7	
+	1	5	3
Sum	3	9	0

**Question 2:**

Is the sum more than 400 or less than 400?

**Answer:**

No, the sum is less than 400.

**Question A:**

A train compartment is carrying 132 people. Another compartment is carrying 129 people. In all, how many people are there in both the compartments?

**Answer:**

Number of people in first compartment= 132

Number of people in second compartment= 129

$$\begin{array}{r} 132 \\ + 129 \\ \hline \end{array}$$

**261** people are there in total.

**Question B:**

Shanu found 138 pebbles. Karim found 44 pebbles. How many pebbles did they find in all?

**Answer:**

$$\begin{array}{r} 138 \\ + 44 \\ \hline \end{array}$$

**182** pebbles in total.

**Question C:**

A teacher kept a note of which fruits students like in her school. This is what she found:

Students	Oranges	Mangoes	Total
Girls	136	240	
Boys	128	243	
Total			

Find out:

- How many students in the school like oranges?
- How many students in the school like mangoes?
- Altogether, how many students are there in the school?
- Is the number of girls more than 350 or less than 350?

**Answers:**

- (a) Number of students who like oranges =  $136 + 128 = 264$   
 (b) Number of students who like mangoes =  $240 + 243 = 483$   
 (c) Total number of students in the school = Total number of girls + Total number of boys  
 $= (136 + 240) + (128 + 243)$   
 $= 376 + 371$   
 $= 747$   
 (d) Number of girls =  $136 + 240 = 376$   
 Thus, the number of girls is more than 350.

### PRACTICE TIME

#### Question A:

- (i)  $345 + 52$                       (iv)  $643 + 345$   
 (ii)  $492 + 29$                     (v)  $750 + 219$   
 (iii)  $245 + 93$

#### Answer:

- (i) 397  
 (ii) 521  
 (iii) 338  
 (iv) 988  
 (v) 969

#### Question B:

Fill in the blanks

#### Answer:

B. 319	304	363
+ 323	+ 406	+ 456
642	710	819
427	684	
+ 248	+ 232	
675	916	

#### Question:

Fill in the blanks

#### Answer:

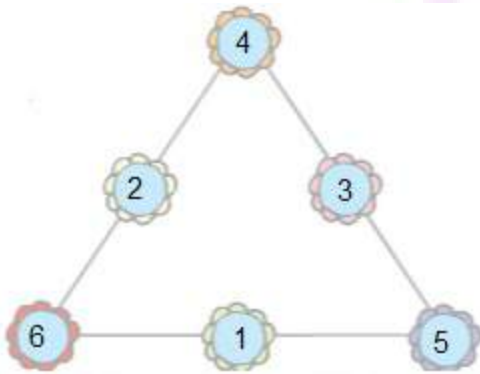
59	78	83
50 + 9	70 + 8	80 + 3
30 + 29	50 + 28	40 + 43
19 + 40	30 + 48	20 + 63
59 + 0	49 + 29	32 + 51
99	102	168
90 + 9	100 + 2	160 + 8
60 + 39	92 + 10	90 + 78
30 + 69	60 + 42	100 + 68
29 + 70	52 + 50	80 + 88

**Question:**

Can you solve this puzzle?

Write the numbers 1, 2, 3, 4, 5, 6 in the circles, so that the sum of the numbers on each side of the figure is 12.

**Answer:**



**Question:**

Do the sums mentally

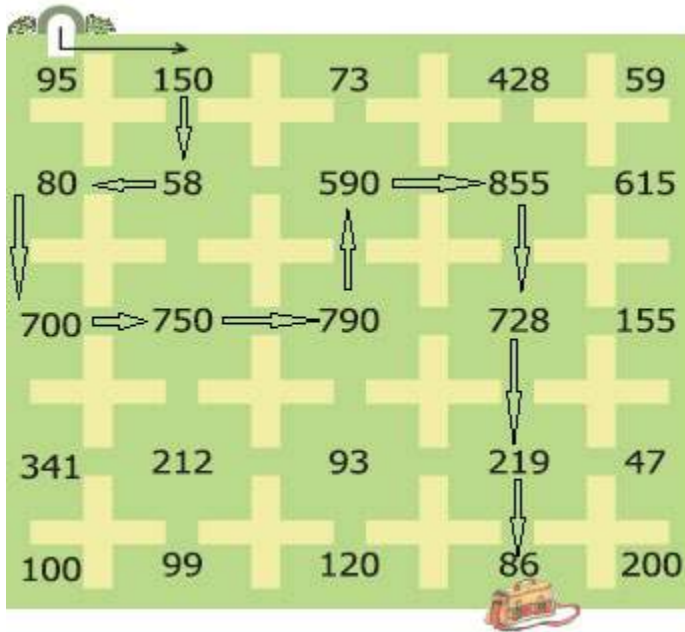
**Answer:**

- |                    |     |                    |     |
|--------------------|-----|--------------------|-----|
| a) $75 + 20 =$     | 95  | g) $670 + 120 =$   | 790 |
| b) $90 + 60 =$     | 150 | h) $380 + 210 =$   | 590 |
| c) $25 + 30 + 3 =$ | 58  | i) $205 + 650 =$   | 855 |
| d) $9 + 40 + 31 =$ | 80  | j) $128 + 600 =$   | 728 |
| e) $500 + 200 =$   | 700 | k) $150 + 69 =$    | 219 |
| f) $400 + 350 =$   | 750 | l) $37 + 46 + 3 =$ | 86  |

**Question:**

Draw a line through the numbers which are answers written in the boxes above.

**Answer:**



**CARD GAME**

**Question:**

Here are the cards for you. Work out the combination. Place the cards in the right boxes.

**Answer:**

a)

	50		70		20		
50	+	20	=	70			
20	+	50	=	70			

	50		20		70		
70	-	50	=	20			
70	-	20	=	50			

b)

	30		42		12		
30	+	12	=	42			
12	+	30	=	42			

	30		42		12		
42	-	12	=	30			
42	-	30	=	12			

