

Question 1:

What is there on your left?

Answer:

There is the classroom wall on my left side.

Question 2:

What things are there behind you?

Answer:

My classmates and desks are there just behind me.

Question 3:

On whose left side are you sitting?

Answer:

I am sitting on the left side of Anuj.

Question 4:

What is there on your right?

Answer:

There is a window on my right.

Question 5:

Who is sitting on your right?

Answer:

Anuj is sitting on my right.

Question 6:

What is in front of you?

Answer:

There is a blackboard hanging on the wall in front of me.

Question 7:

On whose right are you sitting?

Answer:


I am sitting on the right side of Tanya.

Question 8:

This is a picture with Ruchira in the centre. In this picture, draw –

- a) A book behind Ruchira.
- b) An animal on Ruchira's right.
- c) A chair on Ruchira's left.
- d) A tree in front of Ruchira.

Answer:

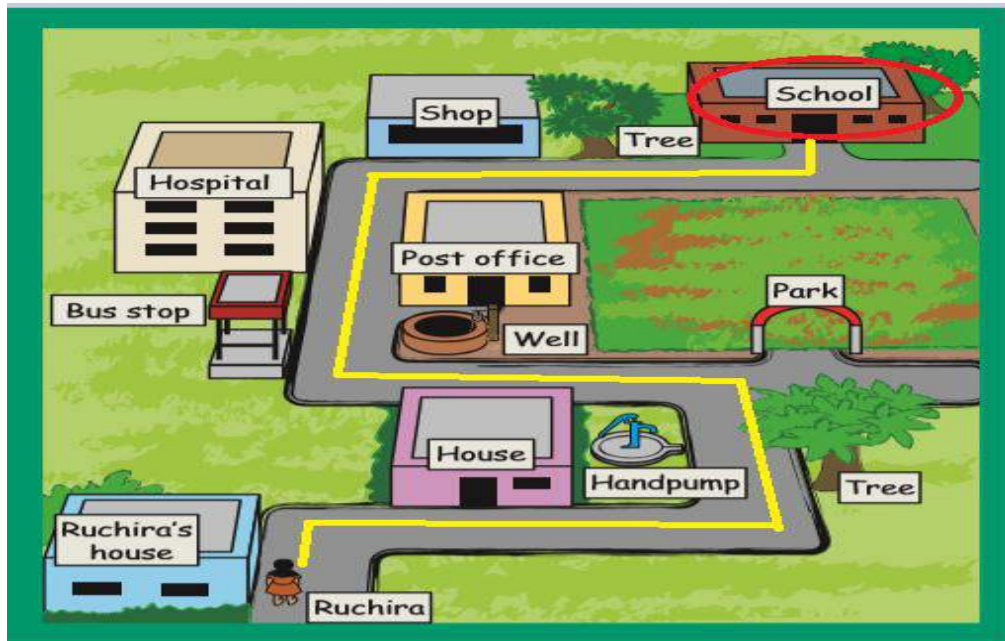


Question 9:

Guide Ruchira from home to school.

Find the school in the picture. Also find the way from Ruchira's home to her school. Now, with a coloured pencil trace the way from Ruchira's home to her school.

Answer:



Question 10:

Which places and things will Ruchira find on her way from home to school? Write their names.

Answer:

Ruchira's house → House → Handpump → Tree → Well → Bus stop → Post Office → Hospital → Shop → Park → Tree → School

Question 11:

Which of these places and things will she find on her right and which places on her left?

Answer:

On her right	On her left
Tree Park Well Post Office	House Handpump Bus Stop Hospital Shop Tree

Question 12:


How many times will Ruchira have to take a turn on her way from home to school?

Answer:

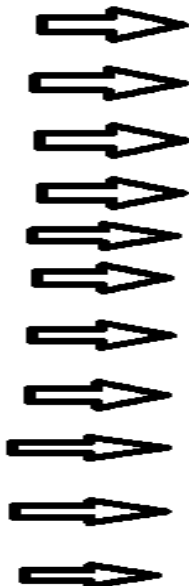
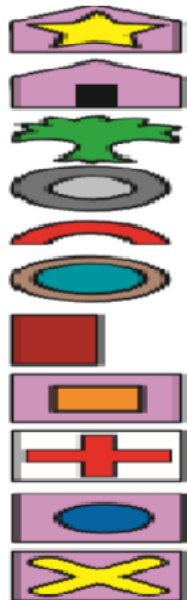
5 (five) times.

Question 13:

Given below is a smaller version of the earlier picture. In this there are symbols in place of pictures. Such a picture is called a map. Identify the symbols and write them.



Answer:



Ruchira's house

House

Tree

Handpump

Gate

Well

Bus stop

Post Office

Hospital

Shop

School

Question 14:

Can you tell why these symbols are used?

Answer:

Symbols are simpler to draw and often used in a map. These indicate the place of real objects in a given map.

Question 15:

A list of symbols used in the map is given. Look carefully and write.

- a) How many houses are there in the map?

Answer: 4 houses

- b) How many shops are there in the map?

Answer: 1 shop

- c) How many trees are there in the map?

Answer: 5 trees

- d) How many pumps are there in the map?

Answer: 1 handpump

- e) Is the school closer to the post office or to the hospital?

Answer: The school is closer to the post office than to the hospital.

- f) What is near the bus stop?

Answer: The handpump is near the bus stop.

- g) Without the list of symbols could you have read the map?

Answer: No, it is not possible to read the map without the list of symbols.

Question 16:

Write same symbols here that you have learnt in mathematics.

Answer:

The symbols that we learn in Mathematics are listed below:

- Addition (+)
- Subtraction (-)
- Multiplication (x)
- Division (\div)