

This Question Paper contains 4 Printed Pages. **22E(A)**

## **SOCIAL STUDIES, Paper - II**

*(English version)*

**Parts A and B**

**Time : 2 hrs. 45 min.]**

**[Maximum Marks : 40**

### **Instructions :**

- (1) 15 minutes is allocated to read the question paper and 2.30 hours is allocated to write answers.
- (2) Answer the questions under **Part 'A'** on a separate sheet.
- (3) Write the answers to the questions under **Part 'B'** on the question paper itself and attach it to the answer book of **Part 'A'**.
- (4) Attach the given outline map of **World** with the answer book of **Part 'A'**.

### **Part - A**

**Time : 2.00 hrs.**

**Marks : 30**

### **SECTION - I**

**4×1=4**

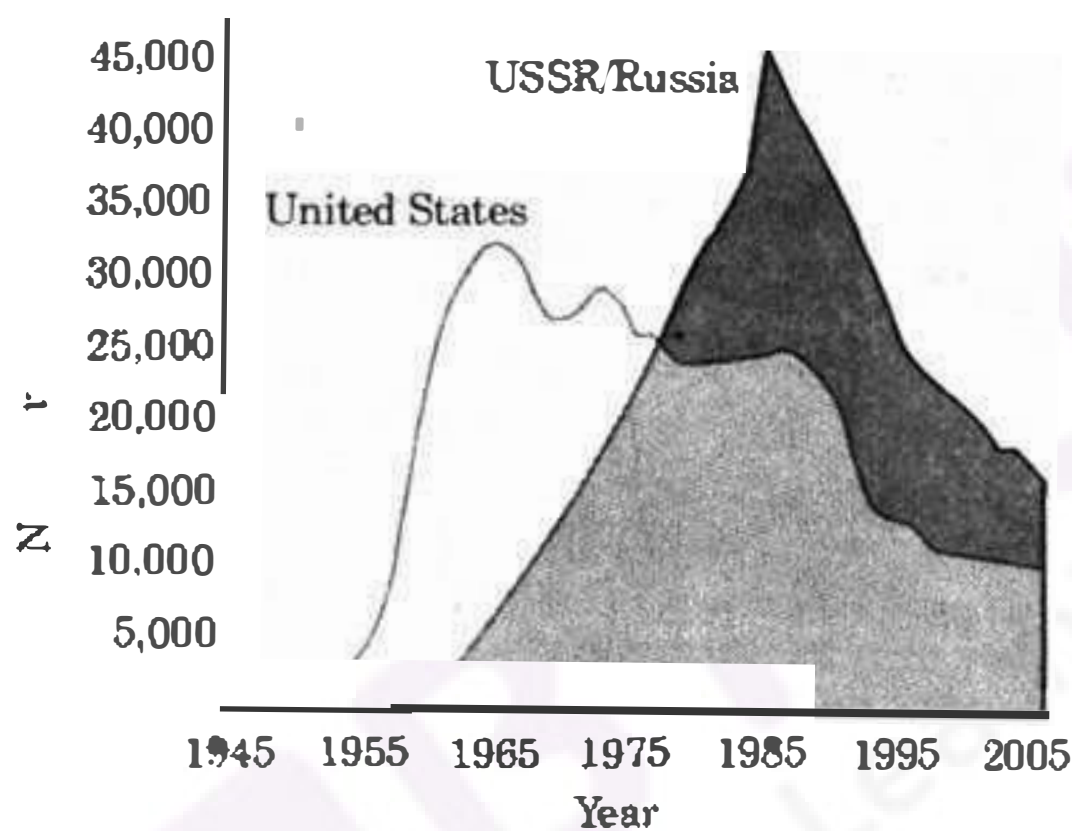
**NOTE :** (i) Answer **all** the following questions.

(ii) Each question carries **ONE** mark.

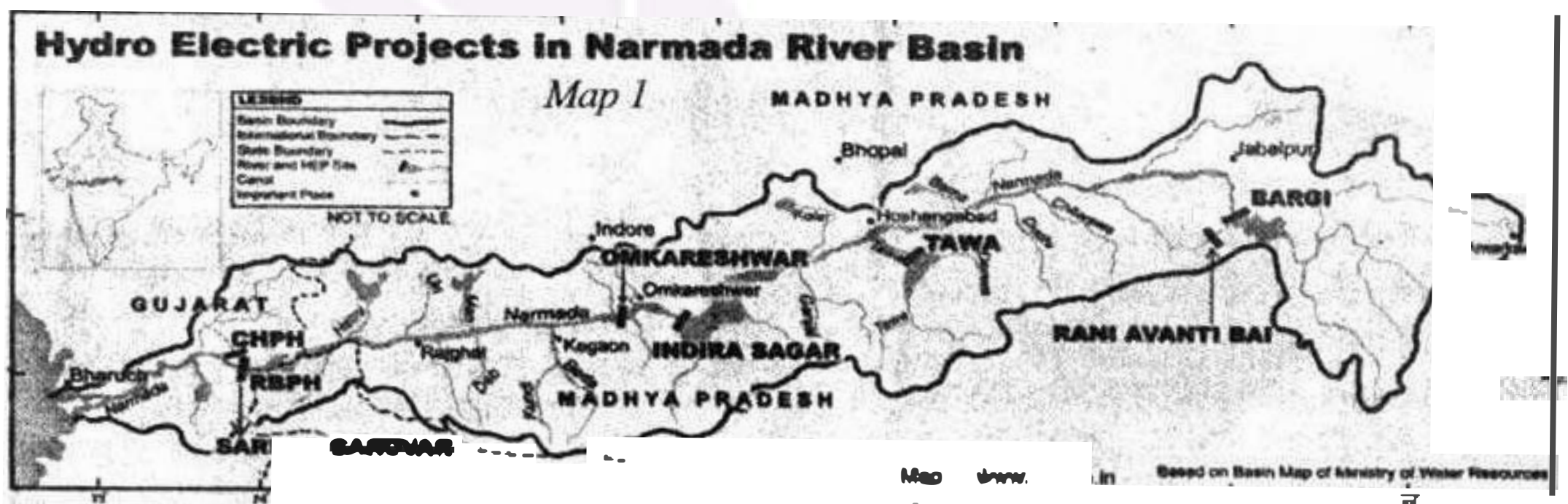
1. What were the main challenges before the leaders of the country in early years after Independence ?
2. Write any two objectives of U.N.O.
3. Write down the ill effects of reckless oil extraction in Nigeria.
4. Write two slogans on the necessity of peace.

**SECTION - II****5×2=10****NOTE :** (i) Answer **all** the following questions.(ii) Each question carries **TWO** marks.

5. "Constitution is a living and changing document." Would you agree with it ? Justify it.
6. How did the education system in Vietnam contribute to the emergence of nationalist ideas ?
7. Analyse the below graph and write your observations.

*Graph: US and USSR nuclear stockpiles*

8. Read the map given below and answer the following questions.



- (i) In which state, was Sardar Sarovar Project constructed ?
- (ii) Name the movement that was held against the construction of dams on river Narmada.

9. "Coalition Governments cause political instability." Comment.

### **SECTION - III**

4×4=16

- NOTE :** (i) Answer **all** the following questions.  
(ii) Each question carries **FOUR** marks.

10. (A) "Right to Information Act resembles the true spirit of Democracy". Explain.

**OR**

- (B) What steps both India and China should take to build lasting peace between the two countries ?

11. (A) Explain the rise of Nazism in Germany.

**OR**

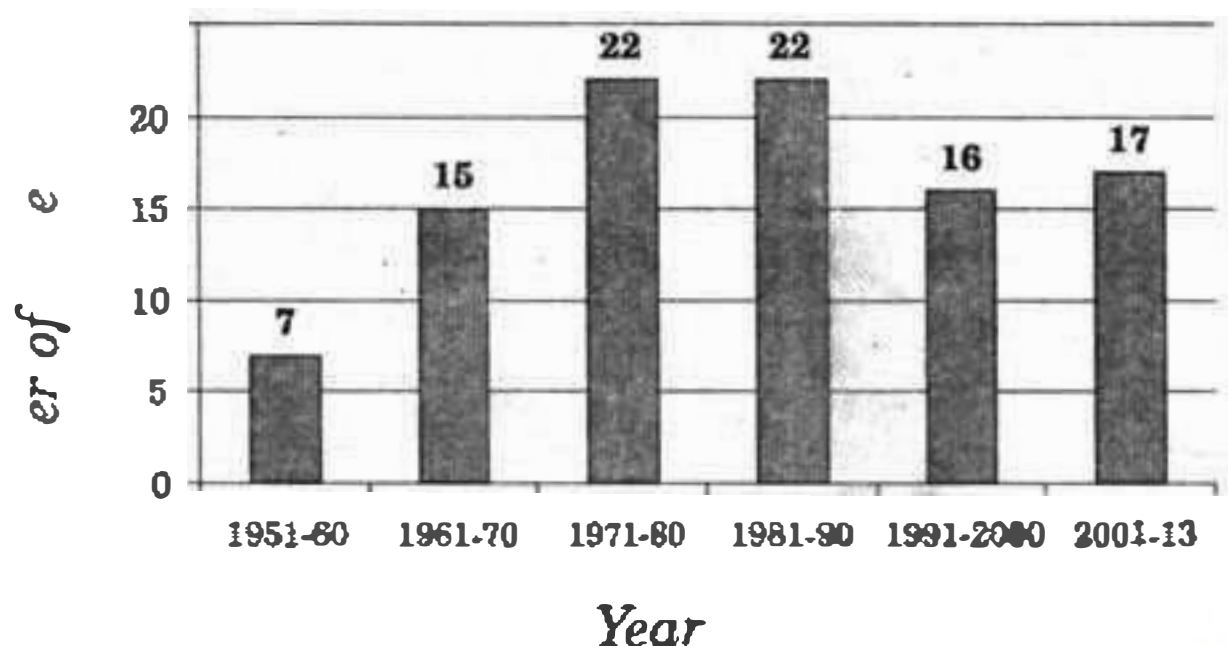
- (B) Estimate the pros and cons of building Multipurpose projects.

12. (A) Answer the questions with the help of Time-line chart.

(a)	What was the immediate cause for the Second World war ?	Proclamation of the Weimar Republic	• Nov. 9, 1918
		Hitler becomes chancellor of Germany.	• January 30, 1933
(b)	When did the United States enter into the World war II ?	Germany invades Poland. Beginning of the Second World War.	• Sep 1, 1939
(c)	The Weimar Republic belongs to which country ?	Germany invades the USSR.	• June 22, 1941
		Mass murder of the Jews begins.	• June 23, 1941
(d)	Write any two important incidents occurred in 1941.	The United States joins Second World War.	• Dec 8, 1941
		Soviet troops liberate Auschwitz	• Jan 27, 1945
		Allied victory in Europe.	• May 8, 1945

**OR**



**OR****(B)** Answer the following questions based on the below graph.*Constitutional amendments*

- (a) When did the Constitution come into force ?
- (b) In which decade, the least number of amendments had done ?
- (c) Why does the Constitution need to be amended ?
- (d) How many Constitutional amendments had been done from 1951 to 1980 ?

**13.** Point out the following in a given map of **World**.

- (A)** (a) The city in which the headquarters of International Court of Justice is situated.
- (b) The capital city of England.
- (c) The country that was called as Dutch East Indies.
- (d) The country of Danzing port.

**OR**

- (B)** (1) Beijing
  - (2) North Korea
  - (3) Italy
  - (4) Alaska
-