

SOCIAL STUDIES, Paper - I

(English version)

Parts A and B

Time : 2 hrs. 45 min.]

[Maximum Marks : 40

Instructions :

1. *In the time duration of 2 hours and 45 minutes of time, 15 minutes of time is allotted to read and understand the Question paper.*
2. *Answer the questions under **Part-A** on separate answer book.*
3. *Write the answers to the questions under **Part-B** on the Question paper itself and attach it to the answer book of **Part-A**.*
4. *Answer **all** the questions from the given **three** sections I, II and III of **Part-A**.*
5. *In Section-III, every question has internal choice. Answer **any one** alternative.*
6. *Attach the given outline map of **India** with the answer book of **Part-A**.*

Part - A

Time : 2 hours

Marks : 35

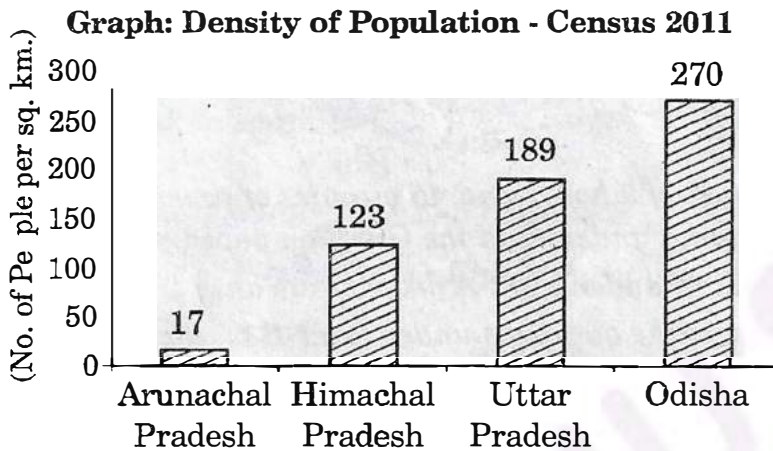
SECTION - I

7×1=7

- NOTE :** (i) Answer **all** the questions.
(ii) Each question carries **ONE** mark.
(iii) Answer each question in one or two sentences.

1. How are the Narcondam and Barren islands formed ?
2. Name any two factors that influence climate and weather.
3. What is Sustainable development ?

4. Why are the Peninsular rivers non-perennial ?
 5. What is the difference between Physical Capital and Working Capital ?
- * Observe the given graph and answer Q. No. 6 and 7.



6. Which state has the highest density of population ?
7. Why does Arunachal Pradesh has the least density of population ?

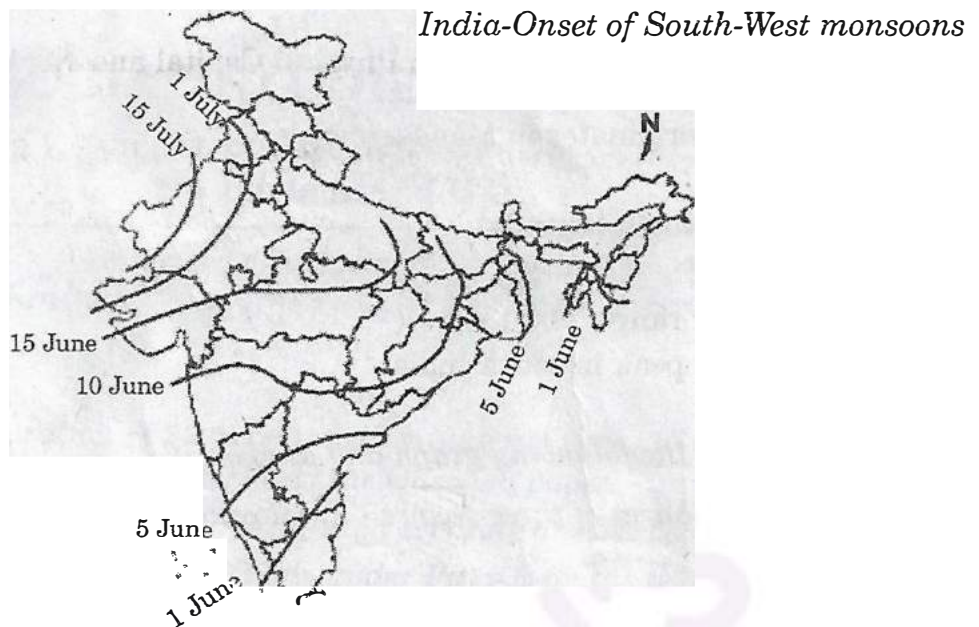
SECTION - II

6×2=12

- NOTE :** (i) Answer **all** the questions.
(ii) Each question carries **TWO** marks.
(iii) Write the answers in 4-5 sentences.

8. What are the reasons for the decline in the death rate after 1900 ?
9. Why are the Himalayas important to India ?
10. Write a brief note on Seasonal migration.
11. Prepare a pamphlet on the importance of Organic farming.
12. Write a letter to the concerned authority on the necessity to increase employment opportunities in rural areas.

13. Observe the map given and answer the questions (a) and (b).



- (a) When do south-west monsoons enter Rajasthan ?
 (b) What is meant by onset of monsoons ?

SECTION - III

4×4=16

- NOTE :** (i) Answer **all** the questions.
 (ii) Each question carries **Four** marks.
 (iii) There is an internal choice for each question, only one option from each question is to be attempted.
 (iv) Write the answers in 8-10 sentences.

14. Explain the problems faced by the labourers in unorganised sector now a days.

OR

How is the National Food Security Act being implemented at present ?

15. Read the following paragraph and interpret.

The socio-economic aspects are very important for water use management. Conflicts within communities in a region and across sectors such use for agriculture, industry or drinking water are common.

OR

Economic proponents of Globalisation argue that it is the economic forces that are responsible for Globalisation and control its contours and borders. Those holding the political line argue that it is the government decisions that allow movement in the first place.

16. Locate the following in the given map of **India**.

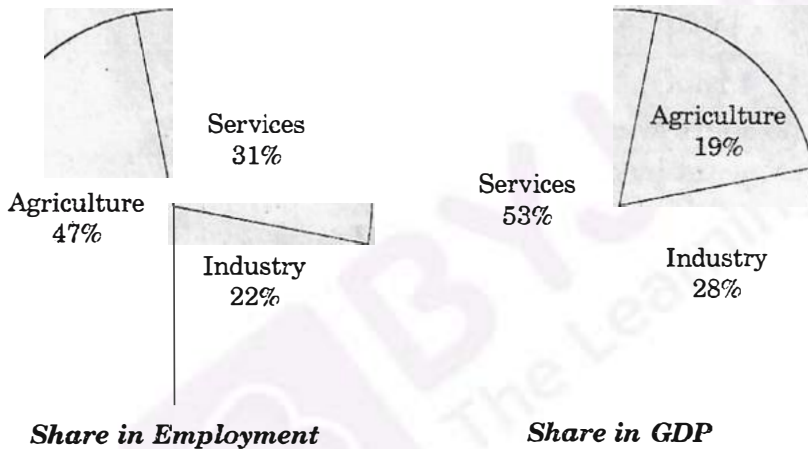
- (i) Kerala
- (ii) Udagamandalam
- (iii) Circar coast
- (iv) A river originates in Manasarovar.

OR

- (a) $37^{\circ} 6'$ North latitude.
- (b) Nainital
- (c) Satpura range
- (d) Highest peak in south India.

17. (a) Observe the following graph and analyse it.

Graph :- Shares of three sectors - Employment and GDP - 2015-16



OR

(b) Observe the following graph and analyse it.

Graph: Types of Farmers - Census 2011 (%)

