

WBBSE Class 10th Maths Question Paper With Solutions 2020

Question 1: Choose the correct option in each case from the following questions : **[1 x 6 = 6]**

[i] If a principal becomes twice of it in 10 years, then the rate of simple interest per annum is:

- (a) 5% (b) 10% (c) 15% (d) 20%

Answer: (b)

Principal - x

Time - 10 year

Simple interest - 2x

According to the formula,

$$R = SI * 100 / 10 * 2x$$

$$R = 2x * 100 / 10 * x$$

$$R = 10\%$$

[ii] The product of two roots of the equation $x^2 - 7x + 3 = 0$ is:

- (a) 7 (b) -7 (c) 3 (d) -3

Answer: (c)

$$x^2 - 7x + 3 = 0$$

Roots are $7 + \sqrt{(37)} / 2$ and $7 - \sqrt{(37)} / 2$

$$\text{Product} = 7^2 - (\sqrt{37})^2 / 4 \quad (a + b \times a - b = a^2 - b^2)$$

$$= 49 - 37 / 4$$

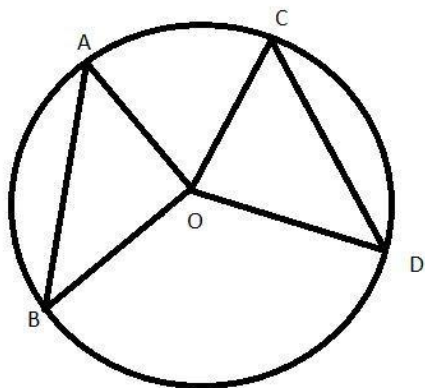
$$= 12 / 4$$

$$= 3$$

[iii] The length of two chords AB and CD of a circle of centre O are equal and $\angle AOB = 60^\circ$, then $\angle COD$ is:

- (a) 30° (b) 60° (c) 120° (d) 180°

Answer: (b)



Given: $AB = CD$ and $\angle AOB = 60^\circ$

To find: $\angle COD$

Consider $\triangle AOB$ and $\triangle COD$

$AO = OC$ (Radius of the circle)

$BO = OD$ (Radius of the circle)

$AB = CD$ (Given)

$\triangle AOB \cong \triangle COD$ (Side-Side-Side criteria)

$\angle COD = \angle AOB = 60^\circ$ (Corresponding Parts of Congruent Triangles)

[iv] If the ratio of the volume of two right circular cones is 1:4 and the ratio of radii of their bases is 4:5, then the ratio of their heights is:

- (a) 1 : 5 (b) 5 : 4 (c) 25 : 16 (d) 25 : 64

Answer: (d)

$$v : V = 1 : 4$$

$$d : D = 4 : 5$$

$$a : A = (4^2) : (5^2) = 16 : 25.$$

$$h : H = ?$$

$$v = (1/3) * a * h \text{ and } V = (1/3) * A * H$$

$$(1/4) = (16/25) * (h/H)$$

$$(h/H) = (1/4) * (25/16) = (25/64)$$

$$h : H = 25 : 64$$

[v] If $\sin \theta - \cos \theta = 0$, ($0^\circ < \theta < 90^\circ$) and $\sec \theta + \operatorname{cosec} \theta = x$, then the value of x is:

(a) 1

(b) 2

(c) $\sqrt{2}$

(d) $2\sqrt{2}$

Answer: (d)

Let us assume θ to be " p ".

$$\sin p - \cos p = 0$$

$$\Rightarrow (\sin p - \cos p)^2 = 0^2$$

$$\Rightarrow \sin^2 p + \cos^2 p = 2 \sin p \cos p$$

$$\Rightarrow 1/2 = \sin p \cos p$$

$$\text{Also, } (\sin p + \cos p)^2$$

$$= \sin^2 p + \cos^2 p + 2 \sin p \cos p$$

$$= 1 + 2(1/2)$$

$$= 1 + 1$$

$$= 2$$

$$\text{Therefore, } (\sin p + \cos p) = \sqrt{2}$$

$$\text{Now, } \sec p + \operatorname{cosec} p = x$$

$$\Rightarrow 1/\cos p + 1/\sin p = x$$

$$\Rightarrow (\sin p + \cos p) / \sin p \cos p = x$$

$$\Rightarrow 2\sqrt{2} = x$$

[vi] The mode of 1, 3, 2, 8, 10, 8, 3, 2, 8, 8 is:

(a) 2

(b) 3

(c) 8

(d) 10

Answer: (c)

Question 2: Fill up the blanks (any five)

[1 x 5 = 5]

[i] Anisur invests Rs 500 for 9 months in a business and Devid invests Rs 600 for 5 months in the same business, the ratio of their profits will be _____.

[Answer: 3:2]

The amount each will have earned at the end of the investment periods is given by:

Anisur: $500 \times 9 = 4500$

Devid: $600 \times 5 = 3000$

The ratio of their profits is therefore given by:

Anisur:Devid

$4500 / 3000 = 3 / 2$

The ratio of their profits is 3:2.

So, if they were to share the profits, they would do so in the ratio 3:2.

[ii] The roots of the quadratic equation $ax^2 + 2bx + c = 0$ ($a \neq 0$) are real and unequal, then $b^2 =$ _____. **[Answer: 0]**

[iii] If the sum of two angles is _____, then they are called supplementary angles. **[Answer: 180°]**

[iv] Maximum value of $\sin 3\theta$ is _____. **[Answer: 1]**

[v] One solid sphere is melted and a solid right circular cylinder is made, then _____ of the sphere and the cylinder will be equal. **[Answer: volume]**

[vi] Ages of some students are (in years) 10, 11, 9, 7, 13, 8, 14; the median of the ages of those students is _____ years. **[10]**

Question 3: Write True or False (any five)

[1 x 5 = 5]

[i] The amount of Rs $2p$ in t years at the rate of simple interest of $(r / 2) \%$ per annum is Rs. $[2p + (prt / 100)]$. **[Answer: True]**

[ii] If $2a = 3b = 4c$ then $a : b : c = 2 : 3 : 4$. **[Answer: False]**

[iii] If the ratio of the lengths of three sides of a triangle is 5:12:13, then the triangle will always be a right-angled triangle. **[Answer: True]**

[iv] The angle formed by rotating a ray about its endpoint in anticlockwise direction is positive. **[Answer: True]**

[v] If n is an even number, then median is the mean of $(n / 2)^{\text{th}}$ and $\{(n / 2) - 1\}^{\text{th}}$ observation. **[Answer: False]**

[vi] If the length of the radius of the base of a right circular cone be halved and its height is doubled, then the volume remains the same. **[Answer: False]**

Question 4: Answer any ten questions

[2 x 10 = 20]

(i) If the ratio of a principal and the amounts for 5 years is 5:6, then find the rate of simple interest per annum.

Solution:

Let the principal be $5P$ and the amount is $6P$.

$$SI = 6P - 5P = P$$

$$r = 100 * I / P * t$$

$$= 100 * P / 5P * 5$$

$$= 4\%$$

(ii) In a business, A and B get Rs 1,050 as profit. If the principal and profit of A be Rs 900 and Rs 630, respectively. Find the principal of B.

Solution:

$$\text{Profit of A} + \text{Profit of B} = 1050$$

$$\text{Profit of A} = 630$$

$$\text{Profit of B} = 1050 - 630 = 420$$

Let the principal of B be x .

$$\text{Principal of A} / \text{Principal of B} = \text{Profit of A} / \text{Profit of B}$$

$$900 / x = 630 / 420$$

$$900 / x = 1.5$$

$$900 / 1.5 = x$$

$$x = \text{Rs. } 600$$

(iii) If $x \propto y$, $y \propto z$ and $z \propto x$, find the product of three variation constants.

Solution:

$$x \propto y, y \propto z \text{ and } z \propto x$$

It can be written as,

$x = ky$, $y = mz$ and $z = nx$ where k , m and n are constants of variations.

Put the value of y in x ,

$$x = kmz$$

Now put the value of z in x ,

$$\Rightarrow x = kmnx$$

$$\Rightarrow kmn = 1$$

(iv) If the roots of the quadratic equation $5x^2 - 2x + 3 = 0$ be α and β , find the value of $[1 / \alpha] + [1 / \beta]$.

Solution:

$$5x^2 - 2x + 3 = 0$$

$$a = 5, b = -2, c = 3$$

$$\alpha + \beta = -b / a$$

$$= 2 / 5$$

$$\alpha * \beta = c / a$$

$$= 3 / 5$$

$$[1 / \alpha] + [1 / \beta]$$

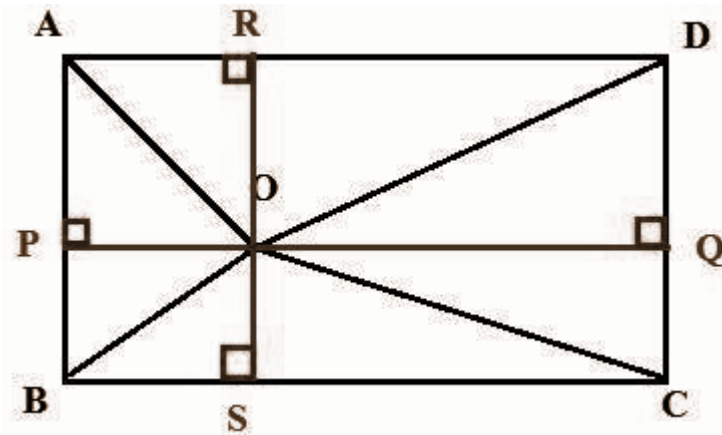
$$= \alpha + \beta / \alpha * \beta$$

$$= (2 / 5) / (3 / 5)$$

$$= 2 / 3$$

(v) The point O is situated within the rectangular region ABCD in such a way that OB = 6 cm, OD = 8 cm and OA = 5 cm. Determine the length of OC.

Solution:



O is any point inside a rectangle ABCD such that $OB = 6$ cm, $OA = 5$ cm and $OD = 8$ cm.

In $\triangle APO$, Using Pythagoras theorem,

$$OA^2 = AP^2 + OP^2$$

In $\triangle CSO$, Using Pythagoras theorem

$$OC^2 = CS^2 + OS^2$$

Add both equations

$$OA^2 + OC^2 = AP^2 + OP^2 + CS^2 + OS^2$$

$$OA^2 + OC^2 = OD^2 + OB^2$$

Substitute $OB = 6$ cm, $OA = 5$ cm and $OD = 8$ cm,

$$5^2 + OC^2 = 6^2 + 8^2$$

$$25 + OC^2 = 36 + 64$$

$$OC^2 = 100 - 25$$

$$OC^2 = 75$$

$$OC = 5\sqrt{3} \text{ cm}$$

(vi) In a right-angled triangle ABC, $\angle ABC = 90^\circ$, $AB = 3$ cm, $BC = 4$ cm and the perpendicular BD on the side AC from the point B which meets the side AC at the point D. Determine the length of BD.

Solution:

$$AB = 3\text{cm}$$

$$BC = 4\text{cm}$$

$$AC = \sqrt{4^2 + 3^2}$$

$$= \sqrt{16 + 9}$$

$$= \sqrt{25}$$

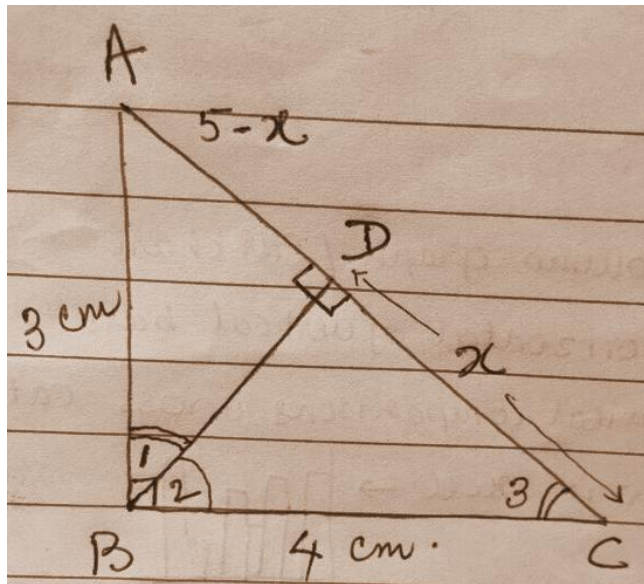
$$AC = 5\text{cm}$$

$$[1/2] * BC * AB = [1/2] * AC * BD$$

$$[1/2] * 4 * 3 = [1/2] * 5 * BD$$

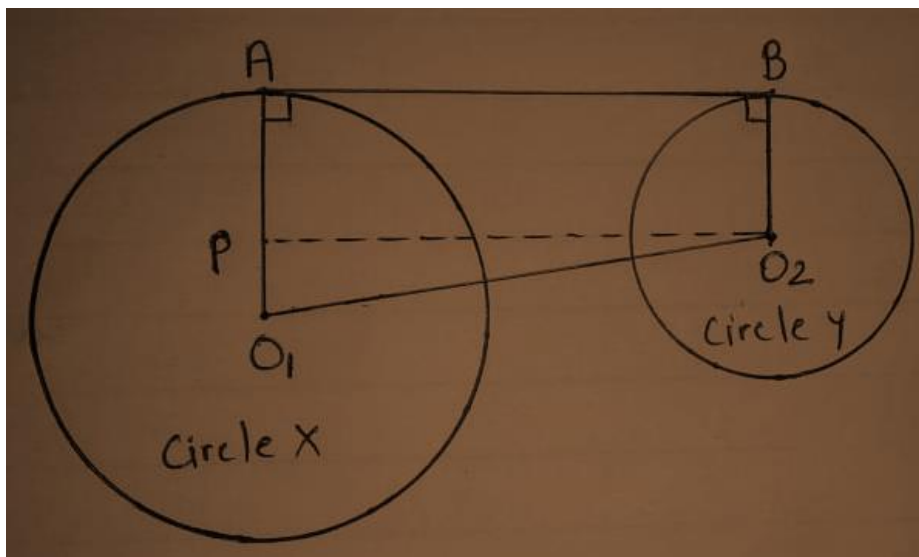
$$12 = [5] BD$$

$$12/5 = BD$$



(vii) The lengths of radii of two circles are 8 cm and 3 cm and the distance between two centres is 13 cm. What is the length of the direct common tangent of two circles?

Solution:



Let O_1 and O_2 be the centres of circles X and circle Y, respectively.

⇒ The radius of circle X is $O_1A = 8\text{cm}$.

⇒ The radius of circle Y is $O_2B = 3\text{cm}$.

⇒ Distance between the centres of the two circles $O_1O_2 = 13\text{cm}$.

⇒ To find the length of a common tangent AB, construct a line segment PO_2 , which is parallel to AB.

⇒ $PO_1 = O_1A - O_2B$

$$= 8 - 3$$

$$= 5\text{cm}$$

⇒ $\triangle PO_1O_2$ is a right-angled triangle.

∴ $PO_2 = (O_1O_2)^2 - (O_1P)^2$ [By using Pythagoras theorem]

$$\therefore PO_2 = \sqrt{13^2 - 5^2}$$

$$= \sqrt{169 - 25}$$

$$= \sqrt{144}$$

$$\therefore PO_2 = 12\text{cm}$$

⇒ Hence, the length of common tangent $AB = PO_2 = 12\text{cm}$.

(viii) What is the circular measure of an angle formed by the rotation of the hour hand of a clock in one-hour duration?

Solution:

The hour hand of a clock rotates in one day is about 360° .

Number of hours in a day (or night) = 12

Number of hours in a day / degree covered in a day (or night) is,

$$= 360^\circ / 12$$

$$= 30^\circ$$

(ix) If $\tan 4\theta \tan 6\theta = 1$ and 6θ is a positive acute angle, find the value of θ .

Solution:

$$\tan 4\theta \tan 6\theta = 1$$

$$\tan 4\theta = 1 / \tan 6\theta = \cot 6\theta$$

$$\tan 4\theta = \tan (\pi / 2 - 6\theta)$$

$$4\theta = (\pi / 2 - 6\theta)$$

$$4\theta + 6\theta = (\pi / 2)$$

$$10\theta = 90$$

$$\theta = 90 / 10$$

$$\theta = 9^\circ$$

(x) The height of a right circular cone is 12 cm and its volume is $100\pi\text{cm}^3$. Find the lateral height of the cone.

Solution:

$$\text{Since volume of cone} = [1 / 3] \Pi r^2 h$$

$$h = 12\text{cm}$$

$$\text{Volume} = 100\Pi\text{cm}^3$$

$$[1 / 3] \times \Pi \times r^2 \times 12 = 100\Pi$$

$$4\Pi r^2 = 100\Pi$$

$$r^2 = 100 / 4$$

$$r^2 = 25$$

$$r = 5\text{cm}$$

Slant height,

$$l^2 = 5^2 + 12^2$$

$$l^2 = 169$$

$$l = 13\text{cm}$$

(xi) Curved surface areas of two spheres are in a ratio 1:4. Find the ratio of their volumes.

Solution:

Let the radius of the two spheres are 'r' and 'R'.

The ratio of the surface area of two spheres = 1: 4

$$\Rightarrow 4\pi r^2 : 4\pi R^2 = 1 : 4$$

$$\Rightarrow r : R = 1 : 2$$

The ratio of volumes of two spheres is

$$= (4 / 3) \pi r^3 : (4 / 3) \pi R^3$$

$$= r^3 : R^3$$

$$= 1^3 : 2^3$$

$$= 1 : 8$$

(xii) If $u_i = x_i - 35 / 10$, $\sum f_i u_i = 30$ and $\sum f_i = 60$, then determine the value of mean.

Solution:

$$u_i = x_i - 35 / 10 \text{ ---- (1)}$$

$$\sum f_i u_i = 30 \text{ and } \sum f_i = 60$$

$$u_i = x_i - a / h \text{ ---- (2)}$$

From (1) and (2),

$$a = 35, h = 10$$

$$\text{Mean} = a + [\sum f_i u_i / \sum f_i] * h$$

$$= 35 + [30 / 60] * 10$$

$$= 35 + [0.5] * 10$$

$$= 35 + 5$$

$$= 40$$

Question 5: Answer any one question

[5 x 1 = 5]

(i) The price of a machine in a factory of your uncle depreciates at the rate of 10% every year. If its present price is Rs 6,000 then what will be its price after 3 years?

Solution:

$$\begin{aligned}\text{The price after 3 years} &= P(1 - (r / 100))^n \\ &= 6000 * [1 - (10 / 100)]^3 \\ &= 6000 * [90 / 100]^3 \\ &= 6000 * 0.729 \\ &= \text{Rs. } 4374\end{aligned}$$

(ii) Three friends invested Rs 1,20,000 Rs 1,50,000 and Rs, 1,10,000, respectively to purchase a bus. The first person is a driver and the other two are conductors. They decided to divide $2 / 5^{\text{th}}$ of the profit among themselves in the ratio of 3:2:2 according to their work and remaining in the ratio of their capitals. If they earn Rs 29,260 in one month, find the share of each of them.

Solution:

$$\begin{aligned}\text{The ratio of investments of three friends} &= 120000:150000:110000 \\ &= 12:15:11\end{aligned}$$

$$\text{Profit earned in one month} = ₹ 29260$$

$$[2 / 5]^{\text{th}} \text{ of profit } ₹ 29260$$

$$= (2 / 5) * 29260$$

$$= ₹ 11704$$

From the profit of ₹11704,

$$1^{\text{st}} \text{ friend gets } (11704 \times 3) / 7 = ₹ 5016$$

$$2^{\text{nd}} \text{ friend gets } (11704 \times 2) / 7 = ₹ 3344$$

$$3^{\text{rd}} \text{ friend gets } (11704 \times 2) / 7 = ₹ 3344$$

The remaining money from the actual profit made

$$= ₹ (29260 - 11704)$$

$$= ₹ 17556$$

Now, from ₹ 17556,

$$1^{\text{st}} \text{ friend gets } (17556 \times 12) / 38 = ₹ 5544$$

$$2^{\text{nd}} \text{ friend gets } (17556 \times 15) / 38 = ₹ 6930$$

$$3^{\text{rd}} \text{ friend gets } (17556 \times 11) / 38 = ₹ 5082$$

Now, the first, second and third friends obtain a total amount of ₹10560, ₹10274, ₹8426.

Question 6: Answer any one question

[3 x 1 = 3]

(i) Solve $(1 / [x - 3]) + (1 / [x + 5]) = 1 / 6$.

(ii) The product of two consecutive positive odd numbers is 143. Construct the equation and determine the numbers by applying Sridhara Acharyaa's formula.

Solution:

(i) $(1 / [x - 3]) + (1 / [x + 5]) = 1 / 6$

By taking LCM,

$$(x + 5) - (x - 3) / (x - 3)(x + 5) = 1 / 6$$

$$(x + 5) - (x + 3) / x^2 + 5x - 3x - 15 = 1 / 6$$

$$8 / x^2 + 2x - 15 = 1 / 6$$

$$x^2 + 2x - 15 = 48$$

$$\Rightarrow x^2 + 2x - 15 - 48 = 0$$

$$\Rightarrow x^2 + 2x - 63 = 0$$

$$\Rightarrow x^2 + 9x - 7x - 63 = 0$$

$$\Rightarrow x(x + 9) - 7(x + 9) = 0$$

$$\Rightarrow (x + 9)(x - 7) = 0$$

$$\Rightarrow x + 9 = 0$$

$$\Rightarrow x = -9$$

$$x - 7 = 0$$

$$\Rightarrow x = 7$$

So, $x = 7$ or -9 .

(ii) Let the two numbers be x and $x + 2$.

$$x(x + 2) = 143$$

$$x^2 + 2x - 143 = 0$$

$$x^2 + 13x - 11x - 143 = 0$$

$$x(x + 13) - 11(x + 13) = 0$$

$$(x - 11)(x + 13) = 0$$

$$x = 11, -13$$

The numbers are 11 and 13.

Question 7: Answer any one question

[3 x 1 = 3]

[i] $x = 2 + \sqrt{3}$ and $x + y = 4$, then find the simplest value of $xy + (1 / xy)$.

[ii] If $a \propto b$ and $b \propto c$, then prove that $a^3 + b^3 + c^3 \propto 3abc$.

Solution:

[i] $x = 2 + \sqrt{3}$ ----- (1)

$$x + y = 4$$

$$y = 4 - x$$

$$= 4 - (2 + \sqrt{3})$$

$$= 4 - 2 - \sqrt{3}$$

$$y = 2 - \sqrt{3}$$

$$xy + (1 / xy)$$

$$= (2 + \sqrt{3}) * (2 - \sqrt{3}) + 1 / [(2 + \sqrt{3}) * (2 - \sqrt{3})]$$

$$= 2^2 - (\sqrt{3})^2 + 1 / [2^2 - (\sqrt{3})^2]$$

$$= [4 - 3] + 1 / [4 - 3]$$

$$= 1 + 1$$

$$= 2$$

[ii] $a \propto b$

$$a = k_1 b$$

$$a = k_1 k_2 c$$

$b \propto c$

$$b = k_2 c$$

$$a^3 + b^3 + c^3 / 3abc$$

$$= [(k_1 k_2 c)^3 + (k_2 c)^3 + c^3] / [3 * k_1 k_2 c * k_2 c * c]$$

$$= c^3 [k_1^3 k_2^3 + k_2^3 + 1] / c^3 [3 * k_1 k_2 * k_2]$$

$$= [k_1^3 k_2^3 + k_2^3 + 1] / 3 [k_1 k_2^2]$$

So, $a^3 + b^3 + c^3 \propto 3abc$.

Question 8: Answer any one question

[3 x 1 = 3]

[i] If $x : a = y : b = z : c$, then show that $x^3 / a^3 + y^3 / b^3 + z^3 / c^3 = 3xyz / abc$.

[ii] If $[ay - bx] / c = [cx - az] / b = [bz - cy] / a$, then prove that $x / a = y / b = z / c$.

Solution:

[i] Let $x / a = y / b = z / c = k$

$$x = ak \dots (1)$$

$$y = bk \dots (2)$$

$$z = ck \dots (3)$$

$$\text{LHS} = x^3 / a^3 + y^3 / b^3 + z^3 / c^3$$

$$= (x / a)^3 + (y / b)^3 + (z / c)^3$$

From equations (1), (2) and (3),

$$= (ak / a)^3 + (bk / b)^3 + (ck / c)^3$$

$$= k^3 + k^3 + k^3$$

$$= 3k^3$$

$$\text{RHS} = 3xyz / abc$$

$$= 3 (x / a) \cdot (y / b) \cdot (z / c)$$

From equations (1), (2) and (3),

$$= (ak / a) \cdot (bk / b) \cdot (ck / c)$$

$$= 3k \cdot k \cdot k$$

$$= 3k^3$$

$$\text{LHS} = \text{RHS}$$

$$\text{So, } x^3 / a^3 + y^3 / b^3 + z^3 / c^3 = 3xyz / abc.$$

[ii] Let

$$(ay - bx) / c = (cx - az) / b = (bz - cy) / a = \lambda (ay - bx) / c =$$

$$(cx - az) / b = (bz - cy) / a = \lambda$$

$$ay - bx = \lambda c \text{ ——— 1}$$

$$cx - az = \lambda b \text{ ——— 2}$$

$$bz - cy = \lambda a \text{ ——— 3}$$

Multiply c, b, a to 1, 2, 3 respectively.

Equations becomes ,

$$acy - bcx = \lambda c^2$$

$$bcx - abz = \lambda b^2$$

$$abz - acy = \lambda a^2$$

Adding equations 1, 2, 3 gives,

$$\lambda * (a^2 + b^2 + c^2) = 0$$

But, $a^2 + b^2 + c^2$ is a positive quantity

Therefore, $\lambda = 0$.

Therefore, $cx - az = 0$

$$bz - cy = 0$$

$$\Rightarrow x/a = y/b = z/c$$

Question 9: Answer any one question

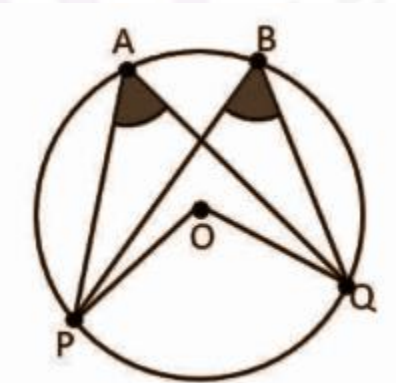
[5 x 1 = 5]

[i] Prove that angles in the same segment of a circle are equal.

[ii] Prove that if two tangents are drawn to a circle from a point outside it, then the line segments joining the external point and point of contacts are equal and they make equal angles at the centre.

Solution:

[i]



A circle with centre O is given. Points P and Q on this circle subtends the angles $\angle PAQ$ and $\angle PBQ$ at points A and B, respectively.

To prove $\angle PAQ = \angle PBQ$

Proof:

Chord PQ subtends $\angle POQ$ at the centre. From the theorem of “Angle subtended by an arc at the centre is double the angle subtended by it at any other point on the circle”.

$$\angle POQ = 2 \angle PAQ \text{ ----- (1)}$$

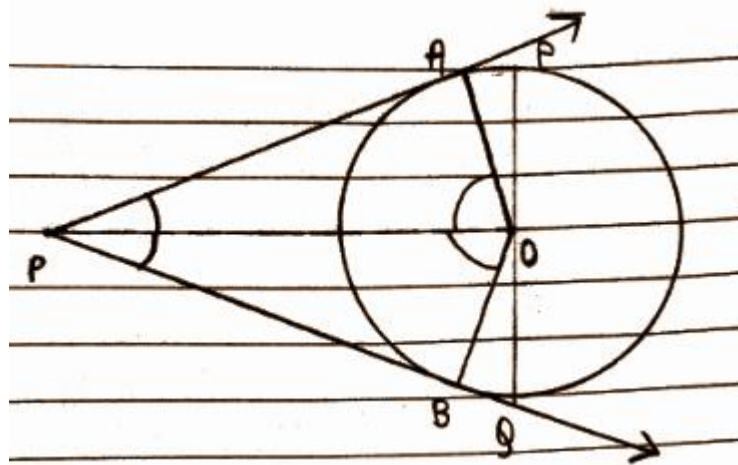
$$\angle POQ = 2 \angle PBQ \text{ ----- (2)}$$

From (1) and (2),

$$2 \angle PBQ = 2 \angle PAQ$$

$$\angle PBQ = \angle PAQ$$

[ii]



In $\triangle APO$ and $\triangle BPO$

$OA = OB$ (radii)

$AP = BP$ (theorem)

$OP = OP$ (common)

$\triangle APO \cong \triangle BPO$ (by SSS congruence)

$\angle AOP = \angle BOP$ (hence, they subtend equal angle at centre P)

$\angle APO = \angle BPO$ (hence, they are equally inclined)

Question 10: Answer any one question


[3 x 1 = 3]

[i] Two circles intersect each other at the points P and Q. If the diameters of the two circles are PA and PB respectively, then prove that A, Q, B are collinear.

[ii] ABC is a right-angled triangle whose $\angle A = 90^\circ$, AD is perpendicular to BC. Prove that area of triangle ABC / area of the triangle ACD = BC^2 / AC^2 .

Solution:

[i]



Let O and O' be the centres of two intersecting circles, where Points of intersection are P and Q and PA and PB are their diameter respectively.

Join PQ, AQ and QB.

$\therefore \angle AQP = 90^\circ$ and $\angle BQP = 90^\circ$ (Angle in a semicircle is a right angle)

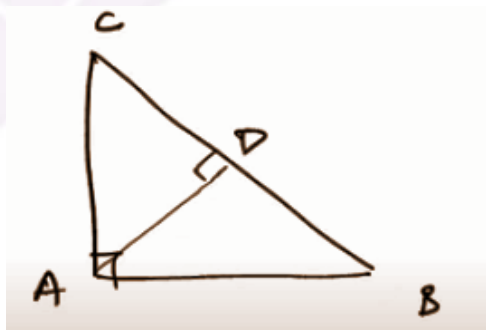
Adding both these angles,

$$\angle AQP + \angle BQP = 180^\circ$$

$$\angle AQB = 180^\circ$$

Hence, the points A, Q and B are collinear.

[ii]



In triangle ABC and ACD,

$$\angle CAB = 90^\circ = \angle ADC$$

$$\angle ACB = \angle ACD \text{ [common angle]}$$

$$\angle DAC = \angle ABC$$

Therefore, $\triangle ABC \cong \triangle ACD$ [By AAA criterion]

Area of $\triangle ABC$ / area of $\triangle ACD = BC^2 / AC^2$ [by the theorem, the area of congruent triangles = ratio of the square of their corresponding sides]

Question 11: Answer any one question

[5 x 1 = 5]

[i] Draw the mean proportional of line segments of lengths 4 cm and 3 cm.

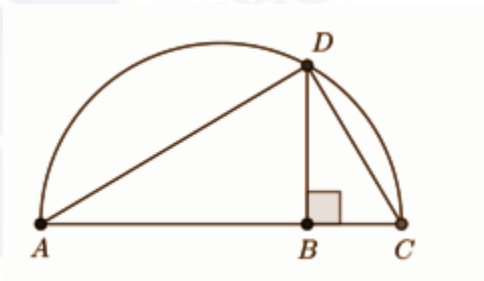
[ii] Draw a circle of radius 3 cm. Construct a tangent to the circle at a point A on the circle.

Solution:

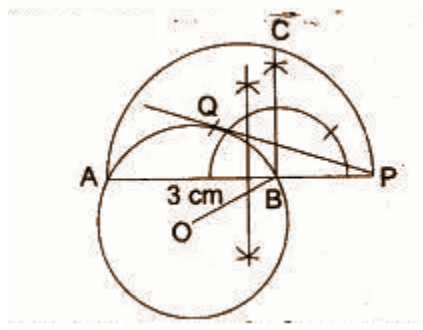
[i] Given any two straight lines of length 4cm and 3cm it is possible to find a straight line of length c such that $4:c = c:3$.

Construction

- Let $AB = 4\text{cm}$ and $BC = 3\text{cm}$ be the two given straight lines.
- Let AB and BC be placed in a straight line and let the semicircle ADC be placed on AC .
- Let BD be drawn perpendicular to AC .
- Then BD is the required mean proportional.



[ii]



1. Draw a circle with centre O and radius = 3cm.
 2. Take any point P outside the circle.
 3. Through the external point, P draws a straight line PBA meeting the circle at A and B.
 4. Draw a semi-circle on AP as diameter.
 5. Draw $BC \perp AP$, which intersects the semi-circle at C.
 6. With centre P and radius, PC draws an arc cutting the circle at Q.
 7. Join PQ.
- Then PQ is the required tangent.

Question 12: Answer any two questions

[3 x 2 = 6]

[i] If $\sin 17^\circ = x / y$, show that $\sec 17^\circ - \sin 73^\circ = x^2 / y\sqrt{y^2 - x^2}$.

[ii] If the sum of two angles is 135° and their difference is $\pi / 12$, then determine the sexagesimal and circular value of two angles.

[iii] Find the value of:

$$[5 \cos^2 (\pi / 3) + 4 \sec^2 (\pi / 6) - \tan^2 (\pi / 4)] / [\sin^2 (\pi / 6) + \cos^2 (\pi / 6)]$$

Solution:

$$[i] \sin 17^\circ = x / y$$

$$\sec 17 - \sin 73$$

$$1 / \cos 17 - \cos (90 - 17)$$

$$(1 - \cos^2 17) / \cos 17$$

$$\sin^2 17 / (\sqrt{\cos 17})^2$$

$$\sin^2 17 / \sqrt{1 - \sin^2 17}$$

$$x^2 / y^2 / \sqrt{1 - [x^2 / y^2]}$$

$$x^2 / y^2 / \sqrt{[y^2 - x^2] / y^2}$$

$$(x^2 / y^2) * (y / \sqrt{y^2 - x^2})$$

$$x^2 / y\sqrt{y^2 - x^2}$$

$$[ii] x + y = 135$$

$$x - y = \pi / 12$$

$$x - y = 180 / 12$$

$$x + y = 135 \text{ ---- (1)}$$

$$x - y = 15 \text{ ---- (1)}$$

$$2x = 150$$

$$x = 150 / 2$$

$$x = 75$$

Put the value of x in (1)

$$75 + y = 135$$

$$y = 135 - 75$$

$$y = 60$$

$$x = 75$$

$$= 75 * (\pi / 180)$$

$$= 5\pi / 12$$

$$y = 60$$

$$= 60 * (\pi / 180)$$

$$= \pi / 3$$

$$[iii] [5 \cos^2 (\pi / 3) + 4 \sec^2 (\pi / 6) - \tan^2 (\pi / 4)] / [\sin^2 (\pi / 6) + \cos^2 (\pi / 6)]$$

$$= [5 \cos^2 (60) + 4 \sec^2 (30) - \tan^2 (45)] / [\sin^2 (30) + \cos^2 (30)]$$

$$= [5 * (0.5^2) + 4 * (1.33) - 1] / [0.5^2 + 0.75]$$

$$= 5.57 / 1$$

$$= 5.57$$

$$= 67 / 12$$

Question 13: Answer any one question

[5 x 1 = 5]

[i] If the angle of elevation of a cloud from a point h metres above a lake is α and the angle of depression of its reflection in the lake is β . Prove that the distance of the cloud from the point of observation is $2h \sec \alpha / (\tan \beta - \tan \alpha)$.

[ii] The heights of two towers are 180 metres and 60 metres respectively. If the angle of elevation of the top of the first tower from the foot of the second tower is 60° , then find the angle of elevation of the top of the second tower from the foot of the first.

Solution:

[i] Let the height of cloud from point of observation = C

Height of cloud from lake = $C + h$

Depth of cloud reflection from point of observation = $C + h + h = C + 2h$

Horizontal distance of cloud from point of observation = B

$$\tan \alpha = C / B$$

$$\Rightarrow C = B \tan \alpha$$

$$\tan \beta = (C + 2h) / B$$

$$\Rightarrow C = B \tan \beta - 2h$$

$$B \tan \alpha = B \tan \beta - 2h$$

$$\Rightarrow 2h = B \tan \beta - B \tan \alpha$$

$$\Rightarrow 2h = B (\tan \beta - \tan \alpha)$$

$$\Rightarrow B = 2h / (\tan \beta - \tan \alpha)$$

$$\cos \alpha = B / \text{distance of the cloud from the point of observation}$$

$$\Rightarrow \text{distance of the cloud from the point of observation} = B / \cos \alpha$$

$$= B \sec \alpha$$

$$= 2h \sec \alpha / (\tan \beta - \tan \alpha)$$

$$\text{The distance of the cloud from the point of observation} = 2h \sec \alpha / (\tan \beta - \tan \alpha).$$

[ii] Height of first tower (AB) = 180 m

Height of the second tower (DC) = 60 m

The angle of elevation of the top of the first tower from the foot of the second tower [$\angle ACB = 60^\circ$]

The angle of elevation of the top of the second tower from the foot of the first.

Suppose, the angle of elevation of the top of the second tower from the foot of the first [$\angle CBD = \theta$]

$\triangle ABC$ is a right triangle

$$\tan 60^\circ = AB / BC$$

$$\rightarrow \sqrt{3} = 180 / BC$$

$$\rightarrow BC = 60\sqrt{3}$$

$\triangle BCD$ is a right triangle.

$$\tan \phi = DC / BC$$

$$\rightarrow \tan \phi = 60 / 60\sqrt{3}$$

$$\rightarrow \tan \phi = 1 / \sqrt{3}$$

$$\rightarrow \tan \phi = \tan 30^\circ$$

$$\rightarrow \phi = 30^\circ$$

The angle of elevation of the top of the second tower from the foot of the first is 30° .

Question 14: Answer any two questions

[4 x 2 = 8]

[i] The length of outer and inner radii of a hollow right circular pipe is 5 cm 4 cm respectively. If the total surface area of the pipe is 1188 sq. cm. find the length of the pipe.

[ii] A hemisphere pot with an internal radius of 9 cm is completely filled with water in cylindrical bottles with a diameter of 3 cm and height of 4 cm, then find the number of bottles to be required to make the pot empty.

[iii] The diameter of the base of a right circular cone is 21 metres and height is 14 metres. What will be the expenditure to colour the curved surface at the rate of Rs 1.50 per square metre?

Solution:

$$[i] 2\pi (r_1 + r_2) h + 2\pi (r_1^2 - r_2^2) = 1188$$

$$\pi ((5 + 4)h + (5^2 - 4^2)) = 1188 / 2$$

$$(22 / 7) [9h + 9] = 594$$

$$9h + 9 = 189$$

$$9h = 189 - 9$$

$$9h = 180$$

$$h = 180 / 9$$

$$h = 20\text{cm}$$

[ii] Volume of a hemisphere = $2\pi r^3 / 3$

$$= 2 * (22 / 7) * (9^3) / 3$$

$$= 4582.3 / 3$$

$$= 1527.3$$

Volume of the cylinder = $\pi r^2 h$

$$= (22 / 7) * (3 / 2)^2 * 4$$

$$= 28.29$$

Number of bottles = $1527.3 / 28.3$

$$= 54$$

[iii] Let, the base radius of the cone = r m

According to the problem,

$$\Rightarrow \pi r^2 = 21$$

$$\Rightarrow r^2 = 21 \times 7 / 22$$

$$\Rightarrow r = 2.58$$

\therefore The radius of the base = 2.58 m

Height of the cone = 14 m

\therefore The slant height of the cone,

$$= \sqrt{(2.58^2 + 14^2)}$$

$$= \sqrt{(6.66 + 196)}$$

$$= 14.24 \text{ cm}$$

\therefore The curved surface area of the cone,

$$= \pi r l$$

$$= 22 / 7 \times 2.58 \times 14.24$$

$$= 115.47 \text{ sq. m}$$

\therefore Expenditure to colour the curved surface area,

$$= 115.47 \times 1.50$$

$$= \text{Rs. } 173.2$$

Question 15: Answer any two questions

[4 x 2 = 8]

[i] Find the mean of marks obtained by the girl students if their cumulative frequencies are as follows:

Marks	<10	<20	<30	<40	<50
Number of girl students	6	10	18	30	46

[ii] Find the median of data from the following frequency distribution table:

Class interval	0 - 10	10 - 20	20 - 30	30 - 40	40 - 50	50 - 60	60 - 70
Frequency	4	7	10	15	10	8	5

[iii] Find the mode of data from the following frequency distribution table.

Class	3 - 6	6 - 9	9 - 12	12 - 15	15 - 18	18 - 21	21 - 24
Frequency	2	6	12	24	21	12	3

Solution:

[i]

Marks	Number of girl students	Marks	Frequency	Mid value	$x_i f_i$
<10	6	0 - 10	6	5	30
<20	10	10 - 20	4	15	60
<30	18	20 - 30	8	25	200
<40	30	30 - 40	12	35	420
<50	46	40 - 50	16	45	720

$$\begin{aligned}\text{Mean} &= \sum x_i f_i / \sum f_i \\ &= 1430 / 46\end{aligned}$$

$$= 31.08$$

[ii]

Class	Frequency	Cumulative frequency
0 - 10	4	4
10 - 20	7	11
20 - 30	10	21
30 - 40	15	36
40 - 50	10	46
50 - 60	8	54
60 - 70	5	59

$$\text{Median} = 59 + 1 / 2 = 30^{\text{th}} \text{ term}$$

$$\text{Median} = L + \{(n + 1) / 2\} * (h/f)$$

$$\text{Median class} = 20 - 30$$

$$= 20 + (30 - 11) * (10 / 10)$$

$$= 20 + 19 * 1$$

$$= 39$$

$$\text{[iii] Modal class} = 12 - 15$$

$$l = 12, f_1 = 24, f_0 = 12, f_2 = 21, h = 3$$

$$Z = l + (f_1 - f_0) / (2f_1 - f_0 - f_2) * h$$

$$= 12 + (24 - 12) / (2 * 24 - 12 - 21) * 3$$

$$= 12 + 12 / 15 * 3$$

$$= 14.4$$

[Alternative Question for Sightless Candidates]

Question 11: Answer any one question

[5 x 1 = 5]

[i] Describe the process of drawing the mean proportional of two line segments of a given length.

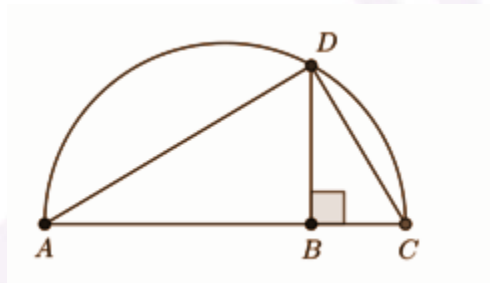
[ii] A circle is given, describe the process of drawing a tangent to this circle at a point on it.

Solution:

[i] Given any two straight lines of length a and b it is possible to find a straight line of length c such that $a:c = b:c$.

Construction

- Let a and b be the two given straight lines.
- Let AB and BC be placed in a straight line and let the semicircle ADC be placed on AC .
- Let BD be drawn perpendicular to AC .
- Then BD is the required mean proportional.



[ii] Construction of a tangent to a circle

To draw a tangent to a circle at a point on the circle. (Refer fig.)

Step 1: Draw a circle with the required radius with centre O .

Step 2: Join centre of the circle O and any point P on the circle. OP is the radius of the circle.

Step 3: Draw a line perpendicular to radius OP through point P . This line will be a tangent to the circle at P .

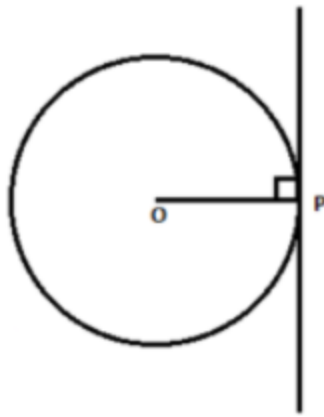


Figure 1-construction of tangent

[Additional Question For External Candidates]

Question 16: (a) Answer any three questions

[2 x 3 = 6]

- [i] If the percentage of profit on the sale price is 20%, then what are the percentages of profit on the cost price?**
- [ii] If $x = 3\cos\theta$; $y = 3\sin\theta$, then find the value of $x^2 + y^2$.**
- [iii] Simplify: $\sqrt{98} + \sqrt{8} - 2\sqrt{32}$.**
- [iv] The ratio of the lengths of the radii of the bases a right circular cylinder and a right circular cone 3:4 and the ratio of their heights are 2:3; what is the ratio of their volume?**

Solution:

[i] 20% of profits on sales mean 25% profits to cost. Thus the cost will be 75, profit will be 25 if the sales will be 100.

[ii] $x = 3\cos\theta$; $y = 3\sin\theta$

$$\begin{aligned}
 x^2 + y^2 &= (3 \cos \theta)^2 + (3 \sin \theta)^2 \\
 &= 9 \cos^2 \theta + 9 \sin^2 \theta \\
 &= 9 (\cos^2 \theta + \sin^2 \theta) \\
 &= 9
 \end{aligned}$$

$$\begin{aligned}
 & [\text{iii}] \sqrt{98} + \sqrt{8} - 2\sqrt{32} \\
 &= \sqrt{49 \times 2} + \sqrt{4 \times 2} - 2\sqrt{16 \times 2} \\
 &= 7\sqrt{2} + 2\sqrt{2} - 8\sqrt{2} \\
 &= \sqrt{2}
 \end{aligned}$$

$$[\text{iv}] \text{ Volume of the cone} = (1/3) \pi r_1^2 h_1$$

$$\text{The volume of the cylinder} = \pi r_2^2 h_2$$

$$r_2 / r_1 = 3 / 4$$

$$h_2 / h_1 = 2 / 3$$

$$\text{Volume of the cylinder} / \text{Volume of the cone} = \pi r_2^2 h_2 / ((1/3) \pi r_1^2 h_1)$$

$$= 3 [r_2 / r_1]^2 [h_2 / h_1]$$

$$= 3 * (9 / 16) * (2 / 3)$$

$$= 9 / 8$$

$$= 9:8$$

(b) Answer any four questions

[1 x 4 = 4]

[i] Find the number of years for which a principal becomes double at the rate of simple interest of $6 \frac{1}{4} \%$ per annum.

[ii] AB is a diameter of a circle and P is any point on the circle if $\angle PAB = 30^\circ$ find the value of the angle PBA.

[iii] Express $22^\circ 30'$ in radian.

[iv] If the radius of a solid sphere is 10.5 cm, then what is the area of its whole surface?

[v] If $x : y = 2 : 3$ and $y : z = 4 : 7$, then find $x : z$.

Solution:

[i] Let the principal amount be P, Simple interest amount is also P (This is because the money gets doubled if half the doubled amount will be the principal amount then the remaining amount will be its interest). Hence, the interest and the principal amount is equal here.

Let the number of years be "T".

Therefore,

$$A = PTR / 100$$

$$2P = [P * T * 6.25] / 100$$

$$200P = 6.25PT$$

$$200P / 6.25P = T$$

$$T = 32 \text{ years}$$

$$[ii] \Rightarrow \angle PAB = 30^\circ$$

$$\Rightarrow \angle BPA = 90^\circ \text{ [angle inscribed in a semi-circle]}$$

$$\Rightarrow \angle PAB + \angle PBA + \angle BPA = 180^\circ$$

$$\therefore 30^\circ + \angle PBA + 90^\circ = 180^\circ$$

$$\therefore \angle PBA = 180^\circ - 120^\circ$$

$$\therefore \angle PBA = 60^\circ$$

$$[iii] 22^\circ 30'$$

$$= (20 + 30)$$

$$= (20 + 30 / 60)$$

$$= 45 / 2$$

$$= [45 / 2] * [\pi / 180]$$

$$= \pi / 8$$

$$[iv] r = 10.5 \text{ cm}$$

$$\text{The surface area of sphere} = 4\pi r^2$$

$$= 4 * (22 / 7) * (10.5)^2$$

$$= 1386 \text{ cm}^2$$

$$[v] x : y = 2 : 3 \text{ and } y : z = 4 : 7$$

$$x : z = ?$$

$$x / y = 2 / 3$$

$$x = 2y / 3$$

$$y / z = 4 / 7$$

$$7y = 4z$$

$$z = 7y / 4$$

$$x / z = (2y / 3) / (7y / 4)$$

$$x : z = 8 : 21$$