

**ICSE SEMESTER 1 EXAMINATION**  
**SPECIMEN QUESTION PAPER**  
**MATHEMATICS**

---

*Maximum Marks: 40*

*Time allowed: One and a half hours (inclusive of reading time)*

**ALL QUESTIONS ARE COMPULSORY.**

*The marks intended for questions are given in brackets [ ].*

---

**Select the correct option for each of the following questions.**

---

**Section A [16 Marks]**

[16x1]

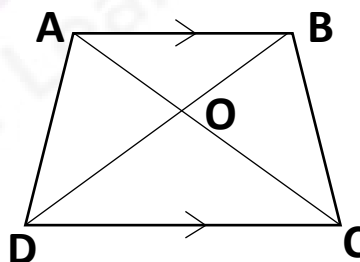
1. If matrix A is of order  $3 \times 2$  and matrix B is of order  $2 \times 2$  then the matrix AB is of order

(a)  $3 \times 2$                       (b)  $3 \times 1$                       (c)  $2 \times 3$                       (d)  $1 \times 3$

2. The percentage share of SGST of total GST for an Intra-State sale of an article is

(a) 25%                      (b) 50%                      (c) 75%                      (d) 100%

3. ABCD is a trapezium with AB parallel to DC.  
Then the triangle similar to  $\triangle AOB$  is



(a)  $\triangle ADB$                       (b)  $\triangle ACB$                       (c)  $\triangle COD$                       (d)  $\triangle COB$

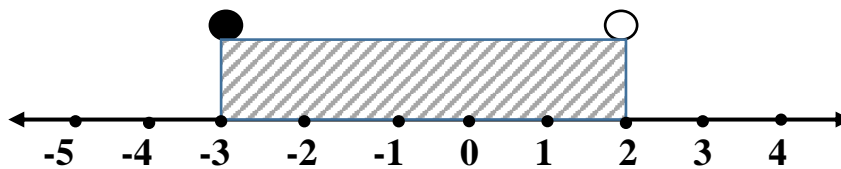
4. The mean proportion between 9 and 16 is

(a) 25                      (b) 144                      (c) 7                      (d) 12

5. A man deposited ₹ 500 per month for 6 months and received ₹3300 as the maturity value. The interest received by him is: -

(a) 1950                      (b) 300                      (c) 2800                      (d) none of these

6. The solution set representing the following number line is



- (a)  $\{x: x \in \mathbb{R}, -3 \leq x < 2\}$   
 (b)  $\{x: x \in \mathbb{R}, -3 < x < 2\}$   
 (c)  $\{x: x \in \mathbb{R}, -3 < x \leq 2\}$   
 (d)  $\{x: x \in \mathbb{R}, -3 \leq x \leq 2\}$
7. The first three terms of an arithmetic progression (A. P.) are 1, 9, 17, then the next two terms are  
 (a) 25 and 35      (b) 27 and 37      (c) 25 and 33      (d) none of these
8. If  $\Delta ABC \sim \Delta QRP$  then the corresponding proportional sides are  
 (a)  $\frac{AB}{QR} = \frac{BC}{RP}$       (b)  $\frac{AC}{QR} = \frac{BC}{RP}$       (c)  $\frac{AB}{QR} = \frac{BC}{QP}$       (d)  $\frac{AB}{PQ} = \frac{BC}{RP}$
9. If  $x \in W$ , then the solution set of the inequation  $-x > -7$ , is  
 (a)  $\{8, 9, 10, \dots\}$       (b)  $\{0, 1, 2, 3, 4, 5, 6\}$       (c)  $\{0, 1, 2, 3, \dots\}$       (d)  $\{-8, -9, -10, \dots\}$
10. The roots of the quadratic equation  $4x^2 - 7x + 2 = 0$  are 1.390, 0.359. The roots correct to 2 significant figures are  
 (a) 1.39 and 0.36      (b) 1.3 and 0.35      (c) 1.4 and 0.36      (d) 1.390 and 0.360
11. 1.5, 3, x and 8 are in proportion, then x is equal to  
 (a) 6      (b) 4      (c) 4.5      (d) 16
12. If a polynomial  $2x^2 - 7x - 1$  is divided by  $(x + 3)$ , then the remainder is  
 (a) -4      (b) 38      (c) -3      (d) 2
13. If 73 is the  $n^{\text{th}}$  term of the arithmetic progression 3, 8, 13, 18, ..., then 'n' is  
 (a) 13      (b) 14      (c) 15      (d) 16
14. The roots of the quadratic equation  $x^2 + 2x + 1 = 0$  are  
 (a) Real and distinct      (b) Real and equal      (c) Distinct      (d) Not real/imaginary

15. Which of the following statement is not true?
- (a) All identity matrices are square matrix  
 (b) All null matrices are square matrix  
 (c) For a square matrix number of rows is equal to the number of columns  
 (d) A square matrix all of whose elements except those in the leading diagonal are zero is the diagonal matrix
16. If  $(x - 2)$  is a factor of the polynomial  $x^3 + 2x^2 - 13x + k$ , then 'k' is equal to  
 (a) -10                      (b) 26                      (c) -26                      (d) 10

**Section B [12 Marks]**

[6x2]

17. A man deposited ₹1200 in a recurring deposit account for 1 year at 5% per annum simple interest. The interest earned by him on maturity is  
 (a) 14790                      (b) 390                      (c) 4680                      (d) 780
18. If  $x^2 - 4$  is a factor of polynomial  $x^3 + x^2 - 4x - 4$ , then its factors are  
 (a)  $(x-2)(x+2)(x+1)$   
 (b)  $(x-2)(x+2)(x-1)$   
 (c)  $(x-2)(x-2)(x+1)$   
 (d)  $(x-2)(x-2)(x-1)$
19. The following bill shows the GST rates and the marked price of articles A and B:

BILL: GENERAL STORE		
Articles	Marked price	Rate of GST
A	₹300	12%
B	₹1200	5%

- The total amount to be paid for the above bill is: -  
 (a) 1548                      (b) 1596                      (c) 1560                      (d) 1536
20. The solution set for the linear inequation  $-8 \leq x - 7 < -4, x \in I$  is  
 (a)  $\{x: x \in \mathbb{R}, -1 \leq x < 3\}$   
 (b)  $\{0, 1, 2, 3\}$   
 (c)  $\{-1, 0, 1, 2, 3\}$   
 (d)  $\{-1, 0, 1, 2\}$

21. If  $\frac{5a}{7b} = \frac{4c}{3d}$ , then by Componendo and dividendo

(a)  $\frac{5a+7b}{5a-7b} = \frac{4c-3d}{4c+3d}$       (b)  $\frac{5a-7b}{5a+7b} = \frac{4c+3d}{4c-3d}$       (c)  $\frac{5a+7b}{5a-7b} = \frac{4c+3d}{4c-3d}$       (d)  $\frac{5a+7b}{5a+7b} = \frac{4c-3d}{4c-3d}$

22. If  $A = \begin{bmatrix} 2 & 0 \\ -1 & 7 \end{bmatrix}$  then  $A^2$  is

(a)  $\begin{bmatrix} 4 & 0 \\ 1 & 49 \end{bmatrix}$       (b)  $\begin{bmatrix} 4 & 0 \\ -9 & 49 \end{bmatrix}$       (c)  $\begin{bmatrix} 4 & 0 \\ 9 & 49 \end{bmatrix}$       (d)  $\begin{bmatrix} 1 & 9 \\ -9 & 48 \end{bmatrix}$

**Section C [12 Marks]**

[3x4]

23. The distance between station A and B by road is 240 km and by train it is 300 km. A car starts from station A with a speed  $x$  km/hr whereas a train starts from station B with a speed 20km/hr more than the speed of the car.

(i) The time taken by car to reach station B is

(a)  $\frac{240}{x}$       (b)  $\frac{300}{x}$       (c)  $\frac{20}{x}$       (d)  $\frac{300}{x+20}$

(ii) The time taken by train to reach station A

(a)  $\frac{240}{x}$       (b)  $\frac{300}{x}$       (c)  $\frac{20}{x}$       (d)  $\frac{300}{x+20}$

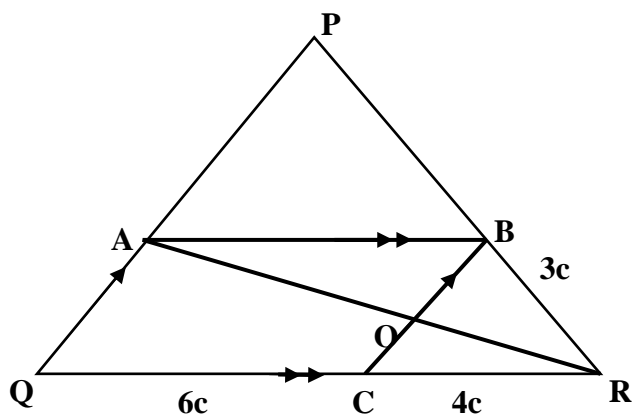
(iii) If the time taken by train is 1 hour less than that taken by the car, then the quadratic equation formed is

(a)  $x^2 + 80x - 6000=0$   
(b)  $x^2 + 80x - 4800=0$   
(c)  $x^2 + 240x - 1600 =0$   
(d)  $x^2 - 80x + 4800 = 0$

(iv) The speed of the car is

(a) 60km/hr      (b) 120km/hr      (c) 40km/hr      (d) 80km/hr

24. In the given triangle PQR,  $AB \parallel QR$ ,  $QP \parallel CB$  and  $AR$  intersects  $CB$  at  $O$ .



Using the given diagram answer the following question:

- (i) The triangle similar to  $\triangle ARQ$  is  
 (a)  $\triangle ORC$                       (b)  $\triangle ARP$                       (c)  $\triangle OBR$                       (d)  $\triangle QRP$
- (ii)  $\triangle PQR \sim \triangle BCR$  by axiom  
 (a) SAS                      (b) AAA                      (c) SSS                      (d) AAS
- (iii) If  $QC = 6$  cm,  $CR = 4$  cm,  $BR = 3$  cm. The length of  $RP$  is  
 (a) 4.5 cm                      (b) 8cm                      (c) 7.5cm                      (d) 5cm
- (iv) The ratio  $PQ : BC$  is  
 (a) 2 : 3                      (b) 3 : 2                      (c) 5 : 2                      (d) 2 : 5
- 25 The  $n^{\text{th}}$  term of an arithmetic progression (A.P.) is  $(3n + 1)$
- (i) The first three terms of this A. P. are  
 (a) 5, 6, 7                      (b) 3, 6, 9                      (c) 1, 4, 7                      (d) 4, 7, 10
- (ii) The common difference of the A.P. is  
 (a) 3                      (b) 1                      (c) -3                      (d) 2
- (iii) Which of the following is not a term of this A.P.  
 (a) 25                      (b) 27                      (c) 28                      (d) 31
- (iv) Sum of the first 10 terms of this A.P. is  
 (a) 350                      (b) 175                      (c) -95                      (d) 70