

76G97`Ugg`%\$`Maths Basic Marking Scheme

HYfa `&`Zcf`&\$&%1&&

Marking Scheme

Mathematics –Basic(241)

Class- X Session- 2021-22

TERM II

Q.N.	HINTS/SOLUTION	Marks																		
1	$3x^2 - 7x - 6 = 0$ $\Rightarrow 3x^2 - 9x + 2x - 6 = 0$ $\Rightarrow 3x(x - 3) + 2(x - 3) = 0$ $\Rightarrow (x - 3)(3x + 2) = 0$ $\therefore x = 3, -\frac{2}{3}$ OR Since the roots are real and equal, $\therefore D = b^2 - 4ac = 0$ $\Rightarrow k^2 - 4 \times 3 \times 3 = 0$ ($\because a = 3, b = k, c = 3$) $\Rightarrow k^2 = 36$ $\Rightarrow k = 6 \text{ or } -6$	1/2 1/2 1 1 1/2 + 1/2																		
2	Let l be the side of the cube and L, B, H be the dimensions of the cuboid Since $l^3 = 64 \text{ cm}^3 \therefore l = 4 \text{ cm}$ Total surface area of cuboid is $2[LB + BH + HL]$, Where L=12, B=4 and H=4 $= 2(12 \times 4 + 4 \times 4 + 4 \times 12) \text{ cm}^2 = 224 \text{ cm}^2$	1/2 1/2 1																		
3	<table border="1"> <thead> <tr> <th>Runs scored</th><th>Frequency</th><th>Cumulative Frequency</th></tr> </thead> <tbody> <tr> <td>0-20</td><td>4</td><td>4</td></tr> <tr> <td>20-40</td><td>6</td><td>10</td></tr> <tr> <td>40-60</td><td>5</td><td>15</td></tr> <tr> <td>60-80</td><td>3</td><td>18</td></tr> <tr> <td>80-100</td><td>4</td><td>22</td></tr> </tbody> </table> <p>Total frequency (N) = 22 $\frac{N}{2} = 11$; So 40-60 is the median class.</p> <p>Median = $l + \frac{(\frac{N}{2}) - cf}{f} \times h$ $= 40 + \frac{11 - 10}{5} \times 20$ $= 44 \text{ runs}$</p>	Runs scored	Frequency	Cumulative Frequency	0-20	4	4	20-40	6	10	40-60	5	15	60-80	3	18	80-100	4	22	1/2 1/2 1/2 1/2
Runs scored	Frequency	Cumulative Frequency																		
0-20	4	4																		
20-40	6	10																		
40-60	5	15																		
60-80	3	18																		
80-100	4	22																		
4	The common difference is $9 - 4 = 5$ If the first term is 6 and common difference is 5, then new AP is, 6, 6+5, 6+10... $= 6, 11, 16, \dots$	1 1																		
5	$\therefore \text{Mode} = 38.$ $\therefore \text{The modal class is } 30-40.$ Mode = $l + \frac{f_1 - f_0}{2f_1 - f_0 - f_2} \times h$	1/2 1/2																		

$$= 30 + \frac{16-12}{32-12-x} \times 10 = 38$$

1/2

$$\frac{4}{20-x} \times 10 = 8$$

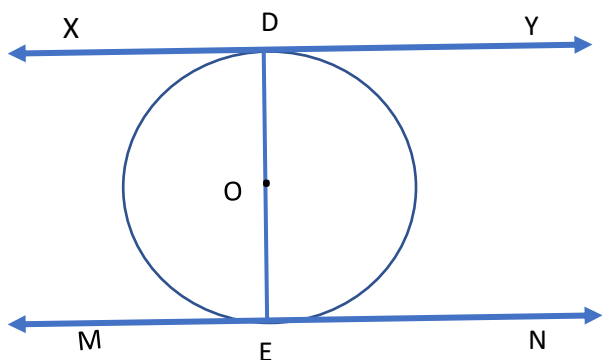
$$8(20-x) = 40$$

$$20 - x = 5$$

$X = 15$

$1/2$

6



$\therefore XY$ is the tangent to the circle at the point D

$$\therefore OD \perp XY \Rightarrow \angle ODX = 90^\circ \Rightarrow \angle EDX = 90^\circ$$

Also, MN is the tangent to the circle at E

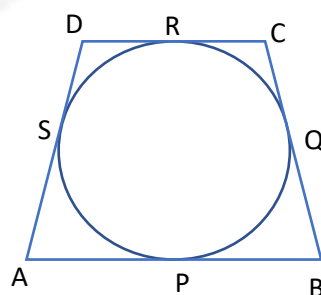
$$\therefore OE \perp MN \Rightarrow \angle OEN = 90^\circ \Rightarrow \angle DEN = 90^\circ$$
$$\Rightarrow \angle EDX = \angle DEN \text{ (each } 90^\circ).$$

which are alternate interior angles.

$$\therefore XY \parallel MN$$

OR

∴ Tangent segments drawn from an external point to a circle are equal

$$\therefore BP=BQ$$
$$CR=CQ$$
$$DR=DS$$
$$AP=AS$$


$$\Rightarrow BP + CR + DR + AP = BQ + CQ + DS + AS$$

$$\Rightarrow AB+DC = BC+AD$$

$$\therefore AD = 10 - 7 = 3 \text{ cm}$$

 $1/2$ $1/2$

1

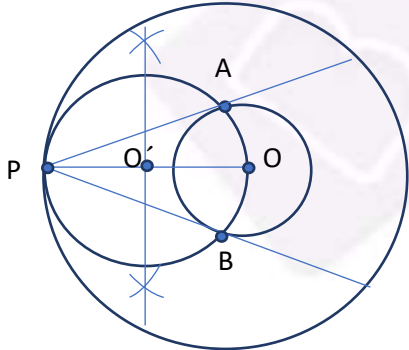
1

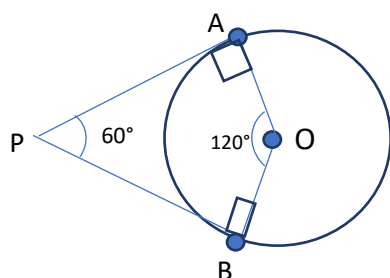
1

Section-B

7	<p>First Term of the AP(a) = 5 Common difference (d) = 8-5=3</p> <p>Last term = $a_{40} = a + (40-1)d$ $= 5 + 39 \times 3 = 122$</p> <p>Also $a_{31} = a + 30d = 5 + 30 \times 3 = 95$</p> <p>Sum of last 10 terms = $\frac{n}{2}(a_{31} + a_{40})$ $= \frac{10}{2}(95 + 122)$ $= 5 \times 217 = 1085$</p>	<p>1</p> <p>1</p> <p>1</p>
8	<p>Let, AB be the tree broken at C, Also let $AC = x$</p> <p>In $\triangle CAD$, $\sin 30^\circ = \frac{AC}{DC}$ $\Rightarrow \frac{1}{2} = \frac{x}{8}$ $\Rightarrow x = 4 \text{ m}$ \Rightarrow the length of the tree is = $8+4 = 12\text{m}$</p> <div data-bbox="906 709 1253 1138" data-label="Diagram"> </div> <p style="text-align: center;">OR</p> <p>Let AB and CD be two poles of height h meters also let P be a point between them on the road which is x meters away from foot of first pole AB, PD= (80-x) meters.</p> <p>In $\triangle ABP$, $\tan 60^\circ = \frac{h}{x} \Rightarrow h = x\sqrt{3}$(1)</p> <p>In $\triangle CDP$, $\tan 30^\circ = \frac{h}{80-x} \Rightarrow h = \frac{80-x}{\sqrt{3}}$(2)</p> <p>$x\sqrt{3} = \frac{80-x}{\sqrt{3}}$ [\because LHS(1) = LHS(2), so equating RHS] $\Rightarrow 3x = 80 - x \Rightarrow 4x = 80 \Rightarrow x = 20\text{m}$ So, $80 - x = 80 - 20 = 60\text{m}$ Hence the point is 20m from one pole and 60 meters from the other pole.</p> <div data-bbox="396 1703 941 1955" data-label="Diagram"> </div>	<p>1</p> <p>1/2 1/2</p> <p>1(correct Fig.)</p> <p>1</p> <p>1/2</p> <p>1/2</p> <p>1(correct Fig.)</p>

9	<p>PA = PB (Tangent segments drawn to a circle from an external point are equal)</p> <p>\therefore In $\triangle APB$, $\angle PAB = \angle PBA$</p> <p>Also, $\angle APB = 60^\circ$</p> <p>In $\triangle APB$, sum of three angles is 180°.</p> <p>Therefore, $\angle PAB + \angle PBA = 180^\circ - \angle APB = 180^\circ - 60^\circ = 120^\circ$.</p> <p>$\therefore \angle PAB = \angle PBA = 60^\circ (\because \angle PAB = \angle PBA)$</p> <p>$\therefore \triangle APB$ is an equilateral triangle.</p> <p>So, $AB = 6\text{cm}$</p>	<p>1</p> <p>1</p> <p>1</p>
10	<p>Let the three consecutive multiples of 5 be $5x$, $5x+5$, $5x+10$.</p> <p>Their squares are $(5x)^2$, $(5x+5)^2$ and $(5x+10)^2$.</p> $(5x)^2 + (5x+5)^2 + (5x+10)^2 = 725$ $\Rightarrow 25x^2 + 25x^2 + 50x + 25 + 25x^2 + 100x + 100 = 725$ $\Rightarrow 75x^2 + 150x - 600 = 0$ $\Rightarrow x^2 + 2x - 8 = 0$ $\Rightarrow (x+4)(x-2) = 0$ $\Rightarrow x = -4, 2$ $\Rightarrow x = 2 \text{ (ignoring -ve value)}$ <p>So the numbers are 10, 15 and 20</p>	<p>1</p> <p>1</p> <p>1</p>
Section-C		

11	 <p>Draw two concentric circles with center O and radii 3cm and 7cm respectively.</p> <p>Join OP and bisect it at O', so $PO' = O'O$</p> <p>Construct circle with center O' and radius $O'O$</p> <p>Join PA and PB</p>	<p>1</p> <p>1</p> <p>1</p> <p>1</p>
----	---	-------------------------------------



OR

Draw a circle of radius 6cm

Draw OA and Construct $\angle AOB = 120^\circ$

Draw $\angle OAP = \angle OBP = 90^\circ$

PA and PB are required tangents

Join OP and apply $\tan \angle APO = \tan 30^\circ = \frac{6}{PA}$

\Rightarrow Length of tangent = $6\sqrt{3}$ cm

1
1
1
1

12

Converting the cumulative frequency table into exclusive classes, we get:

Age	No of passengers(f_i)	x_i	$f_i x_i$
0-10	14	5	70
10-20	30	15	450
20-30	38	25	950
30-40	52	35	1820
40-50	50	45	2250
50-60	61	55	3355
60-70	42	65	2730
70-80	13	75	975
	$\Sigma f_i = 300$		$\Sigma f_i x_i = 12600$

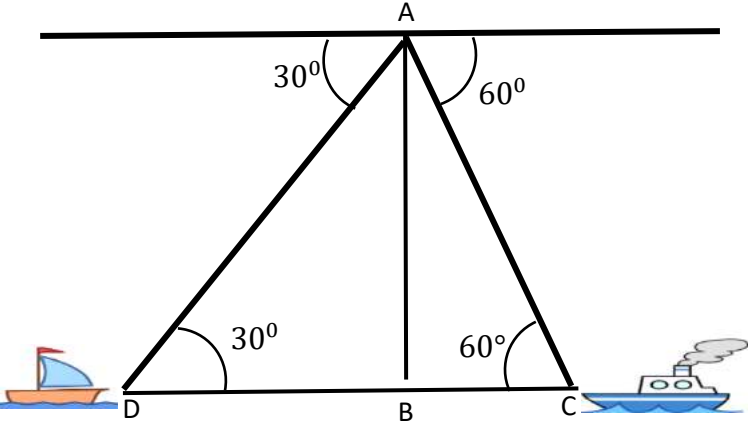
$$\text{Mean age} = \bar{x} = \frac{\Sigma f_i x_i}{\Sigma f_i} = \frac{12600}{300}$$

$$\bar{x} = 42$$

2

1

1

<p>13 (i)</p>	<p>The ship is nearer to the lighthouse as its angle of depression is greater.</p> <p>In ΔACB, $\tan 60^\circ = \frac{AB}{BC}$</p> <p>$\Rightarrow \sqrt{3} = \frac{40}{BC}$</p> <p>$\therefore BC = \frac{40}{\sqrt{3}} = \frac{40\sqrt{3}}{3}m$</p> 	<p>1</p> <p>1</p>
<p>(ii)</p>	<p>In ΔADB, $\tan 30^\circ = \frac{AB}{BD}$</p> <p>$\Rightarrow \frac{1}{\sqrt{3}} = \frac{40}{BD}$</p> <p>$\therefore DB = 40\sqrt{3}m$</p> <p>Time taken to cover this distance = $\left(\frac{60}{2000} \times 40\sqrt{3}\right)$ minutes</p> <p>$= \frac{60\sqrt{3}}{100} = 2.076$ minutes</p>	<p>1</p> <p>1</p>
<p>14 (i)</p>	<p>Let r_1 and r_2 be respectively the radii of apples and oranges</p> <p>$\therefore 2r_1:2r_2 = 2:3 \Rightarrow r_1:r_2 = 2:3$</p> <p>$4\pi r_1^2:4\pi r_2^2 = \left(\frac{r_1}{r_2}\right)^2 = \left(\frac{2}{3}\right)^2 = 4:9$</p>	<p>1/2</p> <p>$1\frac{1}{2}$</p>
<p>(ii)</p>	<p>Let the height of the drum be h.</p> <p>Volume of the drum = volume of the cylinder + volume of the sphere</p> <p>$\pi 3^2 h = (\pi 3^2 \times 8 + \frac{4}{3}\pi 3^3) cm^3$</p> <p>$\Rightarrow h = (8 + 4)cm$</p> <p>$\Rightarrow h = 12cm$</p>	<p>1</p> <p>1</p>

