

Uttar Pradesh Madhyamik Shiksha Parishad Class 10 Model Question Papers for Social Science

HIGH SCHOOL EXAMINATION : 2021-22

MODEL QUESTION PAPER

CLASS – X

SOCIAL SCIENCE

Time: 3 hours 15 minutes

Max Marks: 70

Note : First 15 minutes are allotted for the candidates to read the question paper.

Instructions:

- (i) This question paper is divided into two parts A & B. Attempt all the questions of each part together at one place. Each part should be attempted on a new page.
- (ii) Marks allotted for each question are mentioned against them.
- (iii) This question paper contains four types of question-Multiple-choice type, Very Short Answer type, Short Answer type and Long Answer type. Instructions have been given at the beginning of each type of question.
- (iv) Attach firmly the supplied maps for Parts-A & B to your answer-book.
- (v) For vision-impaired examinees Question No. 14 in Part-A and Question No. 28 in Part-B have been given separately for writing answers in lieu of maps work.

PART-A

(Multiple Choice Type Questions)

Choose the correct answer from the given alternatives and write in your answer –book:

1. What is the main feature of Belgium Model? 1
 - a) Power sharing of all ethnic group
 - b) Power sharing of some people
 - c) Power sharing of all religion people
 - d) None of the above

2. Due to which incident Mahatma Gandhi postponed non-cooperation movement? 1
 - a) Rowlatt Act
 - b) Khilafat movement
 - c) Jallianwalla Bagh incident
 - d) Chauri Chaura incident.

3. Who became the ruler of united Italy in 1861? 1
a) Victor Emmanuel.
b) Bismarck.
c) Victor Emmanuel II.
d) Cavour.
4. Who wrote the book "Hind Swaraj"? 1
a) Jawahar Lal Nehru
b) Ravindra Nath Tagore
c) Mahatma Gandhi
d) Bal Ganga Dhar Tilak
5. After which war unification of Germany was completed? 1
a) Austria-Prussia war
b) France-Prussia war
c) France-Austria war
d) None of these
6. In which schedule of the constitution Languages are placed? 1
a) 7th
b) 10th
c) 8th
d) 9th

(Very Short Answer Type Questions)

7. Mention any two satyagraha movements of Gandhi ji? 1+1
8. Why democratic government is considered popular? Give two reasons. 1+1
9. Name two democratic countries situated on the north-eastern border of India. 1+1

(Short Answer type Questions)

10. Who were Marianne and Germania? What was the objective of portraying them? 1+1+1

Or

- What was Rowlatt Act? How did Gandhi ji oppose this act? $1\frac{1}{2} + 1\frac{1}{2}$

11. Mention three challenges of the present democratic system. 1+1+1
- Or
- Responsible governance and transparency are necessary in democracy. Give your opinion in favor of it? 3

(Long Answer Type Questions)

12. Mention the three types of movements or flows within international economic exchange. Elucidate your answer with examples. 2+2+2
- Or
- What were the causes of the “Great Depression” after the First World War? Describe any two effects of it. 2+2+2
13. What is meant by Power Sharing? Why is it necessary? Give any two reasons. 2+2+1+1
- Or
- What is meant by federalism? Mention any three features of federal system. $1\frac{1}{2} + 1\frac{1}{2} + 1\frac{1}{2} + 1\frac{1}{2}$

(Questions related with Map)

14. Show the following places on the outline map of India supplied to you, by the symbol (•) and also write their names. For correct name and location $\frac{1}{2}, \frac{1}{2}$ marks are allotted.
- (i) The place where Jallianwalla Bagh incident took place. $\frac{1}{2} + \frac{1}{2}$
- (ii) The place where Gandhi ji made salt. $\frac{1}{2} + \frac{1}{2}$
- (iii) The place where indigo croppers started their movement $\frac{1}{2} + \frac{1}{2}$
- (iv) The place where cotton mill workers started satyagraha. $\frac{1}{2} + \frac{1}{2}$
- (v) The place where the first session of Indian National Congress in 1920, was held. $\frac{1}{2} + \frac{1}{2}$

(Only for visually Impaired examinees in lieu of Map work)

- (i) Where did Jallianwalla Bagh incident take place? 1
- (ii) Where did Gandhi ji start make salt? 1
- (iii) Where did indigo croppers start their movement? 1
- (iv) Where did cotton mill workers start satyagraha? 1
- (v) Where was the first session of Indian National congress in 1920, held? 1

Part-B
(Multiple Choice Type Questions)

Instruction: Write the correct answer from the given options and write it in your answer-book.

15. In which if the following states is terrace cultivation practiced? 1
a) Punjab
b) Haryana
c) Uttar Pradesh
d) Uttrakhand
16. Which one of the following is a rabi crop? 1
a) Pulses
b) Millets
c) Gram
d) Cotton
17. Koderma, in Jharkhand is the leading producer of which one of the following minerals? 1
a) Bauxite
b) Mica
c) Iron ore
d) Copper
18. In which of these states is black soil mainly found? 1
a) Jammu and Kashmir
b) Rajasthan
c) Maharashtra
d) Jharkhand
19. What is the rank of India in Human Development Index (HDI)? 1
a) 120th
b) 130th
c) 180th
d) D. 190th
20. What type of country is India in terms of Income? 1
a) High income group

- b) Middle income group
- c) Low income group
- d) None of these.

(Very Short Answer Type Questions)

- | | | |
|-----|--|-----|
| 21. | Write any two difference between biotic and abiotic resources. | 1+1 |
| 22. | What is Gross Domestic Product? | 2 |
| 23. | What is another name for disguised unemployment? | 2 |




(Short Answer Type Questions)

- | | | |
|-----|---|-----|
| 24. | How are minerals formed in igneous and metamorphic rocks? | 3 |
| | OR | |
| | Name any one Beverage crop. Write the description of the favorable geographical conditions for its cultivation. | 1+2 |
| 25. | Write a short description of different sectors of Indian economy. | 3 |
| | OR | |
| | What is globalization? Write in brief. | 3 |

(Long Answer Type Questions)

- | | | |
|-----|---|-------|
| 26. | What is International Market? Write its five characteristics. | 1+5 |
| | OR | |
| | Classify the means of transport. In how many parts can road transport be divided? Describe any two. | 2+2+2 |
| 27. | What legal measures should be taken by the government to empower consumer in India. | 6 |
| | OR | |
| | 'The effect of globalization is not the same in all countries'. Explain this statement in your own words. | 6 |

(Questions related with Map)

- | | | |
|-------|---|-----------------------------|
| 28. | Show the following on the given map of India. For correct pointing and correct name $\frac{1}{2}, \frac{1}{2}$ marks are given. | |
| (i) | A Park of west Bengal with  sign and name. | $\frac{1}{2} + \frac{1}{2}$ |
| (ii) | A Dam built on Narmada river with  sign and name | $\frac{1}{2} + \frac{1}{2}$ |
| (iii) | Mahanadi with  sign and name. | $\frac{1}{2} + \frac{1}{2}$ |

- (iv) A coalfield of Jharkhand with \triangle sign and name. $\frac{1}{2} + \frac{1}{2}$
- (v) A port situated on the east coast of India with \square sign and name. $\frac{1}{2} + \frac{1}{2}$

(Only for visually Impaired examinees in lieu of Map work)

- (i) Write the name of a park of West Bengal. 1
- (ii) Name the dam built on Narmada river. 1
- (iii) Name a river of North India. 1
- (iv) Write the name of a port situated on the eastern coast of India. 1
- (v) Write the name of a coal mine in Jharkhand. 1

