

SAMPLE QUESTION PAPER

BIOTECHNOLOGY (045)

Class XII (2022-23)

Max.Marks:70

Time allowed: 3 hours

General Instructions:

- i) All questions are compulsory.*
- ii) The question paper has five sections. All questions are compulsory.*
- iii) Section–A contains 12 Multiple choice questions and 4 Assertion-Reasoning based questions of 1 mark each; Section–B has 5 short answer questions of 2 marks each; Section –C has 7 short answer questions of 3 marks each; Section-D has two case-based question of 4 marks; Section-E has three long answer questions of 5 marks each.*
- iv) There is no overall choice. However, internal choices have been provided in some questions. A student has to attempt only one of the alternatives in such questions.*

SECTION A		
1.	Male sterility is widely used in crops such as maize, sunflower for hybrid production. Male sterile plants are created by introducing a gene encoding- (a) Barnase protein (b) TA29 (c) Barstar protein (d) Coat protein	1
2.	Body builders prefer to drink buffalo milk to build muscle mass. Determine the reason for this? (a) Easier to digest (b) Lower fat content (c) Higher calcium and phosphorus content (d) Balanced calorie source	1

3.	<p>An industrially important secondary metabolite which is used as a red pigment in lipsticks and dye for silk is obtained from-</p> <p>(a) Datura stramonium</p> <p>(b) Lithospermum erythrorhizon</p> <p>(c) Digitalis lanata</p> <p>(d) Coptis japonica</p>	1
4.	<p>Proteome of a given cell is dynamic because :</p> <p>(a) In response to Internal and external changes the biochemical machinery of the cell could be changed.</p> <p>(b) In response to Internal and external changes the biochemical machinery of the cell could not be changed.</p> <p>(c) No direct relationship exists between Internal and external changes in the biochemical machinery of the cell.</p> <p>(d) Indirect relationship exists between Internal and external in changes the biochemical machinery of the cell.</p>	1
5.	<p>Artificial seeds are produced by-</p> <p>(a) Encapsulating somatic embryos in calcium alginate beads</p> <p>(b) Desiccating the somatic embryos with or without coating</p> <p>(c) Hydrating the somatic embryos</p> <p>(d) Hydrating the zygotic embryos.</p>	1
6.	<p>Being a researcher, you want to improve the deficiency of certain amino acids in cereals and legumes. Choose the technique out of the following which will be the best to achieve your goal:</p> <p>(a) Plant tissue culture</p> <p>(b) Adding fertilizers to soil</p> <p>(c) Protein engineering</p> <p>(d) Vegetative Propagation</p>	1
7.	<p>Foreign DNA is directly introduced into the recipient cell using a fine micro-syringe to transform it. The probable advantage this provides could be:</p> <p>a) No specialised equipment required</p> <p>b) No damage to cells</p> <p>c) Low transduction rate</p> <p>d) Precision of delivery</p>	1

8.	<p>A piece of young hypocotyl was cultured in MS medium in a plant tissue culture lab. This is a type of-</p> <p>(a) Organ culture (b) Callus culture (c) Explant culture (d) Mass cell culture</p>	1
9.	<p>Molecular Biologists prefer to use artificial vectors with MCS. List a benefit for this choice.</p> <p>(a) Flexibility in choice of insert size (b) Flexibility in choice of vector size (c) Flexibility in choice of host organism (d) Flexibility in choice of restriction enzyme</p>	1
10.	<p>Native enzyme Subtilisin is inactivated by bleach, in detergents because of oxidation of methionine at position 222. Choose a strategy that will help overcome this problem:</p> <p>(a) Use Pepsin instead of Subtilisin (b) Eliminate use of bleach (c) Substitute another amino acid at position 222 (d) Use Amylase instead of Subtilisin</p>	1
11.	<p>Culture based approaches for detecting pathogens, as compared to PCR based assays are</p> <p>(a) Faster, safer but less specific (b) Slower but safer and more specific (c) Slower, less safe and less specific (d) Slower, less safe but more specific</p>	1
12.	<p>A 100 Kb DNA fragment has to be cloned in a host cell. Which vector should be used for this experiment?</p> <p>a) Plasmid b) Cosmid c) BAC d) Bacteriophage lambda</p>	1

	<p>Question No. 13 to 16 consist of two statements – Assertion (A) and Reason (R). Answer these questions selecting the appropriate option given below:</p> <p>A. Both Assertion and Reason are true and the reason is the correct explanation of the assertion</p> <p>B. Both Assertion and Reason are true but the reason is not the correct explanation of the assertion</p> <p>C. Assertion is true but Reason is false</p> <p>D. Both Assertion and Reason are false</p>	
13	<p>Assertion-The functional property of whey protein exploited in confectionery is browning.</p> <p>Reason-Whey proteins undergo maillard reaction providing colour and aroma to food items</p>	1
14	<p>Assertion- Foaming is a problem in most microbiological processes.</p> <p>Reason- It is caused due to the presence of fatty acids and silicones in the culture medium.</p>	1
15	<p>Assertion- Whey mixed with herbs and honey is administered to the sick to treat ailments like jaundice and infected skin lesions.</p> <p>Reason - Whey proteins elevates the levels of glutathione which protects the cells from harmful oxygen intermediates.</p>	1
16	<p>Assertion-It's difficult to count genes even if we know where the genes are in a given genome</p> <p>Reason- There is no simple correlation between the intuitive complexity of an organism and the number of genes in its genome.</p>	1
SECTION B		
17	Depict the production and mode of action of tissue plasminogen activator through diagram or flowchart.	2
18	<p>X is a valuable tool in plant breeding, wherein variation in tissue culture regenerated plants from somatic cells can be used for the development of crops with novel traits. Identify 'X'. State any one example where this tool can be used for crop improvement.</p> <p style="text-align: center;">OR</p> <p>Leaf explants of brinjal are showing multiple shoot regeneration in a plant tissue culture laboratory. Which plant regeneration pathway is depicted here? In this process, what would happen if either auxins or cytokinins are high in the medium?</p>	2

2

19

Given below is a list of the first 06 residues of the beta helix in myoglobin from different organisms. Based on this information, which amino acids (a) are most conserved, and (b) are highly variable.

Position → Organism ↓	1	2	3	4	5	6
Human	D	I	P	G	H	G
Chicken	D	I	A	G	H	G
Alligator	K	L	P	E	H	G
Turtle	D	L	S	A	H	G
Tuna	D	L	T	T	M	G
Carp	D	F	E	G	T	G

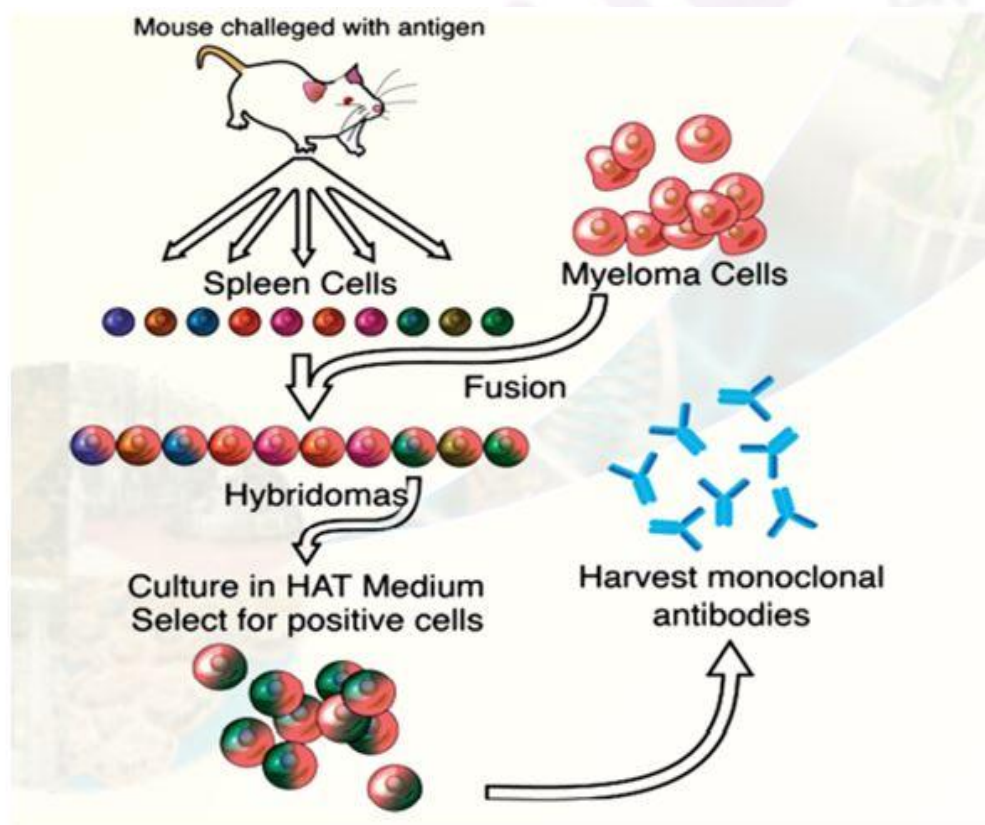
2

20

A doctor has to prescribe a protein rich diet to sportsmen to improve their performance. What are the two parameters that the doctor should consider while prescribing these protein sources. Explain.

2

21

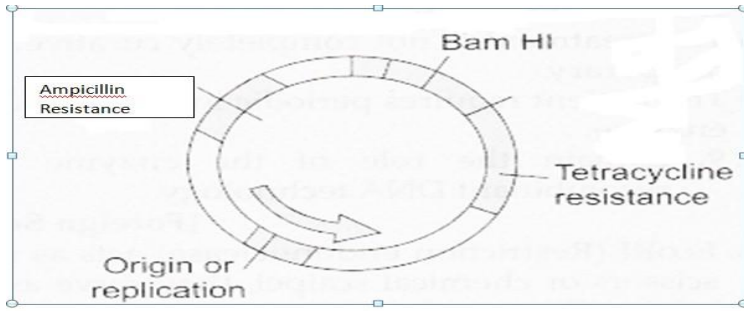


(a) Identify the technique shown above.

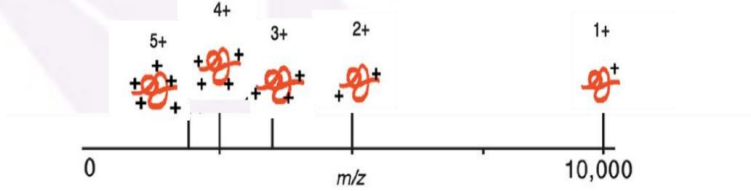
(b) State any three applications of the technique.

SECTION C

22	<p>(a) Chymotrypsinogen is inactive form of enzyme chymotrypsin. Which molecular alteration converts it into active form?</p> <p>(b) The catalytic triad in chymotrypsin leads to a charge relay system. Justify</p> <p style="text-align: center;">OR</p> <p>Haemoglobin protein of a normal individual has to be compared with that of a person with sickle cell anaemia in a pathology laboratory. Represent the steps of the technique, which can be used for the same, in the form of a flow chart.</p>	3																					
23	<p>Given below are few transgenic crops approved by US Food and Drug Administration along with the improved character. Name the genes A to F introduced for the improved character.</p> <table border="1" style="margin-left: auto; margin-right: auto;"> <thead> <tr> <th>Crop</th><th>Gene</th><th>Improved character</th></tr> </thead> <tbody> <tr> <td>Canola</td><td>A</td><td>Hybrid production</td></tr> <tr> <td>Corn</td><td>B</td><td>Insect resistance</td></tr> <tr> <td>Cotton</td><td>C</td><td>Insect resistance</td></tr> <tr> <td>Papaya</td><td>D</td><td>Virus resistance</td></tr> <tr> <td>Potato</td><td>E</td><td>Insect and virus control</td></tr> <tr> <td>Soyabean</td><td>F</td><td>Weed control</td></tr> </tbody> </table>	Crop	Gene	Improved character	Canola	A	Hybrid production	Corn	B	Insect resistance	Cotton	C	Insect resistance	Papaya	D	Virus resistance	Potato	E	Insect and virus control	Soyabean	F	Weed control	3
Crop	Gene	Improved character																					
Canola	A	Hybrid production																					
Corn	B	Insect resistance																					
Cotton	C	Insect resistance																					
Papaya	D	Virus resistance																					
Potato	E	Insect and virus control																					
Soyabean	F	Weed control																					
24	<p>In animal cell culture, osmolarity of the culture medium has significant role in cell growth and function. Justify. Which ingredients decides osmolarity of the medium</p>	3																					
25	<p>You have the gene sequence of a protein which has a proteolytic activity. How will you establish through tools of bioinformatics that this protein:</p> <p>(a) Has homologues in other organisms</p> <p>(b) Belongs to the chymotrypsin family</p> <p>(c) Has a database that can we used to trace the evolutionary history of this proteolytic protein</p>	3																					
26	<p>What are type II restriction endonucleases (RE)? Give an example of a type II RE that generates flush ends and the sequence recognized by it. Mention two other enzymes and their utility in cloning experiment.</p>	3																					

27	<p>Bioinformatics databases provide resources for gene level sequences such as RefSeq, Homologene, Paralog and UniGene and BLAST. Which of these would you use as most suitable starting point for:</p> <p>i) Avoiding redundancy in EST data.</p> <p>ii) For inferring relations among organisms.</p> <p>iii) Information retrieved from this resource will be used in designing gene chips.</p>	3
28	<p>a) Identify the vector shown below:</p>  <p>b) How can we use LEU2 gene as a selectable marker?</p>	

SECTION D

29	<p style="text-align: center;"><u>Mass Spectrometry</u></p> <p>Mass spectrometry (MS) has emerged as an important tool in biotechnology. It is extremely useful in obtaining protein structural information such as peptide mass or amino acid sequences. The molecular ions are generated either by a loss or gain of a charge (e.g. electron ejection, protonation or deprotonation). After the ions are formed, they can be separated according to their m/z ratio and finally detected. A protein with a molecular weight of 10,000 dalton generates five different peaks with the ions containing 5, 4, 3, 2, and 1 charges, respectively, as shown below.</p>  <p>(a) What happens if there is a loss of charge from a biomolecule?</p> <p>(b) Mass spectrometry is an analytical tool. Justify the statement.</p> <p>(c) Calculate the m/z ratio each for protein ions containing 5, 4, 3 and 2 charges.</p> <p style="text-align: center;">OR</p> <p>(c) A protein has a molecular weight of 20,000 daltons and it forms two protein ions containing 6 and 7 charges, What will be its mass/charge ratio?</p>	4
----	---	---

4

30

Growth kinetics is an autocatalytic reaction which implies that the rate of growth is directly proportional to the concentration of cell..

As the cell divides, we shall have

No. of cell division	0	1	2	3	n
No. of cells	1	2	4	8	2^n
Mathematically	N_0	$N_0 \times 2^1$	$N_0 \times 2^2$	$N_0 \times 2^3$	$N_0 \times 2^n$

Doubling time which is the time taken by the population to double through one round of cell division is inversely related to specific growth rate.

- In a microbiology laboratory, one bacterial culture is marked “X” with generation time 20 s and other bacterial culture is marked “Y” with generation time 30 s. Which bacterial culture will proliferate rapidly?
- Using the above table, Calculate the number of divisions the population must have undergone to increase from 10^4 to 10^7 in 24 hours.
- Using the above table, Calculate the generation time (doubling time) of a bacterial population in which the number of bacteria increases from 10^8 cells/ml to 10^{14} cells/ml during four hours of exponential growth.

OR

- Explain any two different ways to measure microbial growth.

SECTION E

31	<p>Several medically important protein pharmaceuticals have been produced using animal cell culture and recombinant DNA technology. Represent the animal cell line used for the production of the following proteins and their therapeutic use in a tabular form.</p> <p>(a) Erythropoietin (b) Factor VIII (c) Follicle Stimulating Hormone (FSH) (d) Interleukin 2 (IL 2) (e) Monoclonal antibodies (mAbs)</p> <p style="text-align: center;">OR</p> <p>(a) Differentiate between- (i) Defined and Serum-supplemented medium (ii) Anchorage-dependent and Anchorage-independent cells (b) Explain how pH is maintained in animal cell cultures. Mention two advantages of maintaining pH during such cultures.</p>	5
----	--	---

32	<p>a) Dr. Sharma discovered first restriction enzyme ever from a bacteria called <i>Thermus aquaticus</i>, strain DR 15. Name the enzyme.</p> <p>b) Design two primers (5 nucleotide long each) for the given sequence: 5'GATTCATTGCGCGCATTACTCGCATT3'</p> <p>c) Recognition sites are generally palindromic in nature. Does it point towards the structure of restriction enzymes being that of a homodimer or heterodimer? Give reason for your answer.</p> <p>d) A bacteriophage is known to infect <i>E.coli</i> with pili. How can it be modified to serve as a suitable vector?</p> <p style="text-align: right;">(1+1+1+2)</p> <p style="text-align: center;">OR</p> <p>a) Schematically explain the formation of recombinant plasmid. (2)</p> <p>b) Selection is an important step in genetic engineering. You are given ampicillin and tetracycline antibiotics. Using these antibiotics, which selection technique could be used to differentiate between recombinant and non-recombinant cells? (3)</p>	5
33	<p>(a) A group of students are trying to isolate recombinant insulin .After processing the fermentation broth, they observed no yield .What could be the most possible reason for this?</p> <p>(b) A recently discovered microbial strain gives us the desired metabolite in nanomolar concentration. Suggest two ways of improving the production of the desired metabolite.</p> <p>(c) <i>Pichia pastoris</i> has many advantages as a eukaryotic expression host. Justify giving two reasons.</p> <p style="text-align: center;">OR</p> <p>a) A professor told her students to ready a bacterial culture in 12 hours sharp. Suggest her students two ways to enhance the growth of bacterial cells in the lab so that they are able to fulfill the requirement.</p> <p>b) Write any two commercial significance of microbial cell culture.</p> <p>c) There are many ways of measuring microbial growth. Which technique is considered the best and why?</p>	5

.....