

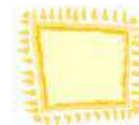
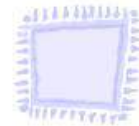




## HOW MANY

**Question 1:**

Write the number of sticks.



**Answer:**






**Question 2:**  
How many beads?

	$\begin{matrix} \cdot \\ \cdot \end{matrix}$	
	$\begin{matrix} \cdot & \cdot & \cdot \\ \cdot & \cdot & \cdot \\ \cdot & \cdot & \cdot \end{matrix}$	
	$\begin{matrix} \cdot \\ \cdot \\ \cdot \end{matrix}$	
	$\begin{matrix} \cdot & \cdot \\ \cdot & \cdot \end{matrix}$	



Answer:

	$\begin{matrix} \cdot \\ \cdot \end{matrix}$	
	$\begin{matrix} \cdot & \cdot & \cdot \\ \cdot & \cdot & \cdot \\ \cdot & \cdot & \cdot \end{matrix}$	
	$\begin{matrix} \cdot \\ \cdot \\ \cdot \end{matrix}$	
	$\begin{matrix} \cdot & \cdot \\ \cdot & \cdot \end{matrix}$	

**Question 3:**  
How much will the bananas cost?



**Answer:**



**Question 4:**  
Give number name.



**Answer:**




**Question 5:**  
How many tens?



**Answer:**

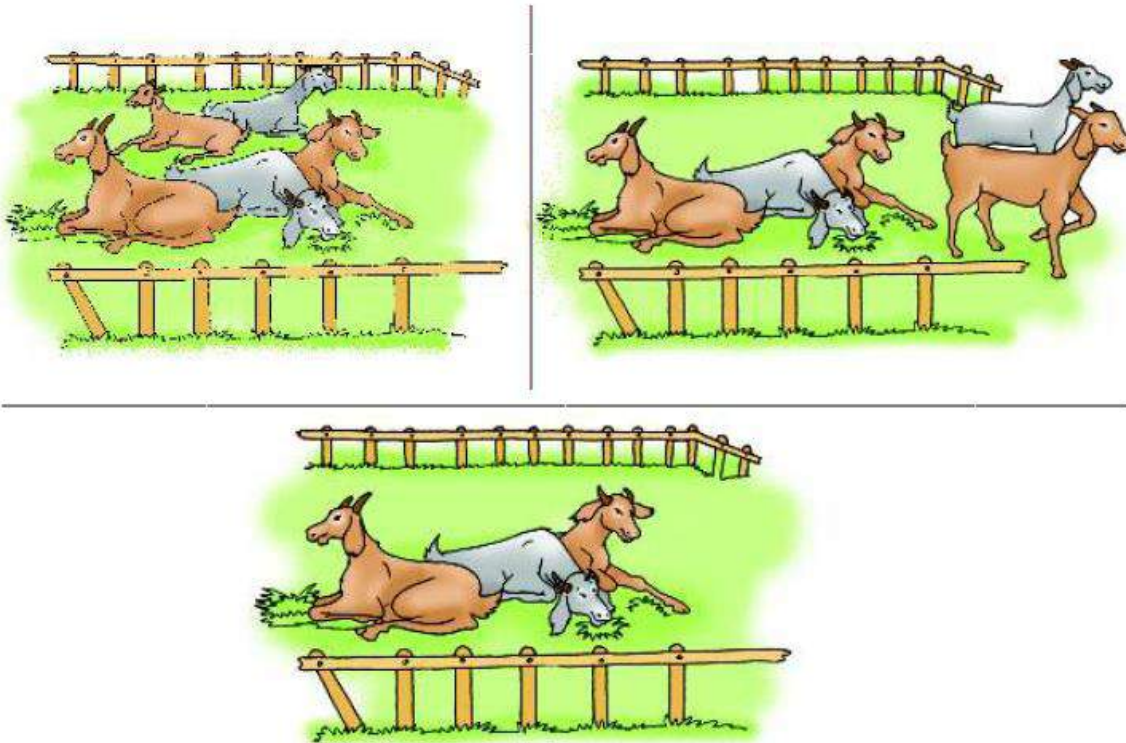


**Question 6:**  
Which is the bigger number?



**Answer:**  
26 is the bigger number.

**Question 7:**  
Develop a story on the pictures and narrate in the class.





**Answer:**

Billu is a little boy. He is very hard-working. He makes beautiful baskets out of wood splints. He has 5 pet animals in his farm. Two of them left for grazing in another farm. Thus, now the farm has only 3 pet animals left.