

Question: 1

Who won the game? _____

Answer:

The elephant won the game.

Question: 2

Who lost the game? _____

Answer:


The tortoise lost the game.

The winner got bananas from Bunnnoo.

Guess and Tell

Prabha is going to her grandmother, who lives in the next village. She wants to take 15 kg sugar cane, 7 kg apples and 8 kg tomatoes.

She has to cross a river. In the boat she can take 25 kg weight.



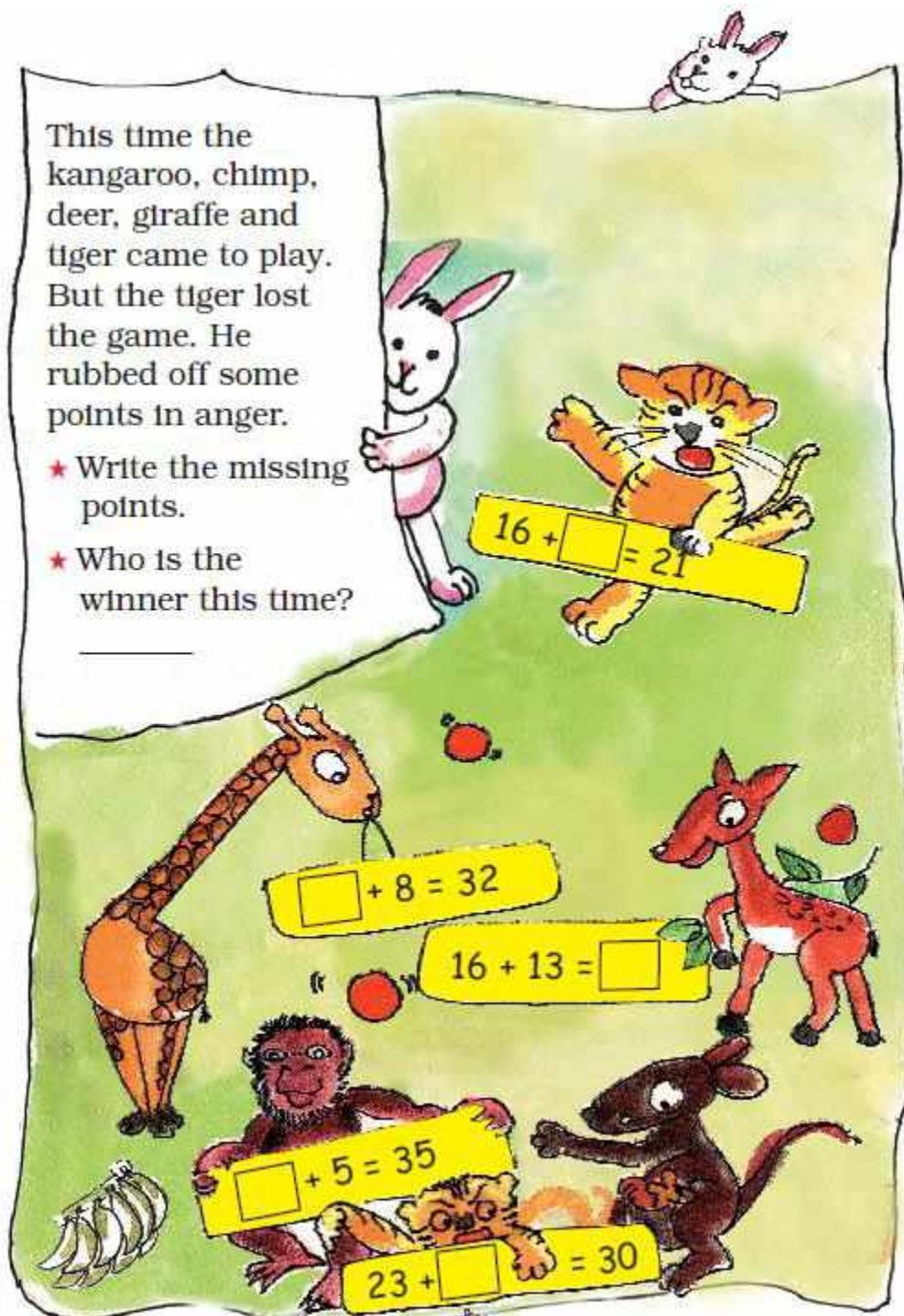
Question: 3

Can she carry all the things?

Answer:

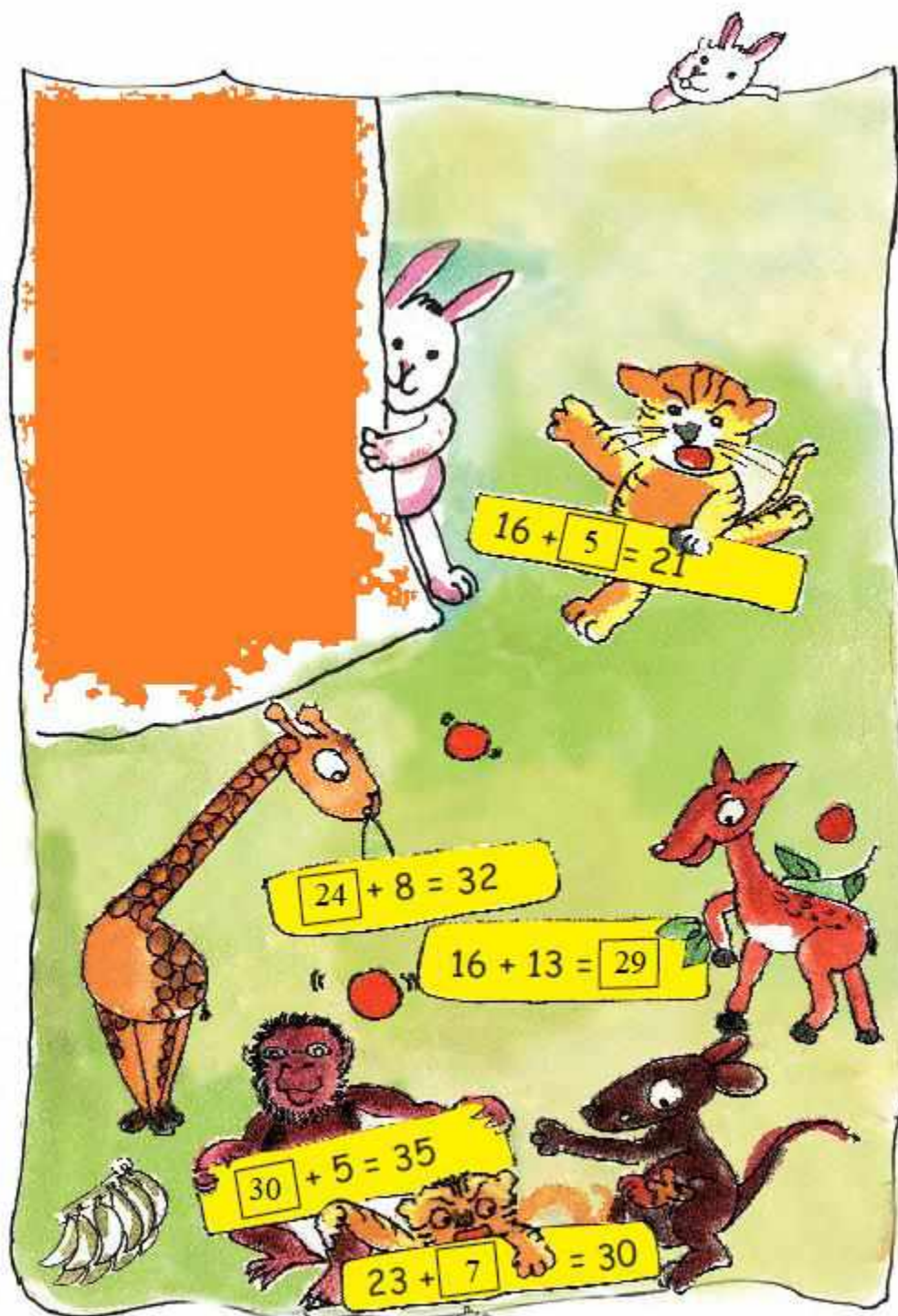
No, she cannot carry all the things together.

Question: 4



Answer:

1. The missing points are given in the figure below:



2. The winner this time is Monkey.

Heads and Tails

Question: 5

Have you seen the two sides of a rupee coin?

Answer:

Yes. The two sides of a rupee coin are shown below.



Question: 6

Which side has 1? Heads / Tails

Answer:

The side which has 1 is Tails.

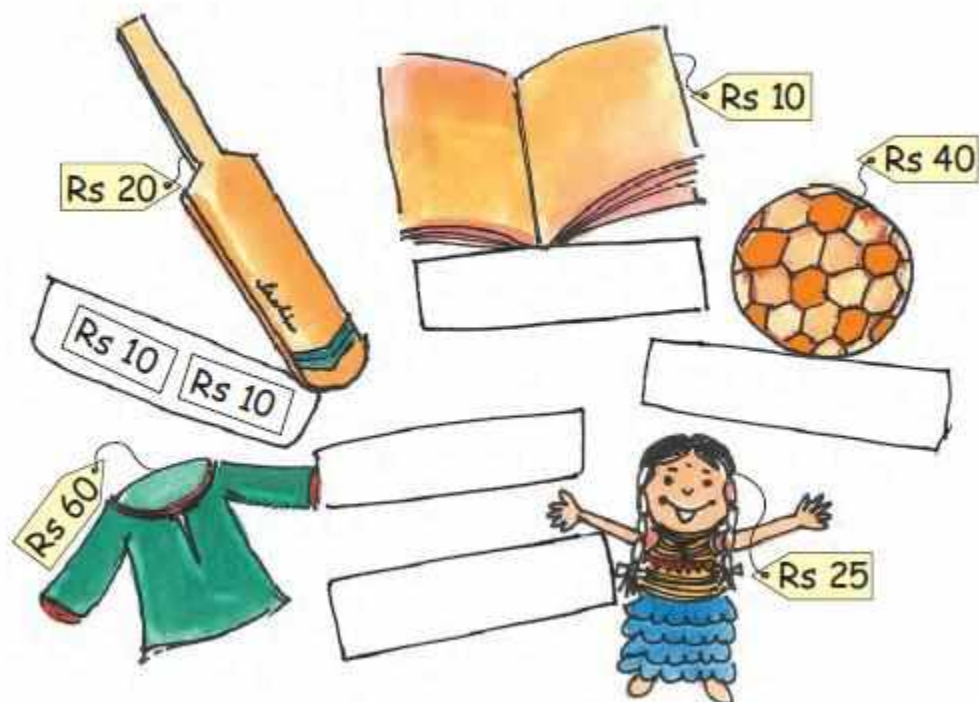
Two at a Time

Chintu and Mintu went shopping. They bought some things. To pay they used notes and coins, but only two at a time.

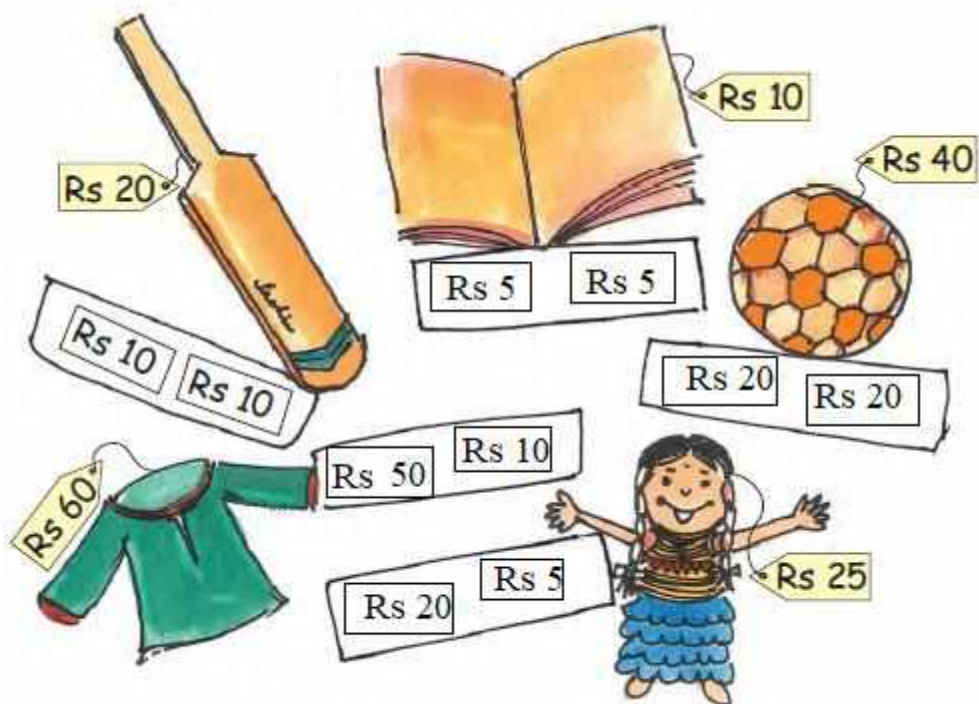


Question: 7

Out of these, which two can they use to buy the things below? They can use the same note or coin more than one time.



Answer:

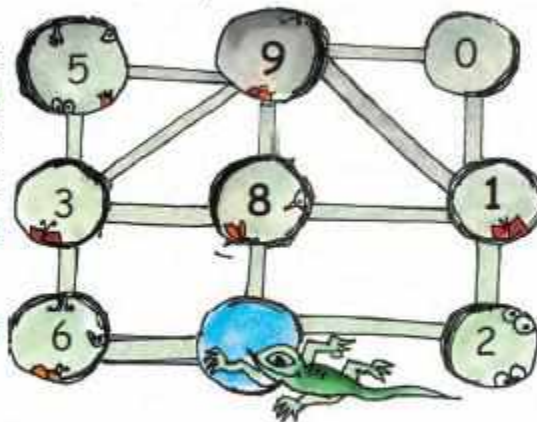


Killer Lizard



A lizard moves from one hole to another. As it moves, it eats insects hidden in the hole. The number of insects in each hole is shown.

The lizard can move only along the lines.



Starting from the blue hole in the picture, the lizard goes to three holes to eat 18 insects.

This is the path the lizard takes —

$$8 + 1 + 9 = 18$$

Question: 8

(a) What path can the lizard take to eat 12 insects?

$$\text{ } + \text{ } + \text{ } = 12$$

Answer:

$$1 + 8 + 3 = 12$$

(b) What path can the lizard take to eat 20 insects?

$$\text{ } + \text{ } + \text{ } = 20$$

Answer:

$$8 + 3 + 9 = 20$$

This time the lizard goes to four holes to eat insects.

(d) What path does the lizard take to eat 18 insects?


$$\text{○} + \text{○} + \text{○} + \text{○} = 18$$

Answer:

$$6 + 3 + 8 + 1 = 18$$

(e) What path does the lizard take for 12 insects?


$$\text{○} + \text{○} + \text{○} + \text{○} = 12$$

Answer:

$$2 + 1 + 0 + 9 = 12$$