








Kinnaree sells  beads in the bazar. She sells loose  beads and  necklaces of 10 beads each.

Razia wants 12 beads. So Kinnaree gives her one  necklace and two  loose beads.













Question: 1

Now you may find how many necklaces and loose beads the other children take.

	<i>Beads</i>	<i>Necklace of 10 beads</i>	<i>Loose beads</i>
Razia	12		
Reema	17		
Aarif	24		
Sonu	35		
Simar	31		

Answer:

	Beads	Necklace of 10 beads	Loose beads
Razia	12		
Reema	17		
Aarif	24		
Sonu	35		
Simar	31		

Question: 2

How many beads are taken by Razia and Reema together?

Answer:



$$\begin{array}{r}
 \begin{array}{|c|c|} \hline \img alt="necklace icon" data-bbox="154 744 184 774" & \img alt="loose bead icon" data-bbox="218 758 228 768" \\ \hline 1 & 2 \\ \hline \end{array} \\
 + \begin{array}{|c|c|} \hline 1 & 7 \\ \hline \end{array} \\
 \hline
 \begin{array}{|c|c|} \hline 2 & 9 \\ \hline \end{array}
 \end{array}$$

Razia and Reema have taken 29 beads together.

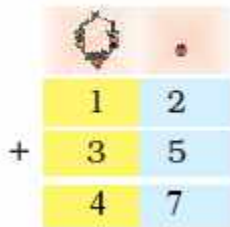
Question: 3

How many beads are taken by Razia and Sonu?



\_\_\_\_\_ beads are taken by Razia and Sonu.

Answer:





47 beads are taken by Razia and Sonu.

Add by writing and also without writing

Question: 4

How many beads do they have together?

A)

		
Reema	1	7
Sonu +	3	5

\_\_\_\_\_ beads

B)

		
Aarif	2	4
Razia +	1	2

\_\_\_\_\_ beads

Answer:

A)

		
Reema	1	7
Sonu +	3	5
	5	2

\_\_\_\_\_ beads

B)

		
Aarif	2	4
Razia +	1	2
	3	6

\_\_\_\_\_ beads

How Many More Beads?

Question: 5

How many more beads do they have in the following?

A)

		
Sonu	3	5
Aarif -	2	4

Sonu has \_\_\_\_\_ more beads than Aarif.



B)

		
Aarif	2	4
Razia -	1	2

Aarif has \_\_\_\_\_ more beads than Razia.



Answer:

A)

		
Sonu	3	5
Aarif	2	4
	1	1

Sonu has 11 more beads than Aarif.





B)


		
Aarif	2	4
Razia	1	2
	1	2

Aarif has 12 more beads than Razia.

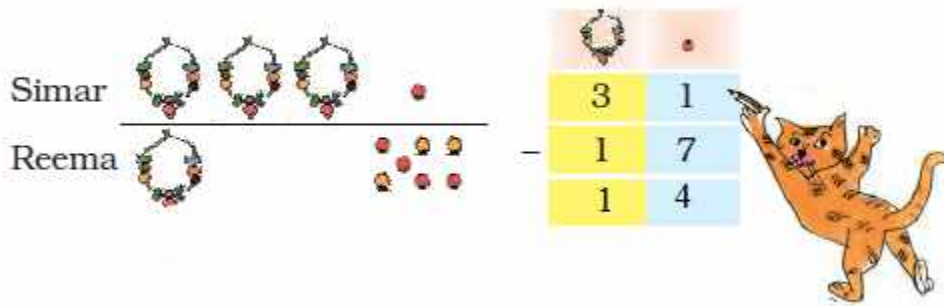
Question: 6

C) How many more beads does Simar have than Reema?

Simar		
Reema		
	3	1
	1	7



Answer:



Simar has 14 more beads than Reema.

**Practice Time:** Also, do it in your mind

**Question: 7**

Tanisha has 17 pencils. Siya has 25 pencils. How many pencils are there in all?

Tanisha		1	7
Siya	+	2	5

**Answer:**

Tanisha		1	7
Siya	+	2	5
		4	2

There are 42 pencils in all.

**Question: 8**

In Muneeza's class, there are 13 English storybooks and 22 Hindi storybooks. How many storybooks are there in all?

$$\begin{array}{r} 13 \\ + 22 \\ \hline \end{array}$$

Answer:

$$\begin{array}{r} 13 \\ + 22 \\ \hline 35 \end{array}$$

There are 35 storybooks in all.

Question: 9

Sakshi had 23 fruits. She ate 15 fruits. How many fruits are left?

$$\begin{array}{r} 23 \\ - 15 \\ \hline \end{array}$$

Answer:

$$\begin{array}{r} 23 \\ - 15 \\ \hline 08 \end{array}$$

8 fruits are left.

Question: 10

Daljeet has 35 marbles. Arvind has 25 marbles. How many marbles do they have in all?

	3	5
+	2	5

Answer:

	3	5
+	2	5
	6	0

There are 60 marbles.

Question: 11

Nisha has 32 bangles. Sukhi has 16 bangles. How many more bangles does Nisha have?

	3	2
–	1	6

Answer:

	3	2
–	1	6
	1	6


Nisha has 16 bangles.



Venkatesha's Canteen

Question: 12

**Help Venkatesha to make the bills.**




	Rupees
Dosa	23
Uthappam	28
<b>Total</b>	

	Rupees
Idli	15
Coffee	8
<b>Total</b>	

	Rupees
Dahi Vada	25
Chilli Rice	18
<b>Total</b>	

	Rupees
Soup	27
Noodles	15
<b>Total</b>	

Answer:




	Rupees
Dosa	23
Uthappam	28
<b>Total</b>	<b>51</b>

	Rupees
Idli	15
Coffee	8
<b>Total</b>	<b>23</b>

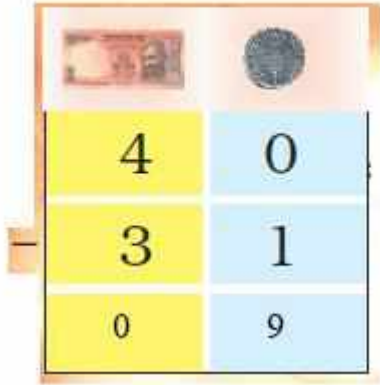
	Rupees
Dahi Vada	25
Chilli Rice	18
<b>Total</b>	<b>43</b>

	Rupees
Soup	27
Noodles	15
<b>Total</b>	<b>42</b>

Question: 13



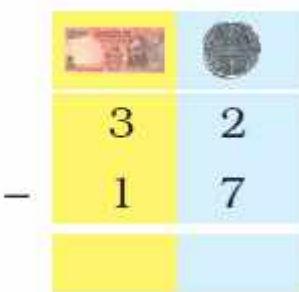
Answer:



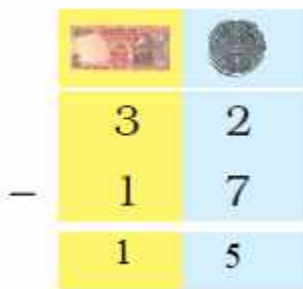
I will get back 9 rupees.

**Question: 14**

Shekhar has 32 rupees. He bought a ball for 17 rupees. How much money is left with him?





**Answer:**





15 rupees are left with Shekhar.

**Question: 15**

Soni bought biscuits for 24 rupees and a packet of chips for 16 rupees. How much money will she pay?

		
	2	4
+	1	6



Answer:

		
	2	4
+	1	6
	4	0



Soni pays 40 rupees.

Question: 16

Fantoosh had 64 rupees. He spent 39 rupees at the fair. How much money is left with him?

		
	6	4
-	3	9

Answer:

		
	6	4
-	3	9
	2	5

25 rupees are left with Fantoosh.