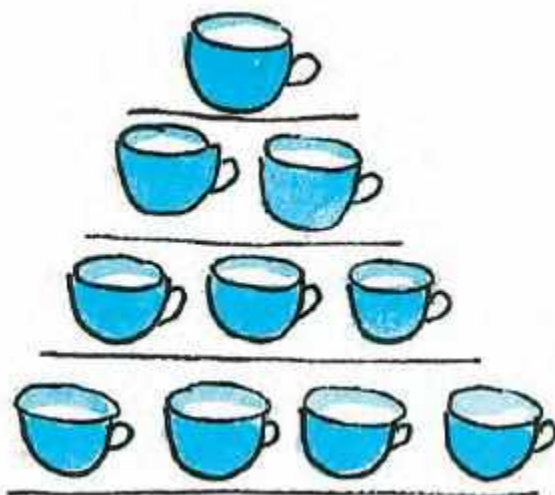


Question: 1

Can you guess how many cups?



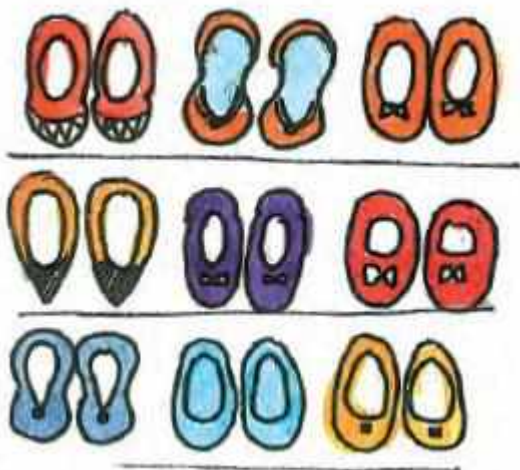
Answer:

$$1 + 2 + 3 + 4 = 10 \text{ cups}$$

There are 10 cups

Question: 2

Can you guess how many pairs of shoes?



Answer:

There are 3 pairs in each line

$$3 + 3 + 3 = 9 \text{ pairs}$$

There are 9 pairs of shoes

Question: 3

Look at how different things are kept in groups. Try to guess the total number without counting each thing.

(a)



Answer:

There are 12 glasses

(b)



Answer:

There are 25 bangles.

(c)

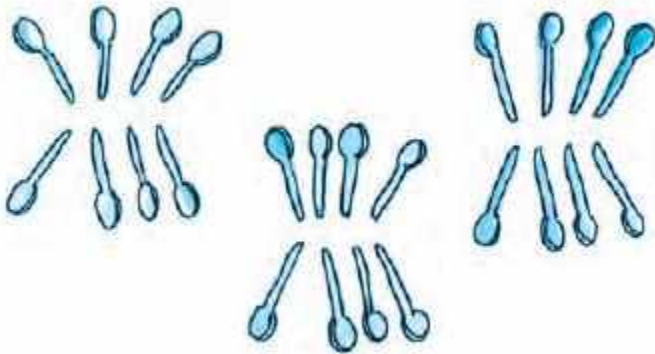


Answer:

(c) There are 12 pairs of earrings.

Question: 4

There are three groups of spoons



(a) How many in each group?

Answer:

There are 8 spoons in each group

(b) Guess the total number of spoons

Answer:

There are 24 spoons

Question: 5

Ring the correct answer

(a) Number of teeth in your mouth



More than 40

Less than 40

Answer:

Less than 40

(b) Number of seeds in an orange



More than 50

Less than 50

Answer:

Less than 50

(c) Number of matchsticks in a matchbox



More than 30

Less than 30

Answer:

More than 30

(d) Number of pencils in your class



More than 45

Less than 45

Answer:

Less than 45

(e) Number of spokes in one cycle wheel



More than 20

Less than 20


Answer:

(e) Less than 20

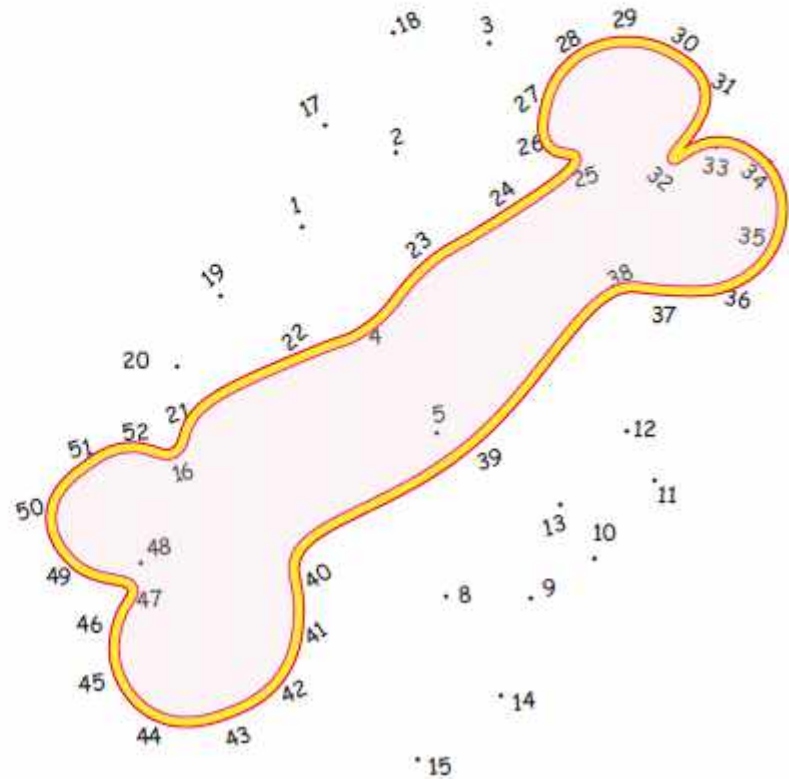
Join the dots

Question: 6

Jojo doggy is hungry. Join the dots in order, from 21 to 52, and find out what is hidden for him to eat



Answer:



Bone


Question: 7

Bhurru has torn some pages of this book



Write the page numbers in the correct order

Answer:



Question: 8

Puzzling tail



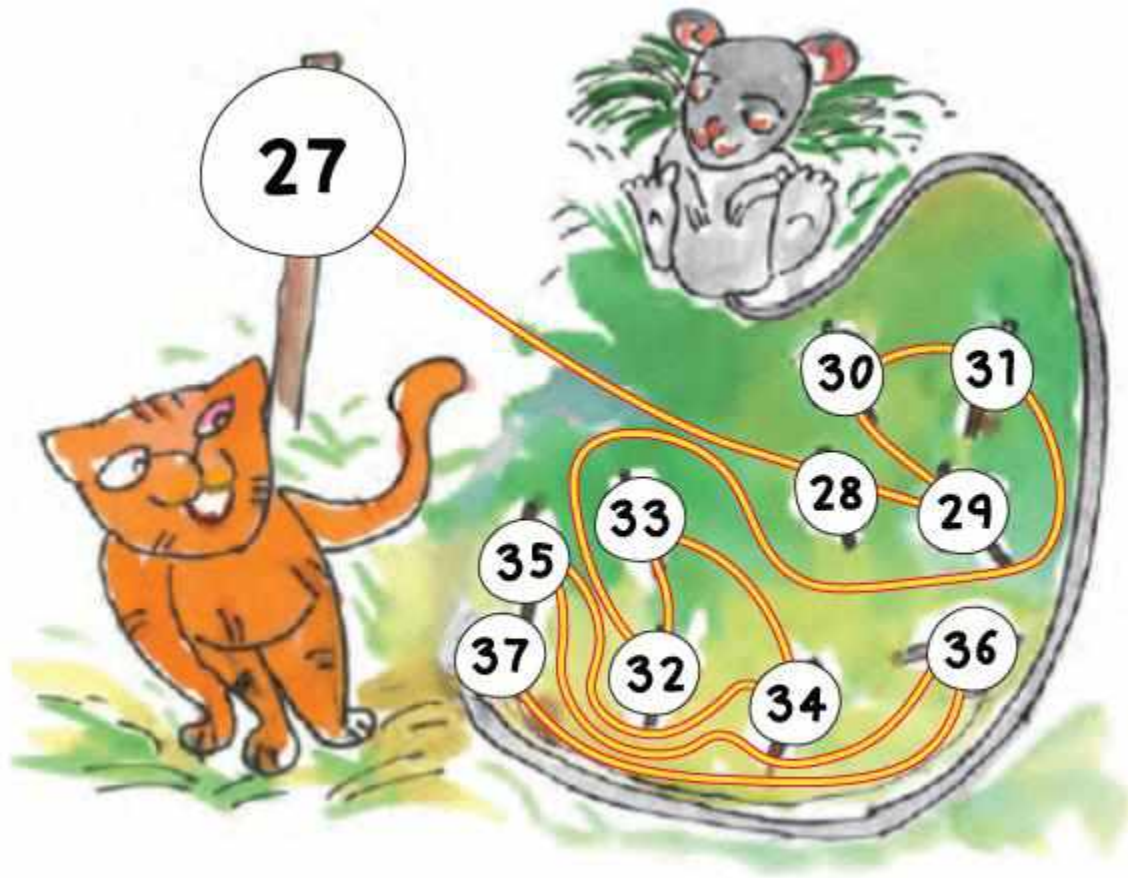
Chipku rat has a long tail.

When he was sleeping, a naughty cat thought of tying his tail to the poles.

She started from the pole with the biggest number. She moved on to the smaller numbers in order.


Help her in tying. But the tail should not cross itself anywhere.

Answer:



Question: 9

Look at the picture and write



(a) How many are pulling the carrot out?

Answer:

6

(b) Who was the first one to pull it?

Answer:

Old man

(c) The cat is _____ in the line

Answer:

Fifth

(d) Who was the fourth one to pull the carrot? _____

Answer:

The dog

(e) How many were pulling the carrot before the cat came to help them?

Answer:

4

Question: 10

Seema's century

Seema has made a design with different bindis.





(a) Look at the groups and guess the total number of bindis.

Answer:

80 bindis

(b) Draw more groups to complete 100 bindis. How many more bindis did you have to draw?

Answer:

20 bindis

