

Q 13.1 (a) Lithium has two stable isotopes ${}^6_3\text{Li}$ and ${}^7_3\text{Li}$, which have abundances of 7.5% and 92.5%, and masses 6.01512 u and 7.01600 u, respectively. Find the atomic mass of lithium.

(b) Boron has two stable isotopes, ${}^{10}_5\text{B}$ and ${}^{11}_5\text{B}$. Their respective masses are 10.01294 u and 11.00931 u, and the atomic mass of boron is 10.811 u. Find the abundances of ${}^{10}_5\text{B}$ and ${}^{11}_5\text{B}$.

A1 :

(a) Mass of ${}^6_3\text{Li}$ lithium isotope, $m_1 = 6.01512$ u

Mass of ${}^7_3\text{Li}$ lithium isotope, $m_2 = 7.01600$ u

Abundance of ${}^6_3\text{Li}$, $n_1 = 7.5\%$

Abundance of ${}^7_3\text{Li}$, $n_2 = 92.5\%$

The atomic mass of the lithium atom is:

$$m = \frac{m_1 n_1 + m_2 n_2}{n_1 + n_2}$$

$$m = \frac{6.01512 \times 7.5 + 7.01600 \times 92.5}{7.5 + 92.5}$$

$$= 6.940934 \text{ u}$$

Therefore, The atomic mass of the lithium atom is 6.940934 u.

(b) Mass of boron isotope ${}^{10}_5\text{B}$ $m_1 = 10.01294$ u

Mass of boron isotope ${}^{11}_5\text{B}$ $m_2 = 11.00931$ u

Abundance of ${}^{10}_5\text{B}$, $n_1 = x\%$

Abundance of ${}^{11}_5\text{B}$, $n_2 = (100 - x)\%$

The atomic mass of boron, $m = 10.811$ u

The atomic mass of the boron atom is:

$$m = \frac{m_1 n_1 + m_2 n_2}{n_1 + n_2}$$

$$10.811 = \frac{10.01294 \times x + 11.00931 \times (100 - x)}{x + 100 - x}$$

$$1081.11 = 10.01294x + 1100.931 - 11.00931x$$

$$x = 19.821/0.99637 = 19.89 \%$$

$$\text{And } 100 - x = 80.11\%$$

Hence, the abundance of ${}^{10}_5\text{B}$ is 19.89% and that of ${}^{11}_5\text{B}$ is 80.11%.

Q 13.2: The three stable isotopes of neon: ${}^{20}_{10}\text{Ne}$, ${}^{21}_{10}\text{Ne}$ and ${}^{22}_{10}\text{Ne}$ have abundances of 90.51%, 0.27% and 9.22%, respectively. The atomic masses of the three isotopes are 19.99 u, 20.99 u and 21.99 u, respectively. Obtain the average atomic mass of neon.

Answer

Atomic mass of ${}^{20}_{10}\text{Ne}$, $m_1 = 19.99 \text{ u}$

Abundance of ${}^{20}_{10}\text{Ne}$, $n_1 = 90.51\%$

Atomic mass of ${}^{21}_{10}\text{Ne}$, $m_2 = 20.99 \text{ u}$

Abundance of ${}^{21}_{10}\text{Ne}$, $n_2 = 0.27\%$

Atomic mass of ${}^{22}_{10}\text{Ne}$, $m_3 = 21.99 \text{ u}$

Abundance of ${}^{22}_{10}\text{Ne}$, $n_3 = 9.22\%$

The average atomic mass of neon:

$$m = \frac{m_1 n_1 + m_2 n_2 + m_3 n_3}{n_1 + n_2 + n_3}$$

=

$$\frac{19.99 \times 90.51 + 20.99 \times 0.27 + 21.99 \times 9.22}{90.51 + 0.27 + 9.22}$$

$$= 20.1771 \text{ u}$$

Therefore, the average atomic mass of neon is 20.1771 u.

Q 13.3: Obtain the binding energy in MeV of a nitrogen nucleus ${}^7_{14}\text{N}$, given $m({}^7_{14}\text{N}) = 14.00307 \text{ u}$.

Ans:

Atomic mass of nitrogen ${}^7_{14}\text{N}$, $m = 14.00307 \text{ u}$

A nucleus of ${}^7_{14}\text{N}$ nitrogen contains 7 neutrons and 7 protons.

$\Delta m = 7m_{\text{H}} + 7m_{\text{n}} - m$ is the mass defect of the nucleus

Where,

Mass of a proton, $m_{\text{H}} = 1.007825 \text{ u}$

Mass of a neutron, $m_{\text{n}} = 1.008665 \text{ u}$

$$\Delta m = 7 \times 1.007825 + 7 \times 1.008665 - 14.00307$$

$$= 7.054775 + 7.06055 - 14.00307$$

$$= 0.11236 \text{ u}$$

But, $1 \text{ u} = 931.5 \text{ MeV}/c^2$

$$\Delta m = 0.11236 \times 931.5 \text{ MeV}/c^2$$

$E_{\text{b}} = \Delta mc^2$ is the binding energy of the nucleus

Where, c = Speed of light

$$E_{\text{b}} = 0.11236 \times 931.5 \left(\frac{\text{MeV}}{c^2} \right) \times c^2$$

$$= 104.66334 \text{ MeV}$$

Therefore, 104.66334 MeV is the binding energy of the nitrogen nucleus.

Q 13.4: Obtain the binding energy of the nuclei ${}^{56}_{26}\text{Fe}$ and ${}^{209}_{83}\text{Bi}$ in units of MeV from the following data:

(a) $m({}^{56}_{26}\text{Fe}) = 55.934939 \text{ u}$

(b) $m({}^{209}_{83}\text{Bi}) = 208.980388 \text{ u}$

Ans:

(a) Atomic mass of ${}^{56}_{26}\text{Fe}$, $m_i = 55.934939 \text{ u}$

${}^{56}_{26}\text{Fe}$ nucleus has 26 protons and $(56 - 26) = 30$ neutrons
Hence, the mass defect of the nucleus, $\Delta m = 26 \times m_H + 30 \times m_n - m_i$

Where,

Mass of a proton, $m_H = 1.007825 \text{ u}$

Mass of a neutron, $m_n = 1.008665 \text{ u}$

$$\Delta m = 26 \times 1.007825 + 30 \times 1.008665 - 55.934939$$

$$= 26.20345 + 30.25995 - 55.934939$$

$$= 0.528461 \text{ u}$$

But, $1 \text{ u} = 931.5 \text{ MeV}/c^2$

$$\Delta m = 0.528461 \times 931.5 \text{ MeV}/c^2$$

$E_{b_1} = \Delta mc^2$ is the binding energy of the nucleus.
Where, c = Speed of light

$$E_{b_1} = 0.528461 \times 931.5 \left(\frac{\text{MeV}}{c^2} \right) \times c^2 = 492.26 \text{ MeV}$$

Therefore, the average binding energy per nucleon =

$$\frac{492.26}{56} = 8.79 \text{ MeV}$$

(b) Atomic mass of ${}_{83}^{209}\text{Bi}$, $m_2 = 208.980388 \text{ u}$

${}_{83}^{209}\text{Bi}$ nucleus has 83 protons and $(209 - 83)$ 126 neutrons.
The mass defect of the nucleus is given as:

$$\Delta m' = 83 \times m_H + 126 \times m_n - m_2$$

Where,

Mass of a proton, $m_H = 1.007825 \text{ u}$

Mass of a neutron, $m_n = 1.008665 \text{ u}$

$$\Delta m' = 83 \times 1.007825 + 126 \times 1.008665 - 208.980388$$

$$= 83.649475 + 127.091790 - 208.980388$$

$$= 1.760877 \text{ u}$$

But, $1 \text{ u} = 931.5 \text{ MeV}/c^2$

$$\Delta m' = 1.760877 \times 931.5 \text{ MeV}/c^2$$

$E_{b2} = \Delta m' c^2$ is the binding energy of the nucleus.

$$= 1.760877 \times 931.5$$

$$\left(\frac{\text{MeV}}{c^2} \right) \times c^2$$

$$= 1640.26 \text{ MeV}$$

Therefore, the average binding energy per nucleon = $1640.26/209 = 7.848 \text{ MeV}$.

Q 13.5: A given coin has a mass of 3.0 g. Calculate the nuclear energy that would be required to separate all the

neutrons and protons from each other. For simplicity, assume that the coin is entirely made of ${}_{29}^{63}\text{Cu}$ with mass = 62.92960 u.

Ans :

Mass of a copper coin, $m' = 3 \text{ g}$

Atomic mass of ${}^{63}_{29}\text{Cu}$ atom, $m = 62.92960 \text{ u}$

The total number of ${}^{63}_{29}\text{Cu}$ atoms in the coin,

$$N = \frac{N_A \times m'}{\text{Mass number}}$$

Where,

N_A = Avogadro's number = 6.023×10^{23} atoms /g

Mass number = 63 g

$$N = \frac{6.023 \times 10^{23} \times 3}{63}$$

$$= 2.868 \times 10^{22} \text{ atoms}$$

${}^{63}_{29}\text{Cu}$ nucleus has 29 protons and $(63 - 29)$ 34 neutrons
Mass defect of this nucleus, $\Delta m' = 29 \times m_H + 34 \times m_n - m$

Where,

Mass of a proton, $m_H = 1.007825 \text{ u}$

Mass of a neutron, $m_n = 1.008665 \text{ u}$

$$\Delta m' = 29 \times 1.007825 + 34 \times 1.008665 - 62.9296$$

$$= 0.591935 \text{ u}$$

$$\text{Mass defect of all the atoms present in the coin, } \Delta m = 0.591935 \times 2.868 \times 10^{22}$$

$$= 1.69766958 \times 10^{22} \text{ u}$$

But, $1 \text{ u} = 931.5 \text{ MeV}/c^2$

$$\Delta m = 1.69766958 \times 10^{22} \times 931.5 \text{ MeV}/c^2$$

$E_b = \Delta mc^2$ is the binding energy of the nuclei of the coin

$$= 1.69766958 \times 10^{22} \times 931.5 \text{ MeV}/c^2 \times c^2$$

$$= 1.581 \times 10^{25} \text{ MeV}$$

But $1 \text{ MeV} = 1.6 \times 10^{-13} \text{ J}$

$$E_b = 1.581 \times 10^{25} \times 1.6 \times 10^{-13}$$

$$= 2.5296 \times 10^{12} \text{ J}$$

Therefore, the energy required to separate all the neutrons and protons from the given coin is $2.5296 \times 10^{12} \text{ J}$.

Q 13.6: Write nuclear reaction equations for the following:

(i) α -decay of ${}^{226}_{88}\text{Ra}$

(ii) α -decay of ${}^{242}_{94}\text{Pu}$

(iii) β^- -decay of ${}^{32}_{15}\text{P}$

(iv) β^- -decay of ${}^{210}_{83}\text{Bi}$

(v) β^+ -decay of ${}^{11}_6\text{C}$

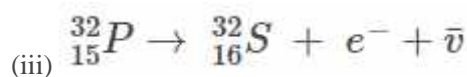
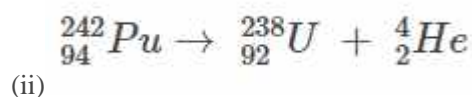
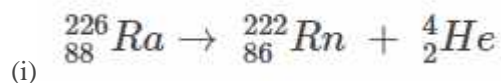
(vi) β^+ -decay of ${}^{97}_{43}\text{Tc}$

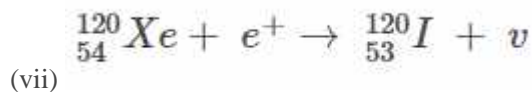
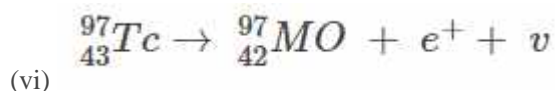
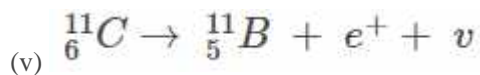
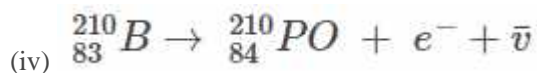
(vii) Electron capture of ${}^{120}_{54}\text{Xe}$

Ans:

In helium, α is a nucleus ${}^4_2\text{He}$, and β is an electron (e^- for β^- and e^+ for β^+). 2 protons and 4 neutrons are lost in every α decay. Whereas 1 proton and a neutrino are emitted from the nucleus in every β^+ decay. In every β^- decay, there is a gain of 1 proton, and an anti-neutrino is emitted from the nucleus.

For the given cases, the various nuclear reactions can be written as follows:





Q 13.7: A radioactive isotope has a half-life of T years. How long will it take the activity to reduce to (a) 3.125% and (b) 1% of its original value?

Ans:

The half-life of the radioactive isotope = T years

N_0 is the actual amount of radioactive isotope.

(a) After decay, the amount of the radioactive isotope = N

It is given that only 3.125% of N_0 remains after decay. Hence, we can write:

$$\frac{N}{N_0} = 3.125\% = \frac{3.125}{100} = \frac{1}{32}$$

But,

$$\frac{N}{N_0} = e^{-\lambda t}$$

Where, λ = Decay constant

t = Time

$$\begin{aligned} e^{-\lambda t} &= \frac{1}{32} \\ -\lambda t &= \ln 1 - \ln 32 \\ -\lambda t &= 0 - 3.4657 \end{aligned}$$

Since,

$$-\lambda = \frac{0.693}{T}$$

$t =$

$$\frac{3.466}{\frac{0.693}{T}} \approx 5T \text{ years}$$

Hence, the isotope will take about 5T years to reduce to 3.125% of its original value.

(b) After decay, the amount of the radioactive isotope = N

It is given that only 1% of N_0 remains after decay. Hence, we can write:

$$\frac{N}{N_0} = 1\% = \frac{1}{100}$$

$$\frac{N}{N_0} = e^{-\lambda t}$$

$$e^{-\lambda t} = \frac{1}{100}$$

$$-\lambda t = \ln 1 - \ln 100$$

$$e^{-\lambda t} =$$

$$0 - 4.6052$$

$$t = 4.6052 /$$

$$\lambda$$

Since, $\lambda = 0.693/T$

$$t = \frac{4.6052}{\frac{0.693}{T}}$$

= 6.645 T years

Hence, the isotope will take about 6.645T years to reduce to 1% of its original value.

Q 13.8: The normal activity of living carbon-containing matter is found to be about 15 decays per minute for

every gram of carbon. This activity arises from the small proportion of radioactive ${}^{14}_6\text{C}$ present with the

stable carbon isotope ${}^{12}_6\text{C}$. When the organism is dead, its interaction with the atmosphere (which maintains the above equilibrium activity) ceases, and its activity begins to drop. From the known half-life (5730 years) of

${}^{14}_6\text{C}$ and the measured activity, the age of the specimen can be approximately estimated. This is the principle

of ${}^{14}_6\text{C}$ dating used in archaeology. Suppose a specimen from Mohenjodaro gives an activity of 9 decays per minute per gram of carbon. Estimate the approximate age of the Indus-Valley civilisation.

Ans :

The decay rate of living carbon-containing matter, $R = 15$ decay/min

Let N be the number of radioactive atoms present in a normal carbon-containing matter.

Half-life of ${}^{14}_6\text{C}$, $T_{\frac{1}{2}} = 5730$ years

The decay rate of the specimen obtained from the Mohenjo-Daro site:

$$R' = 9 \text{ decays/min}$$

Let N' be the number of radioactive atoms present in the specimen during the Mohenjo-Daro period.

Therefore, the relation between the decay constant, λ and time, t , is:

$$\begin{aligned}\frac{N}{N'} &= \frac{R}{R'} = e^{-\lambda t} \\ e^{-\lambda t} &= \frac{9}{15} = \frac{3}{5} \\ -\lambda t &= \log_e \frac{3}{5} = -0.5108 \\ t &= \frac{0.5108}{\lambda}\end{aligned}$$

But

$$\begin{aligned}\lambda &= \frac{0.693}{T_{\frac{1}{2}}} = \frac{0.693}{5730} \\ t &= \frac{0.5108}{\frac{0.693}{5730}} = 4223.5 \text{ years}\end{aligned}$$

So, the approximate age of the Indus-Valley civilisation is 4223.5 years.

Q 13.9: Obtain the amount of ${}^{60}_{27}\text{Co}$ necessary to provide a radioactive source of 8.0 mCi strength. The half-life of ${}^{60}_{27}\text{Co}$ is 5.3 years.

Ans:

The strength of the radioactive source is given as:

$$\frac{dN}{dt} = 8.0 \text{ mCi}$$

$$= 8 \times 10^{-3} \times 3.7 \times 10^{10}$$

$$= 29.6 \times 10^7 \text{ decay/s}$$

Where,

N = Required number of atoms

Half-life of ${}^{60}_{27}\text{Co}$ $T_{1/2} = 5.3$ years

$$= 5.3 \times 365 \times 24 \times 60 \times 60$$

$$= 1.67 \times 10^8 \text{ s}$$

The rate of decay for decay constant λ is:

$$\frac{dN}{dt} = \lambda N$$

Where,

$$\lambda = \frac{0.693}{T_{1/2}} = \frac{0.693}{1.67 \times 10^8} \text{ s}^{-1}$$

$$N = \frac{1}{\lambda} \frac{dN}{dt}$$

$$= \frac{29.6 \times 10^7}{\frac{0.693}{1.67 \times 10^8}}$$

$$= 7.133 \times 10^{16} \text{ atoms}$$

For

${}^{60}_{27}\text{Co}$:

Mass of 6.023×10^{23} (Avogadro's number) atoms = 60 g

Mass of 7.133×10^{16} atoms =

$$= \frac{60 \times 7.133 \times 10^{16}}{6.023 \times 10^{23}}$$

$$= 7.106 \times 10^{-6} \text{ g}$$

Hence, the amount of ${}^{60}_{27}\text{Co}$ necessary for the purpose is $7.106 \times 10^{-6} \text{ g}$.

Q 13.10: The half-life of ${}^{90}_{38}\text{Sr}$ is 28 years. What is the disintegration rate of 15 mg of this isotope?

Ans:

Half-life of ${}^{90}_{38}\text{Sr}$, $t_{\frac{1}{2}} = 28$ years

$$= 28 \times 365 \times 24 \times 60 \times 60$$

$$= 8.83 \times 10^8 \text{ s}$$

Mass of the isotope, $m = 15$ mg

90 g of ${}^{90}_{38}\text{Sr}$ atom contains 6.023×10^{23} (Avogadro's number) atoms.

Therefore, 15 mg of ${}^{90}_{38}\text{Sr}$ contains atoms:

$$= \frac{6.023 \times 10^{23} \times 15 \times 10^{-3}}{90}$$

i.e., 1.0038×10^{20} number of atoms

Rate of disintegration,

$$\frac{dN}{dt} = \lambda N$$

Where,

$$\begin{aligned} \lambda &= \text{decay constant} = \frac{0.693}{8.83 \times 10^8} \text{ s}^{-1} \\ \frac{dN}{dt} &= \frac{0.693 \times 1.0038 \times 10^{20}}{8.83 \times 10^8} \end{aligned}$$

$$= 7.878 \times 10^{10} \text{ atoms/s}$$

Hence, the disintegration rate of 15 mg of ${}^{90}_{38}\text{Sr}$ is 7.878×10^{10} atoms/s.

Q 13.11: Obtain approximately the ratio of the nuclear radii of the gold isotope ${}^{197}_{79}\text{Au}$ and the silver isotope ${}^{107}_{47}\text{Ag}$.

Ans:

Nuclear radius of the gold isotope

$${}_{79}^{197}\text{Au} = R_{\text{Au}}$$

Nuclear radius of the silver isotope

$${}_{47}^{107}\text{Ag} = R_{\text{Ag}}$$

The mass number of gold, $A_{\text{Au}} = 197$

The mass number of silver, $A_{\text{Ag}} = 107$

Following is the relationship between the radii of the two nuclei and their mass number:

$$\begin{aligned}\frac{R_{\text{Au}}}{R_{\text{Ag}}} &= \left(\frac{R_{\text{Au}}}{R_{\text{Ag}}} \right)^{\frac{1}{3}} \\ &= \left(\frac{197}{107} \right)^{\frac{1}{3}}\end{aligned}$$

$$= 1.2256$$

Hence, 1.23 is the ratio of the nuclear radii of the gold and silver isotopes.

Q 13.12: Find the Q-value and the kinetic energy of the emitted α -particle in the α -decay of

(a) ${}_{88}^{226}\text{Ra}$

(b) ${}_{86}^{220}\text{Rn}$

Given,

$$m({}_{88}^{226}\text{Ra}) = 226.02540 \text{ u},$$

$$m({}_{86}^{222}\text{Rn}) = 222.01750 \text{ u},$$

$$m({}_{86}^{220}\text{Rn}) = 220.01137 \text{ u},$$

$$m({}_{84}^{216}\text{Po}) = 216.00189 \text{ u}.$$

Answer

(a) Alpha particle decay of ${}_{88}^{226}\text{Ra}$ emits a helium nucleus. As a result, its mass number reduces to 222 ($226 - 4$), and its atomic number reduces to 86 ($88 - 2$). This is shown in the following nuclear reaction:



Q-value of emitted α -particle = (Sum of initial mass – Sum of final mass) c^2

Where, c = Speed of light

It is given that:

$$m({}_{88}^{226}\text{Ra}) = 226.02540 \text{ u}$$

$$m({}_{86}^{222}\text{Rn}) = 222.01750 \text{ u}$$

$$m({}_2^4\text{He}) = 4.002603 \text{ u}$$

$$\text{Q-value} = [226.02540 - (222.01750 + 4.002603)] \text{ u } c^2$$

$$= 0.005297 \text{ u } c^2$$

$$\text{But, } 1 \text{ u} = 931.5 \text{ MeV}/c^2$$

$$Q = 0.005297 \times 931.5 \approx 4.94 \text{ MeV}$$

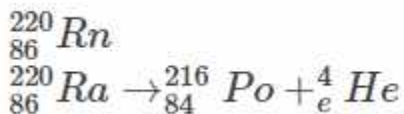
Kinetic energy of the α -particle =

$$\left(\frac{\text{Mass number after decay}}{\text{Mass number before decay}} \right) \times Q$$

$$= 222 \times 4.94$$

$$= 4.85 \text{ MeV.}$$

(b) Alpha particle decay of



It is given that:

$$\text{Mass of } {}_{86}^{220}\text{Rn} = 220.01137 \text{ u}$$

$$\text{Mass of } {}_{84}^{216}\text{Po} = 216.00189 \text{ u}$$

$$\text{Q-value} = [220.01137 - (216.00189 + 4.00260)] \times 931.5$$

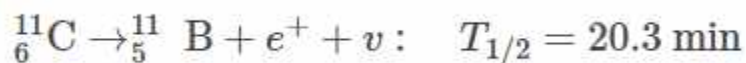
$$\approx 641 \text{ MeV.}$$

Kinetic energy of the α -particle =

$$\left(\frac{220-4}{220}\right) \times 6.41$$

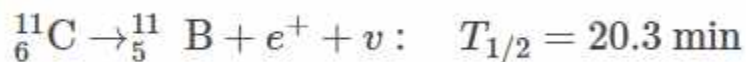
$$= 6.29 \text{ MeV.}$$

Q 13.13: The radionuclide ^{11}C decays according to



The maximum energy of the emitted positron is 0.960 MeV. Given the mass values: $m(^{11}\text{C}) = 11.011434 \text{ u}$ and $m(^{11}\text{B}) = 11.009305 \text{ u}$, calculate Q and compare it with the maximum energy of the positron emitted.

Ans:



Mass defect in the reaction is $\Delta m = m(^{11}\text{C}) - m(^{11}\text{B}) - m_e$

This is given in terms of atomic masses. To express in terms of nuclear mass, we should subtract $6m_e$ from carbon, and $5m_e$ from boron.

$$\Delta m = m(^{11}\text{C}) - 6m_e - (m(^{11}\text{B}) - 5m_e) - m_e$$

$$= m(^{11}\text{C}) - 6m_e - m(^{11}\text{B}) + 5m_e - m_e$$

$$= m(^{11}\text{C}) - m(^{11}\text{B}) - 2m_e$$

$$\Delta m = [11.011434 - 11.009305 - 2 \times 0.000548] \text{ u}$$

$$= 0.002129 - 0.001096 = 0.001033$$

$$Q = \Delta m \times 931 \text{ MeV}$$

$$= 0.001033 \times 931$$

$$Q = 0.9617 \text{ MeV}$$

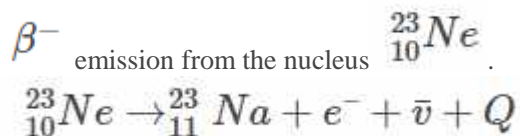
Therefore, the Q -factor of the reaction is equal to the maximum energy of the emitted positron.

Q 13.14: The nucleus $^{23}_{10}\text{Ne}$ decays β^- by emission. Write down the β^- decay equation and determine the

maximum kinetic energy of the electrons emitted. Given that: $m(^{23}_{10}\text{Ne}) = 22.994466 \text{ u}$ $m(^{23}_{11}\text{Na}) = 22.989770 \text{ u}$.

Ans:

In β^- emission, the number of protons increases by 1, and one electron and an antineutrino is emitted from the parent nucleus.



It is given that:

Atomic mass of $m({}^{23}_{10}\text{Ne}) = 22.994466 \text{ u}$

Atomic mass of $m({}^{23}_{11}\text{Na}) = 22.989770 \text{ u}$

Mass of an electron, $m_e = 0.000548 \text{ u}$

The Q-value of the given reaction is given as:

$$Q = [m({}^{23}_{10}\text{Ne}) - [m({}^{23}_{11}\text{Na}) + m_e]]c^2$$

There are 10 electrons and 11 electrons in ${}^{23}_{10}\text{Ne}$ and ${}^{23}_{11}\text{Na}$, respectively. Hence, the mass of the electron is cancelled in the Q-value equation.

$$Q = [22.994466 - 22.989770] c^2$$

$$= (0.004696 c^2) \text{ u}$$

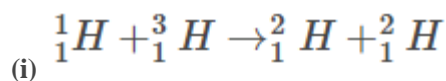
$$\text{But, } 1 \text{ u} = 931.5 \text{ MeV}/c^2$$

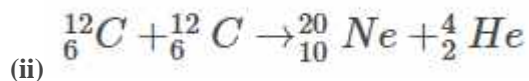
$$Q = 0.004696 \times 931.5 = 4.374 \text{ MeV}$$

The daughter nucleus is too heavy as compared to e^- and $\bar{\nu}$. Hence, it carries negligible energy. The kinetic energy of the antineutrino is nearly zero. Hence, the maximum kinetic energy of the emitted electrons is almost equal to the Q-value, i.e., 4.374 MeV.

Q 13.15: The Q value of a nuclear reaction $A + b \rightarrow C + d$ is defined by

$Q = [m_a + m_b - m_c - m_d]c^2$ where the masses refer to the respective nuclei. Determine from the given data the Q-value of the following reactions and state whether the reactions are exothermic or endothermic.





Atomic masses are given to be

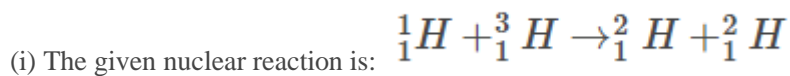
$$m({}_1^2\text{H}) = 2.014102 \text{ u}$$

$$m({}_1^3\text{H}) = 3.016049 \text{ u}$$

$$m({}_6^{12}\text{C}) = 12.000000 \text{ u}$$

$$m({}_{10}^{20}\text{Ne}) = 19.992439 \text{ u}$$

Ans:



It is given that:

Atomic mass $m({}_1^1\text{H}) = 1.007825 \text{ u}$

Atomic mass $m({}_1^3\text{H}) = 3.016049 \text{ u}$

Atomic mass $m({}_1^2\text{H}) = 2.014102 \text{ u}$

According to the question, the Q-value of the reaction can be written as:

$$Q = [$$

$$\begin{aligned} & m({}_1^1\text{H}) \\ & + \\ & m({}_1^3\text{H}) \\ & - 2m({}_1^2\text{H}) \\ &] c^2 \\ = & [1.007825 + 3.016049 - 2 \times 2.014102] c^2 \end{aligned}$$

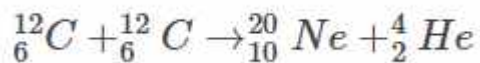
$$Q = (-0.00433 \text{ c}^2) \text{ u}$$

But $1 \text{ u} = 931.5 \text{ MeV}/c^2$

$$Q = -0.00433 \times 931.5 = -4.0334 \text{ MeV}$$

The negative Q-value of the reaction shows that the reaction is endothermic.

(ii) The given nuclear reaction is:



It is given that:

$$m({}^{12}_6\text{C}) = 12.000000 \text{ u}$$

Atomic mass of

$$m({}^{20}_{10}\text{Ne}) = 19.992439 \text{ u}$$

Atomic mass of

$$m({}^4_2\text{He}) = 4.002603 \text{ u}$$

Atomic mass of

The Q-value of this reaction is given as:

$$Q = [$$

$$\begin{aligned} & 2m({}^{12}_6\text{C}) \\ & - \\ & m({}^{20}_{10}\text{Ne}) \\ & - \\ & m({}^4_2\text{He})] c^2 \\ & = [2 \times 12.000000 - 19.992439 - 4.002603] c^2 \\ & = [0.004958 c^2] \text{ u} \\ & = 0.004958 \times 931.5 = 4.618377 \text{ MeV} \end{aligned}$$

Since we obtained a positive Q-value, it can be concluded that the reaction is exothermic.

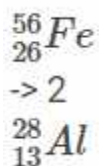
Q 13.16: Suppose, we think of fission of a ${}^{56}_{26}\text{Fe}$ nucleus into two equal fragments, ${}^{28}_{13}\text{Al}$. Is fission energetically possible? Argue by working out the Q of the process. Given,

$$m({}_{26}^{56}\text{Fe}) = 55.93494 \text{ u}$$

$$m({}_{13}^{28}\text{Al}) = 27.98191 \text{ u}$$

Ans:

The fission of ${}_{26}^{56}\text{Fe}$ can be given as :



It is given that:

Atomic mass of $m({}_{26}^{56}\text{Fe}) = 55.93494 \text{ u}$

Atomic mass of $m({}_{13}^{28}\text{Al}) = 27.98191 \text{ u}$

The Q-value of this nuclear reaction is given as:

$$Q = [$$

$$m({}_{26}^{56}\text{Fe}) - 2m({}_{13}^{28}\text{Al})$$

$$] c^2$$

$$= [55.93494 - 2 \times 27.98191] c^2$$

$$= (-0.02888 \text{ u}) c^2$$

But, $1 \text{ u} = 931.5 \text{ MeV}/c^2$

$$Q = -0.02888 \times 931.5 = -26.902 \text{ MeV}$$

Since the Q-value is negative for fission, it is energetically not possible.

Q 13.17: The fission properties of ${}_{94}^{239}\text{Pu}$ are very similar to those of ${}_{92}^{235}\text{U}$. The average energy released per fission is 180 MeV. How much energy is released if all the atoms in 1 kg of pure ${}_{94}^{239}\text{Pu}$ undergo fission?

Ans:

Average energy released per fission of ${}_{94}^{239}\text{Pu}$, $E_{\text{av}} = 180 \text{ MeV}$

Amount of pure ${}_{94}^{239}\text{Pu}$, $m = 1 \text{ kg} = 1000 \text{ g}$

$N_A = \text{Avogadro number} = 6.023 \times 10^{23}$

Mass number of ${}_{94}^{239}\text{Pu} = 239 \text{ g}$

1 mole of ${}_{94}^{239}\text{Pu}$ contains N_A atoms.

Therefore, mg of ${}_{94}^{239}\text{Pu}$ contains $\left(\frac{N_A}{\text{Mass Number}} \times m \right)$ atoms $6.023 \times 10^{23} \times 1000 = 2.52 \times 10^{24}$ atoms

The total energy released during the fission of 1 kg of ${}_{94}^{239}\text{Pu}$ is calculated as:

$$E = E_{\text{av}} \times 2.52 \times 10^{24}$$

$$= 180 \times 2.52 \times 10^{24}$$

$$= 4.536 \times 10^{26} \text{ MeV}$$

Hence, $4.536 \times 10^{26} \text{ MeV}$ is released if all the atoms in 1 kg of pure ${}_{94}^{239}\text{Pu}$ undergo fission.

Q 13.18: A 1000 MW fission reactor consumes half of its fuel in 5.00 y. How much ${}_{92}^{235}\text{U}$ did it contain initially? Assume that the reactor operates 80% of the time, that all the energy generated arises from the fission of ${}_{92}^{235}\text{U}$ and that this nuclide is consumed only by the fission process.

Ans:

The reactor consumes half of its fuel in 5 years. Therefore, the half-life of the fuel of the fission reactor, $t_{1/2} = 5 \times 365 \times 24 \times 60 \times 60 \text{ s}$

200 MeV is released during the fission of 1 g of ${}_{92}^{235}\text{U}$.

1 mole, i.e., 235 g of ${}_{92}^{235}\text{U}$, contains 6.023×10^{23} atoms.

The number of atoms in 1 g of ${}_{92}^{235}\text{U}$ is $(6.023 \times 10^{23}/235)$ atoms.

The total energy generated per gram of ${}_{92}^{235}\text{U}$ is $(6.023 \times 10^{23}/235) \times 200 \text{ MeV/g}$

$$= \frac{200 \times 6.023 \times 10^{23} \times 1.6 \times 10^{-19} \times 10^6}{235}$$

$$= 8.20 \times 10^{10} \text{ J/g}$$

The reactor operates only 80% of the time.

Therefore, the amount of ${}_{92}^{235}\text{U}$ consumed in 5 years by the 1000 MW fission reactor is

$$= \frac{5 \times 365 \times 24 \times 60 \times 60 \times 1000 \times 10^6}{8.20 \times 10^{10}} \times \frac{80}{100}$$

$$= 12614400/8.20$$

$$= 1538341 \text{ g}$$

$$= 1538 \text{ Kg}$$

Therefore, the initial amount of ${}_{92}^{235}\text{U}$ is $2 \times 1538 = 3076 \text{ Kg}$.

Q 13.19: How long can an electric lamp of 100 W be kept glowing by fusion of 2.0 kg of deuterium? Take the

fusion reaction as ${}^2_1\text{H} + {}^2_1\text{H} \rightarrow {}^3_2\text{He} + \text{n} + 3.27\text{MeV}$

Ans:

The fusion reaction given is ${}^2_1\text{H} + {}^2_1\text{H} \rightarrow {}^3_2\text{He} + \text{n} + 3.27\text{MeV}$

Amount of deuterium, $m = 2 \text{ kg}$

1 mole, i.e., 2 g of deuterium, contains 6.023×10^{23} atoms.

Therefore, 2 Kg of deuterium contains $(6.023 \times 10^{23}/2) \times 2000 = 6.023 \times 10^{26}$ atoms

From the reaction given, it can be understood that 2 atoms of deuterium fuse, 3.27 MeV energy are released. The total energy per nucleus released during the fusion reaction is

$$E = (3.27/2) \times 6.023 \times 10^{26} \text{ MeV}$$

$$= (3.27/2) \times 6.023 \times 10^{26} \times 1.6 \times 10^{-19} \times 10^6$$

$$= 1.576 \times 10^{14} \text{ J}$$

Power of the electric lamp, $P = 100 \text{ W} = 100 \text{ J/s}$

The energy consumed by the lamp per second = 100 J

The total time for which the electric lamp will glow is $1.576 \times 10^{14} / 100 = 1.576 \times 10^{12} \text{ s}$

$$= (1.576 \times 10^{12}) / (365 \times 24 \times 60 \times 60)$$

$$= (1.576 \times 10^{12}) / 3.1536 \times 10^7$$

$$= 4.99 \times 10^4 \text{ years.}$$

Q 13.20: Calculate the height of the potential barrier for a head-on collision of two deuterons. (Hint: The height of the potential barrier is given by the Coulomb repulsion between the two deuterons when they just touch each other. Assume that they can be taken as hard spheres of radius 2.0 fm.)

Ans :

When two deuterons collide head-on, the distance between their centres, d , is given as:

Radius of 1st deuteron + Radius of 2nd deuteron

Radius of a deuteron nucleus = 2 fm = 2×10^{-15} m

$$d = 2 \times 10^{-15} + 2 \times 10^{-15} = 4 \times 10^{-15} \text{ m}$$

Charge on a deuteron nucleus = Charge on an electron = $e = 1.6 \times 10^{-19}$ C

The potential energy of the two-deuteron system:

$$V = \frac{e^2}{4\pi\epsilon_0 d}$$

Where,

ϵ_0 = Permittivity of free space

$$\frac{1}{4\pi\epsilon_0} = 9 \times 10^9 \text{ Nm}^2\text{C}^{-2}$$

Therefore,

$$V = \frac{9 \times 10^9 \times (1.6 \times 10^{-19})^2}{4 \times 10^{-15}} \text{ J}$$

$$V = \frac{9 \times 10^9 \times (1.6 \times 10^{-19})^2}{4 \times 10^{-15} \times (1.6 \times 10^{-19})} \text{ eV}$$

$$= 360 \text{ keV}$$

Hence, the height of the potential barrier of the two-deuteron system is 360 keV.

Q 13.21: From the relation $R = R_0 A^{1/3}$, where R_0 is a constant and A is the mass number of a nucleus, show that the nuclear matter density is nearly constant (i.e. independent of A).

Ans:

The nuclear radius is given as

$$R = R_0 A^{1/3}$$

Here,

R_0 is Constant

A is the mass number of the nucleus

Nuclear matter density, ρ = Mass of the nucleus/Volume of the nucleus

Mass of the nucleus = mA

Density of the nucleus = $(4/3)\pi R^3$

$$= (4/3)\pi(R_0 A^{1/3})^3$$

$$= (4/3)\pi R_0^3 A$$

$$\rho = mA / [(4/3)\pi R_0^3 A]$$

$$= 3mA / (4\pi R_0^3 A)$$

$$\rho = 3m / (4\pi R_0^3)$$

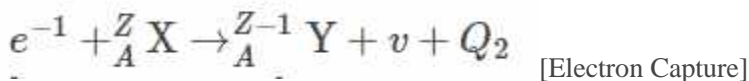
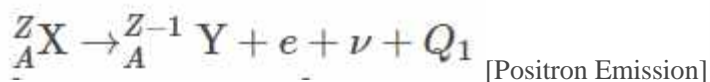
Hence, nuclear matter density is nearly a constant and is independent of A.

Q 13.22: For the β^+ (positron) emission from a nucleus, there is another competing process known as electron capture (Electron from an inner orbit, say, the K-shell, is captured by the nucleus and a neutrino is

emitted) $e^+ + {}^A_Z X \rightarrow {}^A_{Z-1} Y + \nu$. Show that if β^+ emission is energetically allowed, electron capture is necessarily allowed but not vice-versa.

Ans :

The chemical equations of the two competing processes are written as follows:



The Q-value of the positron emission reaction is determined as follows:

$$Q_1 = [m_N({}_Z^AX) - m_N({}_{Z-1}^AY) - m_e]c^2$$

$$Q_1 = [m({}_Z^AX) - Zm_e - m({}_{Z-1}^AY) + (Z-1)m_e - m_e]c^2$$

$$Q_1 = [m({}_Z^AX) - m({}_{Z-1}^AY) - 2m_e]c^2$$

The Q-value of the electron capture reaction is determined as follows:

$$Q_2 = [m_N({}_Z^AX) + m_e - m_N({}_{Z-1}^AY)]c^2$$

$$Q_2 = [m({}_Z^AX) - m({}_{Z-1}^AY)]c^2$$

In the equation, m_N is the mass of the nucleus, and m denotes the mass of the atom.

From equations (1) and (2), we understand that,

$$Q_1 = Q_2 - 2m_e c^2$$

From the above relation, we can infer that if $Q_1 > 0$, then $Q_2 > 0$; Also, if $Q_2 > 0$, it does not necessarily mean that $Q_1 > 0$.

In other words, this means that if β^+ emission is energetically allowed, then the electron capture process is necessarily allowed, but not vice-versa. This is because the Q-value must be positive for an energetically allowed nuclear reaction.

Q 13.23: In a periodic table, the average atomic mass of magnesium is given as 24.312 u. The average value is based on their relative natural abundance on earth. The three isotopes and their masses are ${}^{24}_{12}\text{Mg}$ (23.98504u), ${}^{25}_{12}\text{Mg}$ (24.98584u) and ${}^{26}_{12}\text{Mg}$ (25.98259u). The natural abundance of ${}^{24}_{12}\text{Mg}$ is 78.99% by mass. Calculate the abundances of the other two isotopes.

Ans:

Let the abundance of ${}^{25}_{12}\text{Mg}$ be $x\%$

The abundance of ${}^{26}_{12}\text{Mg} = (100 - 78.99 - x)\%$

$= (21.01 - x)\%$

The average atomic mass of magnesium

$$24.312 = \frac{23.98504 \times 78.99 + 24.98584x + 25.98259(21.01 - x)}{100}$$

$$24.312 \times 100 = 1894.57 + 24.98584x + 545.894 - 25.98259x$$

$$2431.2 = 2440.46 - 0.99675x$$

$$0.99675x = 2440.46 - 2431.2$$

$$0.99675x = 9.26$$

$$x = 9.26/0.99675$$

$$x = 9.290\%$$

The abundance of $^{25}_{12}\text{Mg}$ is 9.290%

The abundance of $^{26}_{12}\text{Mg} = (21.01 - x)\%$

$$= (21.01 - 9.290)\% = 11.71\%.$$

Q 13.24: The neutron separation energy is defined as the energy required to remove a neutron from the nucleus. Obtain the neutron separation energies of the nuclei $^{41}_{20}\text{Ca}$ and $^{27}_{13}\text{Al}$ from the following data:

$$m(^{40}_{20}\text{Ca}) = 39.962591 \text{ u}$$

$$m(^{41}_{20}\text{Ca}) = 40.962278 \text{ u}$$

$$m(^{26}_{13}\text{Al}) = 25.986895 \text{ u}$$

$$m(^{27}_{13}\text{Al}) = 26.981541 \text{ u}$$

Ans:

When the nucleons are separated from $^{41}_{20}\text{Ca} \rightarrow ^{40}_{20}\text{Ca} + {}^1_0\text{n}$

$$\text{Mass defect, } \Delta m = m(^{40}_{20}\text{Ca}) + m_n - m(^{41}_{20}\text{Ca})$$

$$= 39.962591 + 1.008665 - 40.962278$$

$$= 0.008978 \text{ amu}$$

$$\text{Neutron separation energy} = 0.008978 \times 931 \text{ MeV} = 8.362 \text{ MeV}$$

Similarly, $^{27}_{13}\text{Al} \rightarrow ^{26}_{13}\text{Al} + {}^1_0\text{n}$

$$\text{Mass defect, } \Delta m = m(^{26}_{13}\text{Al}) + m_n - m(^{27}_{13}\text{Al})$$

$$= 25.986895 + 1.008665 - 26.981541$$

$$= 26.99556 - 26.981541 = 0.014019 \text{ amu}$$

$$\text{Neutron separation energy} = 0.014019 \times 931 \text{ MeV}$$

$$= 13.051 \text{ MeV}.$$

Q 13.25: A source contains two phosphorous radionuclides $^{32}_{15}\text{P}$ ($T_{1/2} = 14.3\text{d}$) and $^{33}_{15}\text{P}$ ($T_{1/2} = 25.3\text{d}$). Initially, 10% of the decays come from $^{33}_{15}\text{P}$. How long one must wait until 90% do so?

Ans:

The rate of disintegration is

$$-(dN/dt) \propto N$$

Initially, 10% of the decay is due to $^{33}_{15}\text{P}$, and 90% of the decay comes from $^{32}_{15}\text{P}$.

We have to find the time at which 90% of the decay is due to $^{33}_{15}\text{P}$ and 10% of the decay comes from $^{32}_{15}\text{P}$.

Initially, if the amount of $^{33}_{15}\text{P}$ is N , then the amount of $^{32}_{15}\text{P}$ is $9N$.

Finally, if the amount of $^{33}_{15}\text{P}$ is $9N'$, then the amount of $^{32}_{15}\text{P}$ is N' .

For $^{32}_{15}\text{P}$,

$$\begin{aligned}\frac{N'}{9N} &= \left(\frac{1}{2}\right)^{t/T_{1/2}} \\ N' &= 9N\left(\frac{1}{2}\right)^{t/T_{1/2}} \\ N' &= 9N(2)^{-t/14.3} \quad \text{---(1)}\end{aligned}$$

For $^{33}_{15}\text{P}$

$$\begin{aligned}\frac{9N'}{N} &= \left(\frac{1}{2}\right)^{t/T_{1/2}} \\ 9N' &= N\left(\frac{1}{2}\right)^{t/T_{1/2}} \\ 9N' &= N(2)^{-t/25.3} \quad \text{---(2)}\end{aligned}$$

On dividing (1) by (2),

$$\frac{1}{9} = 9 \times 2^{\frac{t}{25.3} - \frac{t}{14.3}}$$

$$\frac{1}{81} = 2^{-\frac{11t}{25.3 \times 14.3}}$$

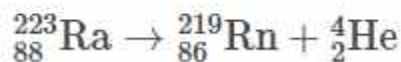
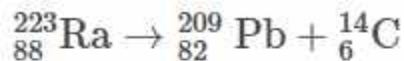
$$\log 1 - \log 81 = -\frac{11t}{25.3 \times 14.3} \log 2$$

$$-\frac{11t}{25.3 \times 14.3} = \frac{0 - 1.908}{0.301}$$

$$t = \frac{25.3 \times 14.3 \times 1.908}{11 \times 0.301} \approx 208.5 \text{ days}$$

Hence, it will take about 208.5 days for a 90% decay of $^{33}_{15}\text{P}$.

Q 13.26: Under certain circumstances, a nucleus can decay by emitting a particle more massive than an α -particle. Consider the following decay processes:



Calculate the Q-values for these decays and determine that both are energetically allowed.

Ans:



$$\Delta m = m({}_{88}\text{Ra}^{223}) - m({}_{82}\text{Pb}^{209}) - m({}_6\text{C}^{14})$$

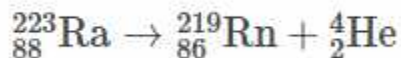
$$= 223.01850 - 208.9817 - 14.00324$$

$$= 0.03419 \text{ u}$$

The amount of energy released is given as

$$Q = \Delta m \times 931 \text{ MeV}$$

$$= 0.03419 \times 931 \text{ MeV} = 31.83 \text{ MeV}$$



$$\Delta m = m({}_{88}\text{Ra}^{223}) - m({}_{86}\text{Rn}^{219}) - m({}_2\text{He}^4)$$

$$= 223.01850 - 219.00948 - 4.00260$$

$$= 0.00642 \text{ u}$$

$$Q = 0.00642 \times 931 \text{ MeV} = 5.98 \text{ MeV}$$

As both the Q-factor values are positive, the reaction is energetically allowed.

Q 13.27: Consider the fission of ${}_{92}^{238}\text{U}$ by fast neutrons. In one fission event, no neutrons are emitted, and the final end products, after the beta decay of the primary fragments, are ${}_{58}^{140}\text{Ce}$ and ${}_{44}^{99}\text{Ru}$. Calculate Q-value for this fission process. The relevant atomic and particle masses are as follows:

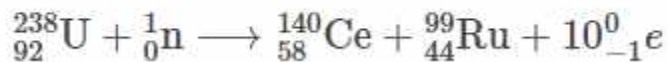
$$m({}_{92}^{238}\text{U}) = 238.05079 \text{ u}$$

$$m({}_{58}^{140}\text{Ce}) = 139.90543 \text{ u}$$

$$m({}_{44}^{99}\text{Ru}) = 98.90594 \text{ u}$$

Ans:

In the fission of $^{238}_{92}\text{U}$, 10 β^- particles decay from the parent nucleus. The nuclear reaction can be written as:



Given:

$$m_1 = ({}^{238}_{92}\text{U}) = 238.05079 \text{ u}$$

$$m_2 = ({}^{140}_{58}\text{Ce}) = 139.90543 \text{ u}$$

$$m_3 = ({}^{99}_{44}\text{Ru}) = 98.90594 \text{ u}$$

$$m_4 = {}^1_0\text{n} = 1.008665 \text{ u}$$

The Q value is given as

$$Q = [m'({}^{238}_{92}\text{U}) + m({}^1_0\text{n}) - m'({}^{140}_{58}\text{Ce}) - m'({}^{99}_{44}\text{Ru}) - 10m_e] c^2$$

Here,

m' is the atomic masses of the nuclei

$$m'({}^{238}_{92}\text{U}) = m_1 - 92 m_e$$

$$m'({}^{140}_{58}\text{Ce}) = m_2 - 58 m_e$$

$$m'({}^{99}_{44}\text{Ru}) = m_3 - 44 m_e$$

$$\text{Therefore, } Q = [m_1 - 92 m_e + m_4 - m_2 + 58 m_e - m_3 + 44 m_e - 10 m_e] c^2$$

$$= [m_1 + m_4 - m_2 - m_3] c^2$$

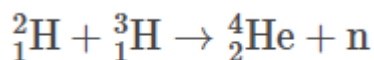
$$= [238.0507 + 1.008665 - 139.90543 - 98.90594] c^2$$

$$= 0.247995 c^2 \text{ u}$$

$$[1 \text{ u} = 931.5 \text{ MeV}/c^2]$$

$$Q = 0.247995 \times 931.5 = 231.007 \text{ MeV}$$

Hence, the Q-value of the fission process is 231.007 MeV.



Q 13.28: Consider the D-T reaction (deuterium-tritium fusion)

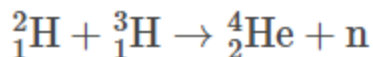
(a) Calculate the energy released in MeV in this reaction from the following data:

$$m({}^2_1\text{H}) = 2.014102 \text{ u}$$

$$m({}^3_1\text{H}) = 3.016049 \text{ u}$$

(b) Consider the radius of both deuterium and tritium to be approximately 2.0 fm. What is the kinetic energy needed to overcome the coulomb repulsion between the two nuclei? To what temperature must the gas be heated to initiate the reaction? (Hint: Kinetic energy required for one fusion event = average thermal kinetic energy available with the interacting particles = $2(3kT/2)$; k = Boltzman's constant, T = absolute temperature.)

Ans:



The Q-value is given as

$$Q = \Delta m \times 931 \text{ MeV}$$

$$= (m({}_1\text{H}^2) + m({}_1\text{H}^3) - m({}_2\text{He}^4) - m_n) \times 931$$

$$= (2.014102 + 3.016049 - 4.002603 - 1.00867) \times 931$$

$$Q = 0.0188 \times 931 = 17.58 \text{ MeV}$$

Therefore, the energy released in the given reaction is 17.58 MeV.

(b) Repulsive potential energy of two nuclei when they touch each other is

$$= \frac{e^2}{4\pi\epsilon_0(2r)}$$

Where ϵ_0 = Permittivity of free space

$$\begin{aligned} & \frac{1}{4\pi\epsilon_0} \\ &= 9 \times 10^9 \text{ Nm}^2\text{C}^{-2} \\ &= \frac{9 \times 10^9 \times (1.6 \times 10^{-19})^2}{2 \times 2 \times 10^{-15}} \text{ joule} \\ &= (23.04 \times 10^{-29}) / (4 \times 10^{-15}) \end{aligned}$$

$$= (23.04 \times 10^{-29}) / (4 \times 10^{-15})$$

$$= 5.76 \times 10^{-14} \text{ J}$$

The kinetic energy needed to overcome the coulomb repulsion between the two nuclei is

$$\text{K.E} = 5.76 \times 10^{-14} \text{ J}$$

$$\text{K.E} = 2 \times (3/2) \text{ KT}$$

$$\text{K is the Boltzmann constant} = 1.38 \times 10^{-23}$$

$$T = \text{K.E} / 3K = 5.76 \times 10^{-14} / (3 \times 1.38 \times 10^{-23})$$

$$= 5.76 \times 10^{-14} / (4.14 \times 10^{-23})$$

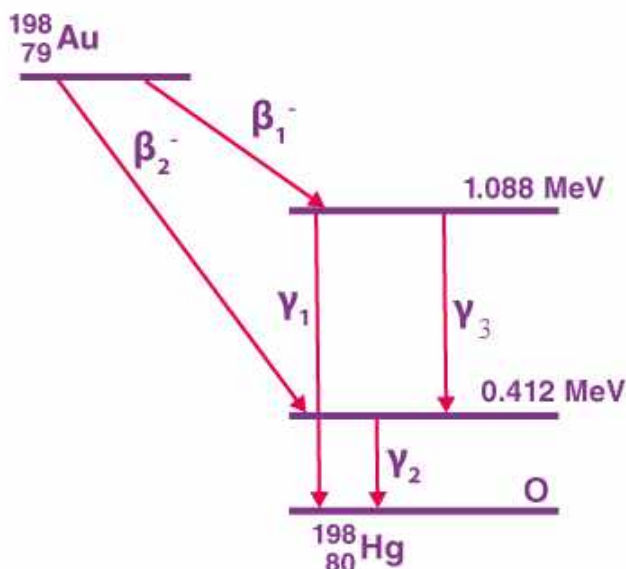
$$= 1.3913 \times 10^9 \text{ K}$$

Therefore, the kinetic energy needed to overcome the coulomb repulsion between the two nuclei is 1.3913×10^9 K.

Q 13.29: Obtain the maximum kinetic energy of β -particles and the radiation frequencies of γ decay in the decay scheme shown in Fig. 13.6. You are given that

$$m(^{198}\text{Au}) = 197.968233 \text{ u}$$

$$m(^{198}\text{Hg}) = 197.966760 \text{ u}$$



Ans:

From the γ decay diagram, it can be seen that γ_1 decays from the 1.088 MeV energy level to the 0 MeV energy level. The energy corresponding to γ_1 decay is given as

$$E_1 = 1.088 - 0 = 1.088 \text{ MeV}$$

$$h\nu_1 = 1.088 \times 1.6 \times 10^{-19} \times 10^6$$

Where,

$$h = \text{Planck's constant} = 6.6 \times 10^{-34} \text{ Js}$$

ν_1 = frequency of radiation radiated by γ_1 decay.

$$\nu_1 = \frac{E_1}{h} = \frac{1.088 \times 1.6 \times 10^{-19} \times 10^6}{6.6 \times 10^{-34}} = 2.637 \times 10^{20} \text{ Hz}$$

From the diagram, it can be observed that γ_2 decays from the 0.412 MeV energy level to the 0 MeV energy level.

The energy corresponding to γ_2 decay is given as

$$E_2 = 0.412 - 0 = 0.412 \text{ MeV}$$

$$h\nu_2 = 0.412 \times 1.6 \times 10^{-19} \times 10^6 \text{ J}$$

Where ν_2 is the frequency of the radiation radiated by γ_2 decay.

Therefore, $\nu_2 = E_2/h$

$$v_2 = \frac{E_2}{h} = \frac{0.412 \times 1.6 \times 10^{-19} \times 10^6}{6.6 \times 10^{-34}}$$

$$= 9.988 \times 10^{19} \text{ Hz}$$

From the gamma decay diagram, it can be γ_3 decays from the 1.088 MeV energy level to the 0.412 MeV energy level.

The energy corresponding to γ_3 is given as

$$E_3 = 1.088 - 0.412 = 0.676 \text{ MeV}$$

$$h\nu_3 = 0.676 \times 10^{-19} \times 10^6 \text{ J}$$

Where ν_3 = frequency of the radiation radiated by γ_3 decay

Therefore, $\nu_3 = E_3/h$

$$\nu_3 = \frac{E_3}{h} = \frac{0.676 \times 1.6 \times 10^{-19} \times 10^6}{6.6 \times 10^{-34}}$$

$$= 1.639 \times 10^{20} \text{ Hz}$$

The mass of Au is 197.968233 u

Mass of Hg = 197.966760 u

$$[1\text{u} = 931.5 \text{ MeV}/c^2]$$

The energy of the highest level is given as:

$$E = [m(^{198}_{78}\text{Au}) - m(^{190}_{80}\text{Hg})]$$

$$= 197.968233 - 197.96676 = 0.001473 \text{ u}$$

$$= 0.001473 \times 931.5 = 1.3720995 \text{ MeV}$$

β_1 decays from the 1.3720995 MeV level to the 1.088 MeV level

Therefore, the maximum kinetic energy of the β_1 particle = $1.3720995 - 1.088 = 0.2840995 \text{ MeV}$

β_2 decays from the 1.3720995 MeV level to the 0.412 MeV level

Therefore, the maximum kinetic energy of the β_2 particle = $1.3720995 - 0.412 = 0.9600995$.

Q 13.30. Calculate and compare the energy released by a) the fusion of 1.0 kg of hydrogen deep within the sun and b) the fission of ^{235}U in a fission reactor.

Ans:

Amount of hydrogen, $m = 1 \text{ kg} = 1000 \text{ g}$

(a) 1 mole, i.e., 1 g of hydrogen, contains 6.023×10^{23} atoms. Therefore, 1000 g of hydrogen contains $6.023 \times 10^{23} \times 1000$ atoms.

In the sun, four hydrogen nuclei fuse to form a helium nucleus and will release the energy of 26 MeV

The energy released by the fusion of 1 kg of hydrogen,

$$E_1 = (6.023 \times 10^{23} \times 1000 \times 26)/4$$

$$E_1 = 39.16 \times 10^{26} \text{ MeV}.$$

(b) Amount of $^{235}\text{U} = 1 \text{ kg} = 1000 \text{ g}$

1 mole, i.e., 235 g of uranium, contains 6.023×10^{23} atoms. Therefore, 1000 g of uranium contains $(6.023 \times 10^{23} \times 1000)/235$ atoms.

The energy released during the fission of one atom of $^{235}\text{U} = 200 \text{ MeV}$

The energy released by the fission of 1 Kg of ^{235}U ,

$$E_2 = (6.023 \times 10^{23} \times 1000 \times 200)/235$$

$$E_2 = 5.1 \times 10^{26} \text{ MeV}$$

$$(E_1/E_2) = (39.16 \times 10^{26}/5.1 \times 10^{26})$$

$$= 7.67$$

The energy released in the fusion of hydrogen is 7.65 times more than the energy released during the fission of Uranium.

Q 13.31. Suppose India had a target of producing, by 2020 AD, 200,000 MW of electric power, ten per cent of which was to be obtained from nuclear power plants. Suppose we are given that, on average, the efficiency of utilisation (i.e., conversion to electric energy) of thermal energy produced in a reactor was 25%. How much amount of fissionable uranium would our country need per year by 2020? Take the heat energy per fission of ^{235}U to be about 200MeV.

Ans:

$$\text{Electric power to be generated} = 2 \times 10^5 \text{ MW} = 2 \times 10^5 \times 10^6 \text{ J/s} = 2 \times 10^{11} \text{ J/s}$$

10 % of the amount is obtained from the nuclear power plant

$$P_1 = (10/100) \times 2 \times 10^{11} \times 60 \times 60 \times 24 \times 365 \text{ J/year}$$

The heat energy released during per fission of a ^{235}U nucleus, $E = 200 \text{ MeV}$

Efficiency of the reactor = 25%

The amount of energy converted to electrical energy in fission is $(25/100) \times 200 = 50 \text{ MeV}$

$$= 50 \times 1.6 \times 10^{-19} \times 10^6 = 80 \times 10^{-13} \text{ J}$$

Required number of atoms for fission per year

$$= [(10/100) \times 2 \times 10^{11} \times 60 \times 60 \times 24 \times 365]/80 \times 10^{-13}$$

$$= 788400 \times 10^{23} \text{ atoms}$$

1 mole, i.e., 235 g of ^{235}U , contains 6.023×10^{23} atoms

Mass of 6.023×10^{23} atoms of $^{235}\text{U} = 235 \times 10^{-3} \text{ kg}$

Mass of 788400×10^{23} atoms of ^{235}U

$$= [(235 \times 10^{-3}) / (6.023 \times 10^{23})] \times 78840 \times 10^{24}$$

$$= 3.076 \times 10^4 \text{ Kg}$$

Hence, the mass of uranium needed per year is $3.076 \times 10^4 \text{ Kg}$.

