










**Question 1:**

Make the given amount using different combinations of coins.



**Answer:**

1 rupee	
2 rupees	 
2 rupees	
3 rupees	  
3 rupees	 

**Question 2:**

Make the given amount using different combinations of coins.



**Answer:**

4 rupees	
4 rupees	
4 rupees	

5 rupees	
5 rupees	
5 rupees	
5 rupees	

**Question 3:**

Make the given amount using different combinations of coins.



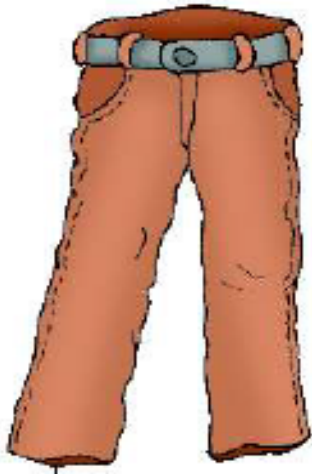
**Answer:**

6 rupees	
6 rupees	
6 rupees	
6 rupees	
6 rupees	

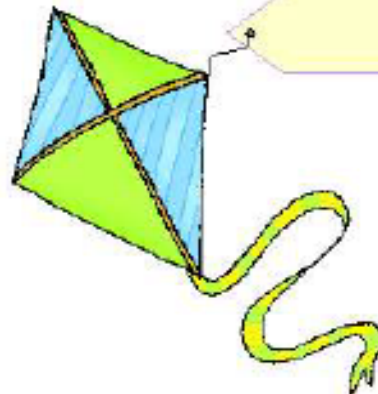
**Question 4:**

Discuss with your friends and guess the price.

Answer:



Rs. 20



Answer:

